

Republic Of Iraq
Ministry Of Education
General Directorate of Curricula

MATHEMATICS

Scientific Secondary fourth

Authors

Dr. Tariq Shaaban Regeb
Yosif Shereef Al-miaamar
Mohammed Abdul Gafor Al-gewahery

Fourteenth translated Edition

2023 / 1445

Scientific Supervisor
Marwah Flayyih Hasan

Design Supervisor
Osama Abdulrasol Yuons

الموقع والصفحة الرسمية للمديرية العامة للمناهج

www.manahj.edu.iq

manahjb@yahoo.com

Info@manahj.edu.iq



[manahjb](#)

[manahj](#)



استناداً إلى القانون يوزع مجاناً ويمنع بيعه وتداوله في الأسواق

Introduction

This book is the first course of a series of modern math books for scientific high-school classes and it consists of seven chapters:

Chapter one: Mathematical Logic

Chapter two: Equations and Inequalities

Chapter three: Roots and Exponent

Chapter four: Trigonometry

Chapter five: Vectors

Chapter six: Analytical Geometry

Chapter seven: Statistics

We hope God help us to serve our Country and our Sons.

Authors

1

Chapter 1: Mathematical Logic

[1-1] Logical Statement

[1-2] Connective word if then

[1-3] Connective if and only if

[1-4] Implication

[1-5] Open Statement

[1-6] Equivalent open statements

[1-7] Quantified Statements

Aims and Skills;

At the end of studying this chapter the student should be able to:

- Learn the truth value of the proposition and their negation and the compound statements.
- Learn the open statements and compound statements by knowing the connective symbols.
- Learn the equivalence of open statement.
- Learn the Quantified statements and their negations.

<i>Term</i>	<i>Symbol</i>
Logical statement	
Connective word and	\wedge
Or	\vee
Connective if.... Then..	\rightarrow
Connective word if and only if	\leftrightarrow
Implication	$\Leftrightarrow, \Rightarrow$
Quantifying and partial symbol	\forall, \exists

Mathematical logic

In order to obtain an accurate result for our problems in math we need a series of steps one related to other so math can be seen as a logical system, and writing math statements by symbols and formulas easy to use is said to be Mathematical Logic. According to this logic is not a theory but consider a language by all math scientists so they set agreements to explain the mathematical statements we use.

[1-1] Logical statement

You have studied the logic in the third intermediate class last year mathematical logic is divided into two kinds of statements:

A) Non-statements

B) Statements

Statements are the type which can be considered either True or False and it's called logical statement.

$\sim P$	P
F	T
T	F

(1-1)

If we symbolize the logical statement as P then the P is (True)(T) when the statement is correct and P is (False)(F) when the statement is wrong and the negation of P is True as shown in Table (1-1).

It's useful to remind the truth table for conjunction (\wedge), disjunction (\vee)

P	Q	$P \vee Q$
T	T	T
T	F	T
F	T	T
F	F	F

(1-2)

P	Q	$P \wedge Q$
T	T	T
T	F	F
F	T	F
F	F	F

(1-3)

[1-2] Connective: If ... then

In this lesson, we will learn the connective “if ... Then” It's used to form compound statements.

Such as:

If the triangle ABC is Isosceles then the angles of its base are equal this compound consists of connecting the statement of The triangle ABC is Isosceles “ with the statement “ The angles of the base equal by using the connective if then

Here the statement comes after 'if' is called antecedent while the statement as whole “ifthen” is called condition.

So “ifthen” condition statement

So the statement (the triangle ABC is isosceles) is antecedent and the statement (The angles of the base are equal) is consequent.

Let`s examine this example:

The mother says: (if you pass the exam, then I will buy you a gift)

Let`s study the following cases:

- 1) The son passes the exam and the mother buys him a gift.
- 2) The son passes the exam and the mother does not buy him a gift.
- 3) The son does not pass the exam and the mother buys him a gift.
- 4) The son does not pass the exam and the mother does not buy him a gift.

We accept the first third and fourth cases as true but if the second case occurs, the statement in this case as false.

We denote the antecedent and consequent by p and q relatively and this compound statement is denoted as $P \rightarrow Q$.
and read ((if P then Q))

The truth table of the statement is:

P	Q	$P \rightarrow Q$
T	T	T
T	F	F
F	T	T
F	F	T

(1-4)

So $P \rightarrow Q$ is false in only one case. If the antecedent is true and consequent is false

Example 1

Consider the Truth value of the following statements:

- 1) If $\sqrt{2} < \sqrt{3}$ then $\sqrt{-2} \notin \mathbb{R}$
- 2) If $7 + 5 = 12$ then $6 + 2 = 7$
- 3) If $7 + 5 = 11$ then $6 + 2 = 8$
- 4) If $1 = 0$ then $\sqrt{3}$ is a rational number

Solution:

- 1) True since antecedent is True and consequent is True.
- 2) False since antecedent is True and consequent is False.
- 3) True since antecedent is False and consequent is True.
- 4) True since antecedent is False and consequent is False

[1-3] If and only if

We often use the compound statement:

$$(Q \rightarrow P) \wedge (P \rightarrow Q)$$

For example, the triangles is equivalent if and only if the measure of its angles are equal also the angle measures of a triangle are equal if and only if it is equilateral

Such compound statements are called biconditional if we suppose p and q are two statements then the biconditional statement $(Q \rightarrow P) \wedge (P \rightarrow Q)$ is denoted by $(P \leftrightarrow Q)$

And read as P if and only if Q

The table (1-5) is the truth table of the statement $(P \leftrightarrow Q)$

$$P \leftrightarrow Q$$

P	Q	$P \rightarrow Q$	$Q \rightarrow P$	$(p \rightarrow Q) \wedge (Q \rightarrow p)$
T	T	T	T	T
T	F	F	T	F
F	T	T	F	F
F	F	T	T	T

(1-5)

So $P \leftrightarrow Q$ is True in only two cases if the two compound statements same true together or two compound statements are false together

Example 2

A) $X=-1, X=4 \leftrightarrow X^2-3X-4=0$

B) $X^5=-32 \leftrightarrow X=-2$

[1-4] Implication

We will explain the implication by the following two cases:

The first case: One side implication denoted by \Rightarrow

Let's symbolize $x = 3$ by P and $x^2 = 9$ by Q

If $x = 3$ is True this implies that $x^2 = 9$

then $P \Rightarrow Q$

and $x^2 = 9$ if then $x = \pm 3$ then $Q \not\Rightarrow P$

The second case: Two sides implication denoted by \Leftrightarrow

Let's symbolize $x = 3$ by P and

Let's symbolize $x^3 = 27$ by Q

If $x = 3$ is True this implies that $x^3 = 27$

Then $P \Rightarrow Q$

And if $x^3 = 27$ is True, this implies that $x = 3$

Then $Q \Rightarrow P$

$$Q \Rightarrow P \wedge P \Rightarrow Q \text{ mean that } Q \Leftrightarrow P$$

Example 3

Choose a suitable symbol (\Leftrightarrow , \Rightarrow) for the following statements.

A) $x^3 = 8$, $x = 2$

B) $x > 5$, $x > 2$

C) $x^2 \geq 0$, $x \leq 0$

D) P: QABCD is a quadrilateral in which two diagonals bisect each other, ABCD is a parallelogram.

Solution

A) $x^3 = 8 \Leftrightarrow x = 2$

B) $x > 5 \Rightarrow x > 2$

C) $x \leq 0 \Rightarrow x^2 \geq 0$

D) $Q \Leftrightarrow P$

Equivalent Statements

Definition 1-1

The statement P is said to be equivalent to statement Q if both have the same truth table and denoted by $P \equiv Q$

Example 4

Prove that $P \rightarrow Q \equiv \sim P \vee Q$

Solution

We construct the following table:

P	Q	$\sim P$	$P \rightarrow Q$	$\sim P \vee Q$
T	T	F	T	T
T	F	F	F	F
F	T	T	T	T
F	F	T	T	T

\equiv

[1-1] Exercises

Q1

Determine if the following statement is true or false and mention the reason:

A) 25 is divisible by 5 and 25 is divisible by 7.

B) 25 is divisible by 5 or 25 is divisible by 7.

C) 7 is not a prime number or 4 is a prime number.

D) Diagonals of the square are perpendicular or diagonals of the rectangle are perpendicular.

E) Diagonals of the square are perpendicular or diagonals of the parallelogram are bisect each other.

Q2

Use \Rightarrow or \Leftrightarrow to connect the statement in the following table to obtain True statements:

Statement P	Symbol	Statement Q
A quadrilateral is a rectangle		The diagonals of the quadrilateral bisect each other
A quadrilateral is Rhombus		The side of the quadrilateral are congruent
A quadrilateral is a rectangle		The angles of the quadrilateral are right angles
$a.b=0, a,b \in \mathbb{R}$		$a=0 \vee b=0$
$x = -3$		$x^2 = 9$
A quadrilateral is a square		The angles of the quadrilateral are right angles
$x = 5$		$x^2 = 25$
$x = -5$		$x^3 = -125$
ABC is a Isosceles Triangle		ABC is Equilateral Triangle
$(x-1)(x-2)=0$		$x=1 \vee x=2$

Q3

Prove that:

$$1) P \rightarrow Q \equiv \sim Q \rightarrow \sim P$$

$$2) \sim(P \rightarrow Q) \equiv P \wedge \sim Q$$

Q4

If O is True, Q is True and S is False which of the following statements are true and which ones are false?

$$1) (P \rightarrow Q) \vee S$$

$$2) (P \leftrightarrow S) \wedge P$$

$$3) (S \rightarrow Q) \wedge P$$

$$4) (S \leftrightarrow S) \vee S$$

Q5

Chose the correct answer:

Consider that P and S are two statements in the followings:

1) $P \rightarrow \sim P$ is equivalent to

$$A) P \rightarrow P \quad B) \sim P \rightarrow P \quad C) \sim P \quad D) \sim P \wedge P$$

2) $s \leftrightarrow s$ is a statement

A) Always True B) True once only C) Always False
D) False only once

3) The negation of the statement is: $\sim S \vee \langle 9 > 5 + 3 \rangle$

$$A) \sim S \vee \langle 9 < 5 + 3 \rangle \quad B) \sim S \vee \langle 9 \geq 5 + 3 \rangle$$

$$C) S \wedge \langle 9 \leq 5 + 3 \rangle \quad D) \sim S \wedge \langle 9 \leq 5 + 3 \rangle$$

[1-5] Open Sentences

We learned that logical statements can be classified either True or False but if we examine the following sentences:

A) x is an integer greater than 0 denoted by $P(x)$

B) $y + 1 = 3$ which is denoted by $Q(x)$

C) $a+b=6$ such that a, b are integers which denoted by $G(a, b)$

D) is one of Iraq Cities.

We find that it's impossible to consider any of the sentences as Logical statement. But if we substitute 9 instead of x in the sentences A it becomes (9 is an integer greater than zero) and it's the s a True statements and if we substitute a value for (Y) in the sentence (B) to make it False statements and if we substitute 3 instead of a and b in the sentence C we obtain the statement ($6=3+3$) which is True write a suitable name in the blank of sentences D to obtain a True statements.

Definition (1-2)

1) The variable: is a symbol representing the value of a group of objects from the set of substitution.

2) Open sentence: is a sentence contains one or more variables changes to logical statements when a value is replaced instead of the variable from the set of substitution.

[1-6] Equivalence of open sentences

Let $P(X): 2X=4$

$Q(x): X-1=1$

Suppose the substitution set for each is the set of integers (Z) we notice the solution set for $P(x)$ is $\{2\}$ and the solution set for $Q(x)$ is $\{2\}$ the open sentences $Q(x)$ and $P(x)$ are said to be equivalent since their solution set are equal.

Example 5

If $P(X): X=2$

$Q(X): X^2=4$

and the substitution set for each is the set of integers (Z) are $P(x)$ and $Q(x)$ equivalent?

Solution

Notice that the solution of $P(x)$ is $\{2\}$ and the solution set of $Q(x)$ is $\{2, -2\}$ since $\{2, -2\} \neq \{2\}$, $P(x)$ and $Q(x)$ are not equivalent.

Definition (1-3)

The negation of open sentences $\sim P(x)$ is 'not $P(x)$ ' or any open sentence equivalent it denoted by $\sim P(x)$.

Example 6

Suppose that the substitution set for each of the following is the set of integers (Z):

$P(x)$ Open Sentences	It's Negation $\sim P(x)$
$x^2-4=0$	$x^2-4 \neq 0$
x is even number	x isn't even number
$x=4$ and $x+1 \neq 6$	$x \neq 4$ or $x+1=6$



Exercises 1-2

Q1) Write the solution set for each of the following open sentence:

Open sentences

Substitution set

A) $x > 3$	N
B) $X^2 - 11X + 30 = 0$	$\{10, 6, 5, 3\}$
C) $(X-1)(X - \frac{3}{5})(X-30) = 0$	Z
D) $(X-1)(X-5) = 0$ and $X > 4$	N
E) x is not divisible by 4	$\{10, 8, 6, 4, 2\}$
F) $X+5 \geq 0$	Z

Q2) There exist a pair of open sentences in each of the following. Determine which pairs represent equivalent open sentences with substitution set Z.

- | | |
|---|----------------------------------|
| A) $X-3=3$, $3X-5=X+7$ | B) $x = 2$, $x^2 = 4$ |
| C) $X=3$ or $X^2=9$ or $X=-3$ | |
| D) $X+1=0$, $(X+1)(2X+1)=0$ | E) $X^2-6X+5=0$, $(X-1)(X-5)=0$ |
| F) $x = 0$, x is greater than -1 less than 1 | |
| G) $(X-1)(X-2)=0$, $3 > X \geq 0$ | |

Q3) Negate each of the followings and find the solution set for the negated sentence using the substitution set $\{1, 2, 3, 4, 5\}$

- | | | |
|-----------------------------|------------------------|-------------------|
| A) $2x = 4$ | B) $x + 4 = 7$ | C) $(X-3)(X-4)=0$ |
| D) $X+2=4$ and $X^2 \neq 9$ | E) $X-1=4$ or $X^2=16$ | |

Q4) if x and y are elements of the set $\{0, 1, 2, 3, 4, 5, 6, 7, 8, 9\}$, write the solution set for each of the open sentences in the form of ordered pair

- | | |
|--------------------|-----------------|
| A) $X \cdot Y = 3$ | B) $x + y = 15$ |
|--------------------|-----------------|

[1-7] Quantified Statements

[1-7-1] Universal Quantified Statement and Existential Quantified Statement

Mathematical logic often uses symbols instead of words, in this lesson we will learn two symbols:

First: If we want to state that every element of set A makes $f(x)$ a True statement we say it for all a in A such that $F(a)$ is True statements

Or for all $a \in A$ such that $f(a)$ is True statement. The symbol \forall is called the universal quantifier and the statement $\forall a \in A, F(a)$ is True then it's called universal quantified statement

For example:

$(x+1)^2 = x^2 + 2x + 1$ is True for every Natural Number to be substituted for x , and it can be written as:

$$\forall x \in \mathbb{N} \text{ such that } (x+1)^2 = x^2 + 2x + 1.$$

Second: If we want to state that some of the elements in the set A make $G(x)$ a true statement then we say:

There exists on an element in A makes $G(x)$ a True statement and denoted by $\exists b \in A$ such that $G(b)$ is a True statement the symbol \exists is called the Existential Quantifier and the statement $\exists b \in A, G(b)$ is Existential Quantified Statement.

For instance: If we want to state the equation $x+1=2$ has a solution in an integer (\mathbb{Z}):

Then we say $\exists x \in \mathbb{Z}$ such that $x+1=2$, and read it as:

'There exists an element $x \in \mathbb{Z}$ such that the equation $x+1=2$ is True'

[1-7-2] Negation of Quantified Statements

When negation the Quantified Statements we consider the following:

Every statement can only and only one be true or false

- For Example, If we want to Negate the statement

Every perpendicular drawn from the center of the circle bisect the chord

We say:

There exist at least one chord drawn on the circle such that the perpendicular line which passes through the center not bisects it.

- If we want to prove the mistake of:

Every Natural Number divisible by 2 is divisible by 6,

It's enough to mention the correct statement:

There exist at least a Natural Number divisible by 2 and not divisible by 6.

- If we want to negate:

There exist at least one Right triangle doesn't satisfy Pythagorean theorem

We say Every Right triangle satisfy the Pythagorean theorem.
From the previous examples we conclude:

$$\sim [P(x) \text{ is that } \forall x \in X] \equiv \sim P(x) \text{ such that } \exists x \in X$$

$$\sim [P(x) \text{ is that } \exists x \in X] \equiv \sim P(x) \text{ such that } \forall x \in X$$

Example 7

Negate each of the following:

1) $\forall x$ such that $P(x)$ is :

$P(x)$: if x is a Natural number then $x > 0$

2) $\exists x$ such that $P(x)$ is;

$P(x)$: x is positive even number

3) $P \vee [\exists x \in R: x+3 \geq 5]$

Solution

$$1) \exists x \text{ such that } \sim [P(x) \text{ that is } \forall x] \equiv \sim P(x)$$

$$\sim \exists x: \sim P(x) \text{ a natural number such that } x \leq 0$$

By words: there exist a natural number less than or equal to zero.

$$2) \forall x \text{ such that } \sim P(x) \equiv \sim P(x)$$

$$\forall x: \sim P(x) \text{ even numbers } x \text{ is not positive.}$$

By words: for every even number x , x is not positive.

$$3) \sim P \wedge [\forall x \in \mathbb{R}: x+3 < 5]$$

[1-7-3] Tautology

Let's consider the logical statements P , if all the logical possibilities of this statements are true then P represents a **Tautology**.

Example 8

Let P be a statements does $P \vee \sim P$ represent a Tautology?

Solution

Then P
represents Tautology

P	$\sim P$	$P \vee \sim P$
T	F	T
F	T	T

Note: If all the truth values are False then it represents a (Contradiction).



Exercises 1-3

Q1) Negate each of the following without using 'Not True':

- A) All the similar triangles are Isosceles.
- B) Some of the similar triangles are non-congruent.
- C) If the triangle is Right angle, then it is Isosceles.
- D) Some equations have no solution.
- E) Every four-side figure is a rectangle.
- F) $Q: \forall x \in \mathbb{N} : x^2 = 25$
- G) $(\forall x \in \mathbb{R} : x < 8) \wedge P$

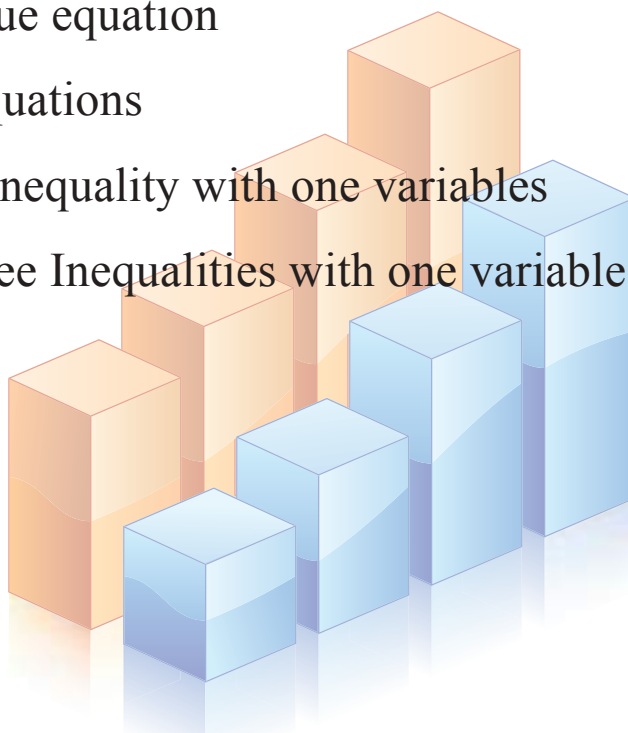
Q2) Determine the truth value for each of the following:

- A) $\forall x$ such that $p(x)$ is:
 $P(x)$: if x is a natural number then $x^2 = x$
- B) $\exists x$ such as $P(x)$ is:
 $P(x)$: x is natural number $x^2 = x$
- C) $\forall x$ such that $P(x)$ is:
 $P(x)$: if x is negative then x^2 is positive.
- D) Q, P are two logical statements: $Q \wedge P \rightarrow Q$ is a Tautology
- E) P is a statement then $\sim P \wedge P$ is a contradiction.
- F) P and Q are two logical statements $(P \leftrightarrow Q) \leftrightarrow (P \leftrightarrow Q)$ is a Tautology.

- [2-1] Absolute value and graphing the function $y = |x|$
- [2-2] Solving Absolute value Equations
- [2-3] Solving system of Equation with two variables
- [2-4] Intervals
- [2-5] Solving first degree Inequalities with one variable
- [2-6] Solving second degree Inequalities with one variable

Aims and Skills

- Learning the Absolute value
- Solving Absolute value equation
- Solving System of equations
- Solving first-degree inequality with one variables
- Solving Second-degree Inequalities with one variable



Definition (2-15)

The absolute value of the real number x denoted by $|x|$ is defined as:

$$|x| = \begin{cases} x, & \forall x > 0 \\ 0, & x = 0 \\ -x, & \forall x < 0 \end{cases}$$

Example 1

Solve each of the following Absolute value by definition:

A) $|3 - \sqrt{10}|$ B) $|x - 3|$ such that $x \in \mathbb{R}$

Solution

Since

A) $3 - \sqrt{9} < \sqrt{10} \quad \therefore |3 - \sqrt{10}| = \sqrt{10} - 3 > 0$

$\therefore |3 - \sqrt{10}| = \sqrt{10} - 3 > 0$

B) $|x - 3| = \begin{cases} x - 3, & \forall x > 3 \\ 0, & x = 3 \\ -x + 3, & \forall x < 3 \end{cases}$

The following properties of Absolute value can be concluded from the definition:

1) $\forall x \in \mathbb{R}$ then $|x| \geq 0$

2) $\forall x \in \mathbb{R}$ then $|-x| = |x|$

3) $\forall x \in \mathbb{R}$ then $-|x| \leq x \leq |x|$

4) $\forall x \in \mathbb{R}$ then $|x|^2 = x^2$

5) $\forall x \in \mathbb{R}$ then $|x \cdot y| = |x| \cdot |y|$, $|\frac{x}{y}| = \frac{|x|}{|y|}$ such then $y \neq 0$

6) $\forall x, y \in \mathbb{R}$ then $|x + y| \leq |x| + |y|$

7) $\forall a > 0, x \in \mathbb{R}$ if $|x| \leq a$ then $-a \leq x \leq a$

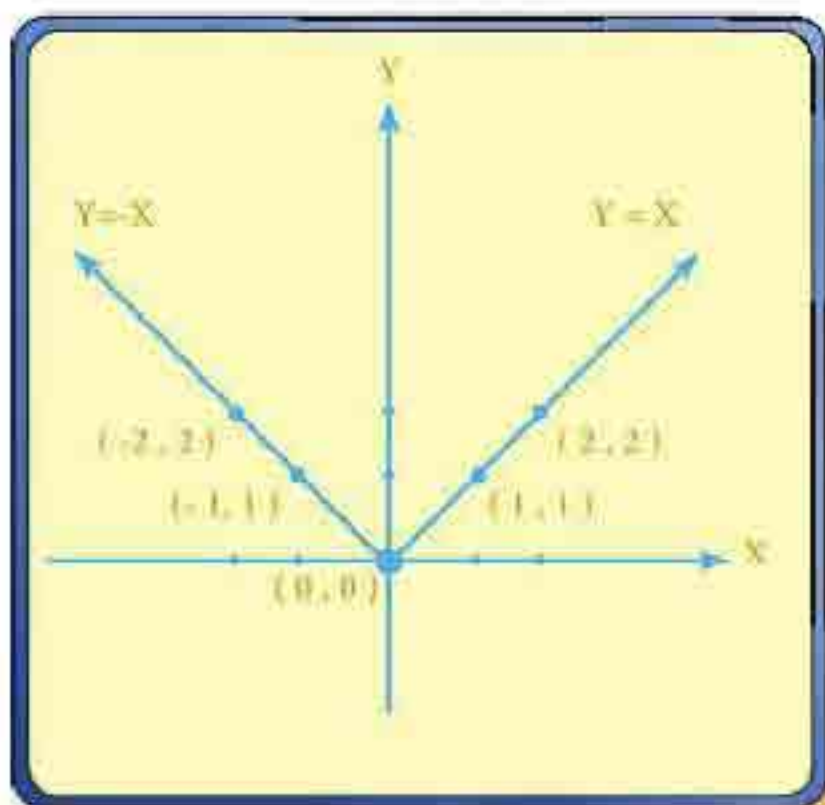
Example 2

Graph $y = |x|$

Solution

$$Y = \begin{cases} X, & \forall X \geq 0 \\ 0, & X = 0 \\ -X, & \forall X < 0 \end{cases}$$

According to definition (2,15):



$$Y = |X|$$

First: Graph the line

$$x \geq 0, Y = X$$

X	Y	(X, Y)
0	0	(0, 0)
1	1	(1, 1)
2	2	(2, 2)

Second:

$$X < 0, Y = -X;$$

X	Y	(X, Y)
0	0	(0, 0) gap
-1	1	(-1, 1)
-2	2	(-2, 2)

Example 3

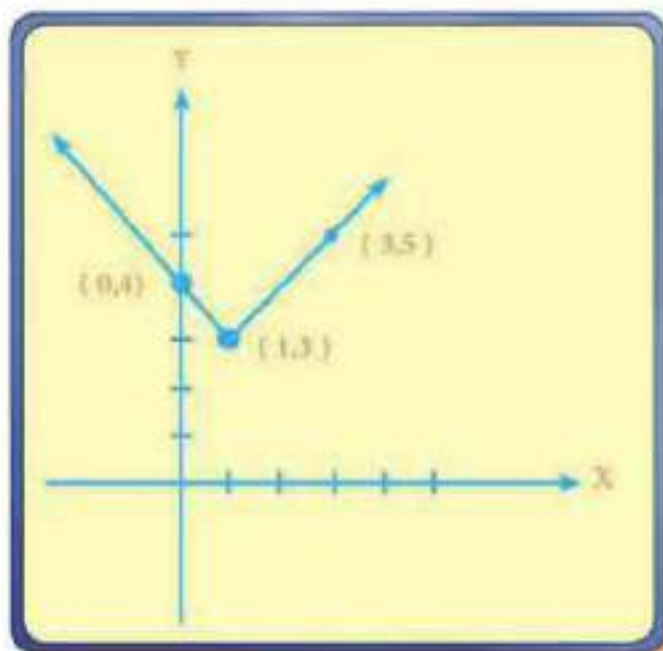
Graph $Y = |X - 1| + 3$

Solution

By the definition (2-15)

$$Y = \begin{cases} (X-1)+3, & \forall X \geq 1 \\ (-X+1)+3, & \forall X < 1 \end{cases}$$

$$\therefore Y = \begin{cases} X+2, & \forall X \geq 1 \\ -X+4, & \forall X < 1 \end{cases}$$



$$Y = |X - 1| + 3$$

First: graph straight line:

$$\forall X \geq 1, Y = X + 2$$

Second: Graph the

straight line: $\forall X < 1, Y = -X + 4$

X	Y	(Y, X)
1	3	(1, 3)
3	5	(3, 5)

X	Y	(X, Y)
1	3	(1, 3) gap
0	4	(0, 4)

[2-2] Solving the Equations with absolute value

Example 4

Find the solution set of the equation $|3x + 6| = 9$ such that $x \in \mathbb{R}$:

Solution

From the definition of the absolute value we conclude that:

$$|3X+6| \begin{cases} 3X+6 & \text{such then} & 0 \leq 3X+6 & \text{then} & -2 \leq X \\ -(3X+6) & \text{such then} & 0 > 3X+6 & \text{then} & -2 > X \end{cases}$$

This equation is equivalent to the system:

$$\begin{cases} 3X+6=9 & \text{the substitution set is} & \{ X: X \geq -2 \} \\ -3X-6=9 & \text{the substitution set is} & \{ X: X < -2 \} \end{cases}$$

We can consider this a system of equations with two variables x, y where the coefficient of $y = 0$. And the solution set of this system is:

$$S_1 = \{ 1 \}, S_2 = \{ -5 \} \text{ then the solution set is} \\ S = S_1 \cup S_2 = \{ 1, -5 \}$$

Example 5

Find the solution set of the equation $\forall X \in \mathbb{R}, X^2 |X| - 8 = 0$.

Solution

By the definition of the absolute value $X^2 |X| - 8 = 0$ is equivalent to system:

$$X^3 - 8 = 0, \forall X \geq 0 \Rightarrow X^3 = 8 \Rightarrow X = 2$$

$$S_1 = \{2\}$$

$$-X^3 - 8 = 0, \forall X < 0 \Rightarrow X^3 = -8 \Rightarrow X = -2$$

$$S_2 = \{-2\}$$

$$S = S_1 \cup S_2 = \{2, -2\}$$

Example 6

Find the solution set for $X^2 + |X| - 12 = 0, \forall X \in \mathbb{R}$.

Solution

By the definition of absolute value $X^2 + |X| - 12 = 0$ is equivalent to

$$X^2 + X - 12 = 0, \forall X \geq 0 \Rightarrow (X + 4)(X - 3) = 0$$

Either $x = +4$ (neglected) why? or $x = 3$

Then $S_1 = \{3\}$

$$X^2 - X - 12 = 0, \forall X < 0 \Rightarrow (X - 4)(X + 3) = 0$$

Either $x = +4$ (neglected) why? or $x = -3$

Then:

$$S_2 = \{-3\}$$

$$S = S_1 \cup S_2 = \{3, -3\}$$

[2-3] Solving System of Equations with two variables

You have learned to solve two first degree equations with two variables graphically if S_1 is the solution of the first equation and S_2 is a solution of the second equation then $S = S_1 \cap S_2$ if the two equations are related by the connective “and” and if the connective is “or” the solution is $S = S_1 \cup S_2$

Example 7

Solve the following system by analytically and graphically in R

$$X - 2Y = 5$$

$$2X + Y = 0$$

Solution

By analytically

We multiply the 2nd equation by 2

$$\begin{array}{rcl} X - 2Y & = & 5 \\ 4X + 2Y & = & 0 \quad \text{we add the equations} \\ \hline \end{array}$$

$$5X = 5 \Rightarrow X = 1$$

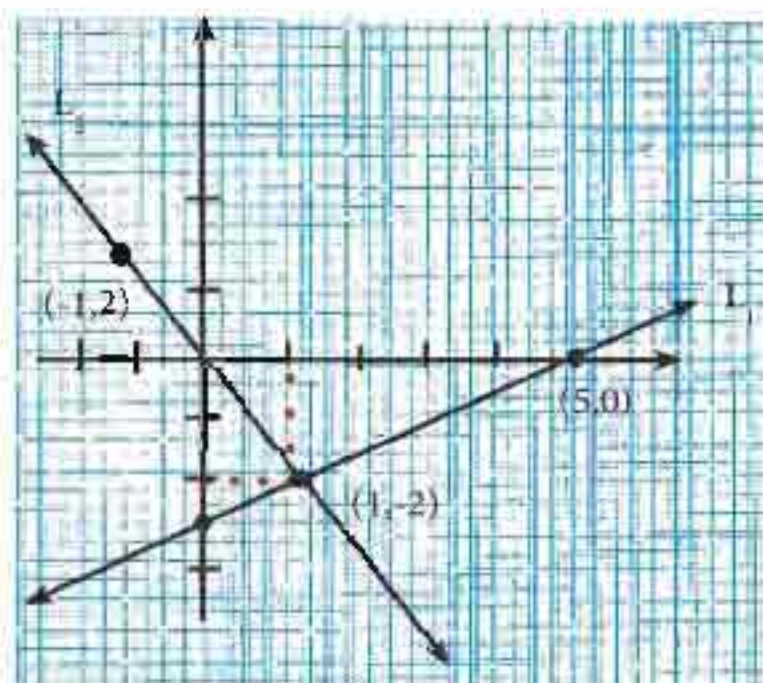
Substitute in equation (1)

$$1 - 2Y = 5$$

$$\Rightarrow Y = -2$$

$S.S = \{(1, -2)\}$ and it represents the intersection point of two lines.

Graphically: The first line $X - 2Y = 5$: L_1



$$(L_1): x - 2y = 5$$

X	Y	(X, Y)
0	-5/2	(0, -5/2)
1	-2	(1, -2)
5	0	(5, 0)

$$(L_2): 2x + y = 0$$

X	Y	X, Y
0	0	(0, 0)
1	-2	(1, -2)
-1	2	(-1, 2)

Example 8

Solve the following system of equations in \mathbb{R} :

$$X - Y = 1$$

$$X^2 + Y^2 = 13$$

Solution

This system can be solved by a substituent such that we find x in terms of y or the opposite then

$x = y + 1$ will be substituted in the second equation

$$(1+y)^2 + y^2 = 13 \Rightarrow 2y^2 + 2y - 12 = 0 \quad (\text{dividing by } 2)$$

$$y^2 + y - 6 = 0 \Rightarrow (y+3)(y-2) = 0$$

$$y + 3 = 0 \Rightarrow y = -3 \Rightarrow x = -2 \Rightarrow (-2, -3)$$

$$y - 2 = 0 \Rightarrow y = 2 \Rightarrow x = 3 \Rightarrow (3, 2)$$

$$\therefore S = \{(-2, -3), (3, 2)\}$$

Example 9

Solve the following system by elimination for all $x, y \in \mathbb{R}$

$$2x^2 - 3y^2 = -46, x^2 + y^2 = 17$$

Solution

Since both equations same degree it can be solved by substitution and elimination (up to student)

$$\begin{array}{rcl} x^2 + y^2 & = & 17 \\ 2x^2 - 3y^2 & = & -46 \end{array} \quad \begin{array}{l} \text{We multiply the first equation by 3} \\ \hline \end{array}$$

$$\begin{array}{rcl} 3x^2 + 3y^2 & = & 51 \\ 2x^2 - 3y^2 & = & -46 \end{array} \quad \begin{array}{l} \text{by adding} \\ \hline \end{array}$$

$$5x^2 = 5 \Rightarrow x^2 = 1 \Rightarrow x = \mp 1$$

$$x=1 \Rightarrow (1)^2 + y^2 = 17 \Rightarrow y^2 = 16 \Rightarrow y = \mp 4 \Rightarrow (1,4), (1,-4)$$

$$x=-1 \Rightarrow (-1)^2 + y^2 = 17 \Rightarrow y^2 = 16 \Rightarrow y = \mp 4 \Rightarrow (-1,4), (-1,-4)$$

$$S = \{(1,4), (1,-4), (-1,4), (-1,-4)\}$$

Summary

- 1) if two equations are the same degree (first or second degree) the system can be solved by
*elimination *substitution
- 2) if one of the equation is first degree and the other second degree the system can be solved by substitution

[2-4] Intervals

Let $a, b \in \mathbb{R}$, $a < b$

1) The real Numbers Set is the set of to be :

$$\{X: X \in \mathbb{R}, a \leq X \leq b\}$$

The closed interval from a to b and denoted by $[a,b]$ and represented on number line as the figure (2-1), we denoted the start point of the line segment by (a) and the end point by (b) notice that endpoints of the interval $[a,b]$ are finite



2) The set $(a,b) = \{X: X \in \mathbb{R}, a < X < b\}$ is said to be the open interval from (a) to (b) and represented on the number line as in the figure (2-2)

Notice that $b \notin (a, b)$, $a \notin (a, b)$ in this case and shown by empty circles



3) And both of the sets


$$(a, b] = \{X : X \in \mathbb{R}, a < X \leq b\}$$

$$[a, b) = \{X : X \in \mathbb{R}, a \leq X < b\}$$

Said to be half-open intervals, such that $a < b$ and the first set is represented on the number line as in the figure (2-3)



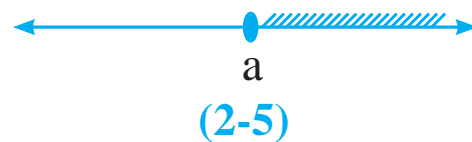
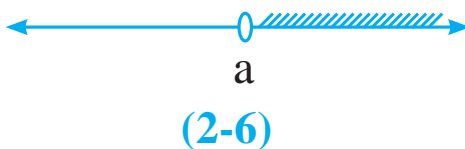
And the second set represented on the number line as in the figure (2,4)



4) The set of real numbers greater than or equal to (a) is;

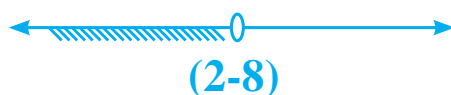
$$\{X : X \in \mathbb{R}, X \geq a\}$$

is represented on the figure (2-5) and the set $\{X : X \in \mathbb{R}, X > a\}$ represented on the figure (2-6)



5) The set of real numbers less than or equal to (a) is, $\{X : X \in \mathbb{R}, X \leq a\}$

Represented on the figure (2-7) and the set $\{X : X \in \mathbb{R}, X < a\}$ represented on the figure (2-8)



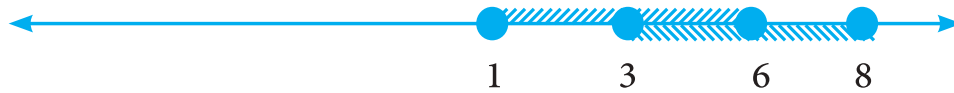
Note: The sets (4) and (5) are infinite numerical sets called (Rays)

Example 1

Let $x=[1,6]$, $y=[3,8]$ represent the following on the number line

- 1) $x \cap y$
- 2) $x \cup y$
- 3) $x - y$
- 4) $y - x$

Solution



- 1) $x \cap y = [3, 6]$
- 2) $x \cup y = [1, 8]$
- 3) $x - y = [1, 3)$
- 4) $y - x = (6, 8]$

Example 2

Represent the following on the number line

- 1) $\{x : x \geq -3\} \cup (-5, 2]$
- 2) $\{x : x \geq -3\} \cap (-5, 2]$

Solution



- \therefore 1) $\{x : x \geq -3\} \cup (-5, 2] = \{x : x > -5\}$
- 2) $\{x : x \geq -3\} \cap (-5, 2] = [-3, 2]$

[2-5] Solving first degree inequalities in one variable

The inequality contains x as a variable denoted as $f(x) < g(x)$ such that $f(x)$, $g(x)$ are two open sentences is said to be Inequality in One Variable.

As you know from your previous study the solution set of the inequality is the set of values you substitute instead of x which makes the statement true equivalent inequalities defined similarly to equivalent equations.

Definiton (2-16)

The inequality $f(x) < g(x)$ is equivalent to the inequality $h(x) < I(x)$ if both of them have the same solution set

We will consider inequalities $f(x)$, $g(x)$ which have more than one term

Example 1

Solve the inequality $3x+1 < x+5$ on R and represent on a number line

Solution

$$3X + 1 < X + 5$$

$$3X + 1 + (-X) < X + 5 + (-X)$$

$$\Rightarrow 2X + 1 < 5 \quad \text{Inequality properties}$$

$$\Rightarrow 2X + 1 + (-1) < 5 + (-1)$$

$$\Rightarrow 2X < 4 \quad \text{Inequality properties}$$

$$\Rightarrow (2X)\left(\frac{1}{2}\right) < 4\left(\frac{1}{2}\right)$$

$$\Rightarrow X < 2$$

The solution set = $\{X : X \in \mathbb{R}, X < 2\}$



If we connect two inequalities by the connective “and” then the value of “x” which satisfies this system must belong to the solution set of first inequality S_1 and the solution set of second The Inequality S_2 which is $S = S_1 \cap S_2$.

This means the solution set of the system is of inequality related by connective (and) $S = S_1 \cap S_2$, we conclude from this the solution set of the system of inequalities related by connective “or” is $S = S_1 \cup S_2$.

Example 2

Solve the inequality $5x + 11 < 1$ and $2x + 3 < 6$ in \mathbb{R} , and represent the solution on a number line.

Solution

The solution set of the first inequality is $S_1 = \{X : X \in \mathbb{R}, X < -2\}$

The solution set of the second inequality $S_2 = \{X : X \in \mathbb{R}, X < \frac{3}{2}\}$

The solution set of the system is: S

$$S = S_1 \cap S_2 = \{x : x < -2\} \cap \{x : x < \frac{3}{2}\}$$

$$S = \{x : x < -2 \text{ and } \frac{3}{2} > x\}$$



The common elements between S_1 , S_2 are the same S_1

$$S_1 \cap S_2 = S_1 = \{x : x < -2, x \in \mathbb{R}\}$$

Example 3

Solve the previous example using the connective “or” instead of “and” find the solution set and represent on the number line

Solution

The solution set of the system $5x + 11 < 1$ or $2x + 3 < 6$ is

$$S_2 \cup S_1 = \{x : x < \frac{3}{2} \text{ or } x < -2\}$$

$$S = \{x : x \in \mathbb{R}, x < \frac{3}{2}\}$$



Note that the common elements of S_1 or S_2 is the element of S_2

Example 4

Find the solution set of the inequality $|x-2| > 5$ in \mathbb{R}

Solution

$$|x-2| = \begin{cases} x-2, & \forall x \geq 2 \\ \text{or} \\ 2-x, & \forall x < 2 \end{cases}$$

$$2-x > 5 \quad \text{or} \quad x-2 > 5 \Leftrightarrow |x-2| > 5$$

Then we find the solution set is

$$S_1 \cup S_2 = \{x : x \in \mathbb{R}, x > 7\} \cup \{x : x \in \mathbb{R}, x < -3\}$$



Example 5

Solve the inequality $|x+1| \leq 2$ such that $x \in \mathbb{R}$

Solution

Note that this inequality can be solved according to property 7 from page 52

$$\text{Then } |x+1| \leq 2 \Rightarrow -2 \leq x+1 \leq 2$$

Adding (-1) to the inequality

$$-2+(-1) \leq x+1+(-1) \leq 2+(-1)$$

$$-3 \leq x \leq 1$$

$$\therefore S = [-3, 1]$$

Theorem

Let (a) be a positive real number then

- 1) The solution set of the inequality $x^2 \leq a^2$ is the interval $[-a, a]$
- 2) The solution set of the inequality $x^2 < a^2$ is the interval $(-a, a)$

Proof 2:

$$x^2 < a^2 \Rightarrow x^2 - a^2 < 0 \Rightarrow (x - a)(x + a) < 0$$

If we have $a.b < 0$ then $\begin{cases} \text{either } a > 0 \text{ and } b < 0 \\ \text{or } a < 0 \text{ and } b > 0 \end{cases}$

Similarly

$$[(x - a) < 0 \text{ and } (x + a) > 0] \text{ or } [(x - a) > 0 \text{ and } (x + a) < 0]$$

$$\Rightarrow [x < a \text{ and } x > -a] \text{ or } [x > a \text{ and } x < -a]$$

$$\Rightarrow (-a, a) \cup \emptyset = (-a, a)$$

We can prove part 1 in the theorem similarly (left to student)

Example 6

If $x^2 < 9$ then the solution set of the inequality is $(-3, 3)$ and

If $x^2 \leq 9$ then the solution set of the inequality is $[-3, 3]$

But if we have $x^2 > 9$ then the solution set of the inequality is $\mathbb{R} / x^2 \leq 9$ which means $S = \mathbb{R} / (-3, 3)$

And the solution set of the inequality $x^2 \geq 9$ is $\mathbb{R} / x^2 < 9$ which means $S = \mathbb{R} / (-3, 3)$

Example 7

Find the solutions set of the inequality $5 \leq |2X+5| < 7$

Solution

$$|2X+5| = \begin{cases} 2X+5, & \forall X \geq -\frac{5}{2} \\ -(2X+5), & \forall X < -\frac{5}{2} \end{cases}$$

The inequality $7 > |2X+5| \geq 5$ is equivalent to the system

$$|7 > -(2X+5) \geq 5| \text{ or } |7 > 2X+5 \geq 5|$$

$$\Rightarrow [12 > -2X \geq 10] \text{ or } [2 > 2X \geq 0]$$

$$\Rightarrow [-6 < X \leq -5] \text{ or } [1 > X \geq 0]$$

The solution set is $(-6, -5] \cup [0, 1)$

Summary

In order to solve first degree inequality in one variable :

Define the absolute value if exist

Use the properties of real numbers such as:

additive inverse \rightarrow *adding* \rightarrow *additive identity* (0) \rightarrow

multiplicative inverse \rightarrow *adding* \rightarrow *identity element of multiplication* (1)

After these steps we find the solution set of the inequality in \mathbb{R}



Exercises (2-4)

Q1) If $A = [-2, 5)$
 $B = \{X: X \geq 1\}$

Then find $A \cup B$, $A \cap B$, $A - B$, $B - A$

Q2)

A) Graph the function $Y = |X + 2| - 5$

B) $y = 3 - |x + 1|$

Q3) Find the solution set of each of the following equations and check your answer

A) $|4X + 3| = 1$

D) $|X^2 + 4| = 29$

B) $X |X| + 4 = 0$

E) $X |X + 2| = 3$

C) $X^2 - 2 |X| - 15 = 0$

F) $|2X + 1| = X$

Q4) Find the solution set of the following systems of equations

A) $2X + Y = 4$, $X - Y = -1$ *graphically*

B) $4X + 3Y = 17$, $2X + 3Y = 13$ *elimination*

C) $X - Y = 1$, $5X^2 + 2Y^2 = 53$

D) $2X^2 - Y^2 = 34$, $3X^2 + 2Y^2 = 107$

Q5) Find the solution set of the following inequalities

A) $|X - 6| \leq 1$

B) $2 \leq |X + 1| \leq 4$

C) $-9 < |2X - 3| - 12 \leq -3$

D) $2X^2 \leq 8$

E) $3X^2 - 27 > 0$

3

Chapter 3: Roots and Exponent

[3-1] Integer Exponent

[3-2] Solving Basic Exponent Equations

[3-3] Roots and its Operations

[3-4] Conjugate Numbers

[3-5] Real Functions

Aims and skills

At the end of this chapter the student will acknowledge:

- The rules of exponent in integers
- How to solve exercises including exponents
- How to solve basic exponent equations
- The Roots
- How to solve exercises including roots
- The conjugate numbers
- The real function and how to find the domain
- The properties of the exponential function
- Representing some real functions

Term	Mathematical Symbol
Exponent	a^x
Root	$\sqrt[n]{}$
Exponential Function	$f_a(x) = a^x$
Conjugate Numbers	$\sqrt{a} \pm \sqrt{b}$

Exponents and Roots

Mathematics was known in three sections

- 1) Accounting
- 2) Completing and balancing
- 3) Geometry

It becomes in this perfect and complete form at the end of the eighteenth and the beginning of the nineteenth century. Arab and Muslim Mathematicians discovered a lot of relations between the three sections some of these examples are:

Omar Ibn Ibrahim Al Khayyam (1044-1122) born and died Nishapur in Persia, he is most notable for this work on geometry “A commentary on the difficulties concerning the postulates of Euclid’s element’ and << al jabr wal muqabalah>>.

Muhammad ibn Musa al Khawarizmi (781-850) born in Khwarezm the moved the Baghdad his most important work was “ The Compendious book and calculating by Completion and Balancing “ and he discovered Algebraic methods to solve first and second-degree equations in one or two variables.

You have studied the exponents and roots in secondary classes and you learned the power of a number if the exponent is a natural number also you have learned the square roots for a positive number and the properties of it.

[3-1] Exponent of Integers

Exponents:-

Definition (3-1)

If $a \in \mathbb{R}, n \in \mathbb{Z}$.

- 1) $a^n = a \times a \times \dots \times a$ (multiplied by itself n-times)
- 2) Special case $a^0 = 1$
- 3) $a^{-n} = (a^{-1})^n, a^{-1} = \frac{1}{a}, a \neq 0$

The properties of exponents:

$\forall a, b \in \mathbb{R}, \forall n, m \in \mathbb{Z}$ (\mathbb{Z} is the set of integers), $a \neq 0, b \neq 0$ then:

- 1) $a^n \times a^m = a^{m+n}$ (if bases are same powers will be added)
- 2) $a^{-n} = \frac{1}{a^n}$
- 3) $\frac{a^m}{a^n} = a^{m-n}$ (in a division, if bases are same, powers will be subtracted)
- 4) $(a^m)^n = a^{m \cdot n}$ (power rule)
- 5) $(a \cdot b)^n = a^n \cdot b^n$
- 6) $\left(\frac{a}{b}\right)^n = \frac{a^n}{b^n}$

Note a^n is said to be the n-th power of a, a is called the base and n is called power and we say a is raised to the power of n.

Definition (3-2)

If $a \in \mathbb{R}$, $n \in \mathbb{N}$, $n > 1$ then every real number x satisfies the equation $x^n = a$ is said to be the n th root of the number a and its denoted by $\sqrt[n]{a}$ or $a^{\frac{1}{n}}$

From the definition, we conclude the following:

- 1) $\forall n \in \mathbb{N}, n > 1, \sqrt[n]{0} = 0$
- 2) If (n) is an even natural number and (a) is a positive real number then the both of $X = -\sqrt[n]{a}$, $X = \sqrt[n]{a}$ provided the equation $X^n = a$
- 3) If (n) is even a natural number and (a) is a negative real number then there is no real number provided the equation $X^n = a$ (X^n even $\forall X \in \mathbb{R}$)
- 4) If (n) is an odd natural number and (a) is a real number then there is only one real number satisfy the equation $X^n = a$

Theorem (3-1)

If $a, b \in \mathbb{R}$, $n \in \mathbb{N}$, $n > 1$ then

- 1) $\sqrt[n]{a \cdot b} = \sqrt[n]{a} \cdot \sqrt[n]{b}$ (such that $b \geq 0, a \geq 0$ if (n) is even number)

$$2) \frac{\sqrt[n]{a}}{\sqrt[n]{b}} = \sqrt[n]{\frac{a}{b}} \begin{cases} 0 < b, 0 \leq a & \text{if } "n" \text{ is even number} \\ b \in \mathbb{R} \setminus \{0\}, a \in \mathbb{R} & \text{if } "n" \text{ is odd number} \end{cases}$$

Example 1

Find the value of $\frac{8^{-3} \times 18^{-2}}{81 \times 16^{-2}}$

Solution

$$(-a)^m = a^m \text{ if } m \text{ is even.}$$

$$-a^m \text{ if } m \text{ is odd}$$

example:

$$(-1)^2 = 1$$

$$(-1)^3 = -1$$

$$\frac{8^{-3} \times 18^{-2}}{81 \times 16^{-2}} = \frac{(2^3)^{-3} \times (3^2 \times 2)^{-2}}{3^4 \times (2^4)^{-2}} = \frac{2^{-9} \times 2^{-2} \times 3^{-4}}{3^{-4} \times 2^{-8}}$$

$$3^{-4-4} \times 2^{-9+2+8} = 3^{-8} \times 2^1 = 1 \times 2 = 2$$

Example 2

If $m, n \in \mathbb{Z}$ then proof

$$\frac{125 \times 15^{m-2} \times 25^{m+n}}{75^m \times 5^{2n+m}} = \frac{5}{9}$$

Solution

$$\begin{aligned}
 \text{left side} &= \frac{125 \times 15^{m-2} \times 25^{m+n}}{75^m \times 5^{2n+m}} = \frac{5^3 \times (5 \times 3)^{m-2} \times (5^2)^{m+n}}{(3 \times 5^2)^m \times 5^{2n+m}} \\
 &= \frac{5^3 \times 5^{m-2} \times 3^{m-2} \times 5^{2m+2n}}{3^m \times 5^{2m} \times 5^{2n+m}} \\
 &= 5^{3+m-2+2m+2n-2m-2n-m} \times 3^{m-2-m}
 \end{aligned}$$

$$\text{right side} = 5 \times 3^{-2} = 5 \times \frac{1}{3^2} = \frac{5}{9}$$

Exercise 3-1

Q1) Find the result of the following:

- A)** $\sqrt{\sqrt[3]{64}}$ **B)** $16 + (16)^{-1}$ **C)** $(3)^1 + (2)^{-1}$ **D)** $(9)^0 + (8)^0$
E) $(a \neq 0), 3a^0$ **F)** $(\sqrt{27})^{\frac{5}{3}}$ **G)** $\frac{10^{-3} \times 4^{-7}}{10^{-5} \times 2^{-5}}$ **H)** $\frac{2^{-3} \times 4^{-5}}{6^{-1} \times 3^{-3}}$
I) $(\sqrt[5]{-32})^{-3}$ **J)** $(a+b \neq 0), (a+b)^0$ **K)** $(3a)^0$

Q2) Write the following in the simplest form:

- A)** $\sqrt{\left(\frac{3}{4}\right)^2 \frac{20a^3}{45a}}$ **B)** $(-a)^4 \left[\frac{(-a)^3 \sqrt[6]{729}}{3a} \right]^2$
C) $\frac{3x^{-5} \cdot y^2}{2^{-1} y^{-2}}, x \neq 0$ **D)** $c \neq 0, \sqrt{25b^2 c^{-8}}$

Q3) Write the followings such that the denominator becomes 1 without using roots use exponents:

- A)** $\sqrt[5]{x}$ **B)** $\frac{1}{b^5}, b \neq 0$ **C)** $\frac{bc}{d}, d \neq 0$
D) $\sqrt[3]{x} \times \sqrt[4]{x}, x \geq 0$ **E)** $\frac{1}{b^2 + c^2}$ **F)** $\frac{4b^2}{b^2 c^{-3}}, b \neq 0$

Q4) If $a \in \mathbb{R}$ and m is an even integer, which one of the following is correct?

A) $a^m > 0$

B) $a^m < 0$

C) $a^m \geq 0$

D) $a^m \leq 0$

Q5) If $a \in \mathbb{R}$ and a is negative number, and m is an odd integer. Which of the followings is correct?

A) $a^m > 0$

B) $a^m < 0$

C) $a^m \geq 0$

D) $a^m \leq 0$

Q6) Prove that:

A) $a^{(x-y)z} \cdot a^{(z-x)y} \cdot a^{(y-z)x} = 1$ **B)** $\left[x^{n^2-1} \div x^{n-1} \right]^{\frac{1}{n}} = x^{n-1}$

Q7) Prove that:

$$\frac{1}{1+a^{c-b}} + \frac{1}{1+a^{b-c}} = 1$$

Q8) Prove that:

$$\frac{5 \times 3^{2n} - 4 \times 3^{2n-1}}{2 \times 3^{2n+1} - 3^{2n}} = \frac{11}{15}$$

Q9) Simplify the following:

$$\frac{6^{4n-1} \times 27^{2n}}{2^{n+1} \times 8^{n-1} \times 9^{n+2}} \cdot \frac{3^{2+n} + 3^{n+1}}{3^n - 3^{n-1}}$$

Q10) Prove that:

$$\left[\frac{(9^{n+\frac{1}{4}}) \times \sqrt{3 \times 3^n}}{3\sqrt{3^{-n}}} \right]^n = 27$$

[3-2] Solving Basic Exponential Equations

The exponential equations contain a variable in the exponent to solve such kind of equations follow the steps

1) In any equation: ((if bases are equal then the exponents are equal too if the base $\neq 1$))

Such that: $a^x = a^y \Rightarrow x = y, a \neq 1$

2) If $x^n = y^n$ then $x = y$ n is odd

$x = \pm y$ if n is even

3) If $x^n = y^m \Rightarrow n = m = 0$

Notice that the solution of the following equations:

A)

$$(x+2)^{\frac{2}{3}} = \frac{1}{\sqrt[3]{27}} \Rightarrow (x+2)^{\frac{2}{3}} = 3^{-\frac{2}{3}}$$
$$x+2 = 3 \Rightarrow x = 1$$

$$S = \{1\}$$

B)

$$x^{\frac{2}{3}} = 3^2$$
$$x^{\frac{2}{3}} = \frac{1}{3^2}$$
$$(x^{\frac{1}{3}})^2 = \left(\frac{1}{3}\right)^2 \text{ Taking the root of both sides}$$
$$x^{\frac{1}{3}} = \pm \frac{1}{3} \text{ Cubing both sides}$$
$$(x^{\frac{1}{3}})^3 = \pm \left(\frac{1}{3}\right)^3$$
$$x = \pm \frac{1}{3^3}$$
$$x = \pm \frac{1}{27}$$
$$S = \left\{ \pm \frac{1}{27} \right\}$$

Example 3

Solve the equation $2^{x^2-2x+1} = 4^{x+3}$

Solution

we make the same bases in both sides of the equation

$$2^{x^2-2x+1} = 2^{2(x+3)}$$

$$x^2 - 2x + 1 = 2x + 6$$

$$x^2 - 4x - 5 = 0$$

$$(x-5)(x+1) = 0 \Rightarrow x = 5, x = -1$$

$$S = \{-1, 5\}$$

This equation is said to be exponential equation since the exponents are variable.

Example 4

Solve the equation $3^{2x+1} - 4 \times 3^{x+2} = -81$

Solution

$$3^{2x} \times 3 - 4 \times 3^x \times 3^2 + 81 = 0 \div 3$$

$$3^{2x} - 12 \times 3^x + 27 = 0$$

$$(3^x - 3)(3^x - 9) = 0$$

$$3^x = 9 \Rightarrow 3^x = 3^2 \Rightarrow x = 2$$

$$3^x = 3 \Rightarrow x = 1$$

Solution set = $\{1, 2\}$

Example 5

Find the value of x if:

A) $3^{x-1} = 5^{x-1}$

B) $(x+3)^5 = 4^5$

C) $(x-1)^6 = 2^6$

Solution

C) By applying the note 3

$$(x-1)^6 = 2^6 \Rightarrow x-1 = \pm 2 \Rightarrow x = 3$$

$$x = -1$$

B) By applying the note 2

$$(x+3)^5 = 4^5 \Rightarrow x+3 = 4 \Rightarrow x = 1$$

A) By applying the note 2

$$3^{x-1} = 5^{x-1} \Rightarrow x-1 = 0 \Rightarrow x = 1$$

Example 6

Solve the equation in \mathbb{R} such that

$$8^{\frac{x}{2}} + 8^{\frac{x}{2} \cdot \frac{1}{3}} + 8^{\frac{x}{2} \cdot \frac{2}{3}} = 14$$

$$8^{\frac{x}{2}} + 8^{\frac{x}{2}} \times 8^{\frac{1}{3}} + 8^{\frac{x}{2}} \times 8^{\frac{2}{3}} = 14$$

$$8^{\frac{x}{2}} \left(1 + 8^{\frac{1}{3}} + 8^{\frac{2}{3}} \right) = 14$$

$$8^{\frac{x}{2}} (1+2+4) = 14$$

$$8^{\frac{x}{2}} \times 7 = 14 \Rightarrow 8^{\frac{x}{2}} = 2 \Rightarrow (2^3)^{\frac{x}{2}} = 2 \Rightarrow 2^{\frac{3x}{2}} = 2^1 \Rightarrow \frac{3x}{2} = 1 \Rightarrow x = \frac{2}{3}$$



Exercises (3-2)

Q1) Solve each of the following equations:

A) $(x+2)^{\frac{1}{2}} = 3$	B) $(\sqrt[5]{243})^2 = (x^{-\frac{1}{2}})^2$	C) $\sqrt[5]{x^3} = \frac{1}{27}$
D) $6^{x^2-3x-2} = 36$	E) $-6 \times 5^x + 25^x + 5 = 0$	F) $10^{(x-4)(x-5)} = 100$
G) $5(5^x + 5^{-x}) = 26$	H) $2^{2x+3} - 57 = 65(2^x - 1)$	I) $3^{(x^2+5x+4)} = 27^{(-x-4)}$

Q2) Solve the equation in \mathbb{R} such that

$$3^{x+1} \times 9^x - 9^{\frac{1}{2}} \times 3^{\frac{3}{x}} = 0$$

Q3) Solve each of the following equations:

$$\frac{(243)^{x-1} \times (27)^{x-2}}{(729)^{\frac{1}{2}x}} = 81$$

Q4) Find the value of $x \in \mathbb{R}$ if:

A)

$$3^{x^2-1} + 3^{x^2} + 3^{x^2+1} = 39$$

B)

$$\frac{4^x + 4(2^x) + 3}{4^x + 2^x} = 25$$

[3-3] Roots and Operations on Roots

Some of the roots are quantities can never be calculated exactly such as: $\sqrt[3]{61}$, $\sqrt[3]{10}$, $\sqrt{2}$

This kind of square roots is called the surds square roots, we will study some properties to help us simplify them.

Properties

$$1. \sqrt[n]{x} \times \sqrt[n]{y} = \sqrt[n]{xy} \quad \text{and vice versa}$$

For example:

$$\sqrt[5]{6} \times \sqrt[5]{12} = \sqrt[5]{72}$$

$$\sqrt[4]{5} \sqrt[4]{3} \sqrt[4]{x} = \sqrt[4]{15x}$$

$$\frac{\sqrt[n]{x}}{\sqrt[n]{y}} = \sqrt[n]{\frac{x}{y}} \quad \text{and vice versa such that } y \neq 0$$

For example:

$$\frac{\sqrt{21}}{\sqrt{3}} = \sqrt{\frac{21}{3}} = \sqrt{7}$$

$$\sqrt{\frac{3x}{2y}} = \frac{\sqrt[3]{3x}}{\sqrt[3]{2y}}$$

Example 7

Order the following square root ascendingly:

$$\sqrt[6]{147}, \sqrt{5}, \sqrt[3]{12}$$

Solution

$$\sqrt[6]{144} = \sqrt[6]{12^2} = \sqrt[3]{12}$$

$$\sqrt[6]{125} = \sqrt[6]{5^3} = \sqrt{5}$$

$$\sqrt[6]{147} = \sqrt[6]{147}$$

The order is:

$$\sqrt{5} < \sqrt[3]{12} < \sqrt[6]{147}$$

[3-4] Conjugate Numbers $\sqrt{a} \mp \sqrt{b}$

The conjugate is the number multiplied by the irrational value to convert it to a rational value.

The conjugate of $2\sqrt{3}$ is $\sqrt{3}$ since $2\sqrt{3} \times \sqrt{3} = 2 \times 3 = 6$

And the conjugate of $\sqrt[3]{3}$ is $\sqrt[3]{3^2}$ such that

And conjugate of $5 - \sqrt{6}$ is $5 + \sqrt{6}$ since their product is:

$$(5 - \sqrt{6})(5 + \sqrt{6}) = 25 - 6 = 19$$

And the conjugate of $3\sqrt{2} - 2\sqrt{5}$ is $3\sqrt{2} + 2\sqrt{5}$ since

$$(3\sqrt{2} - 2\sqrt{5})(3\sqrt{2} + 2\sqrt{5}) = 9 \times 2 - 4 \times 5 = -2$$

And the conjugate of $\sqrt[3]{5} - 1$ is $\sqrt[3]{5^2} + \sqrt[3]{5} + 1$ since

$$(\sqrt[3]{5} - 1)(\sqrt[3]{25} + \sqrt[3]{5} + 1) = \sqrt[3]{125} - 1 = 5 - 1 = 4$$

(difference of two cubes)

Example 8

Simplify the denominator to become a rational quantity:

$$\frac{1}{\sqrt{2} - 1} + \frac{1}{\sqrt{3} + \sqrt{2}} + \frac{1}{2 + \sqrt{3}}$$

Solution

$$\begin{aligned} & \frac{1}{\sqrt{2} - 1} \times \frac{\sqrt{2} + 1}{\sqrt{2} + 1} + \frac{1}{\sqrt{3} + \sqrt{2}} \times \frac{\sqrt{3} - \sqrt{2}}{\sqrt{3} - \sqrt{2}} + \frac{1}{2 + \sqrt{3}} \times \frac{2 - \sqrt{3}}{2 - \sqrt{3}} \\ &= \frac{\sqrt{2} + 1}{2 - 1} + \frac{\sqrt{3} - \sqrt{2}}{3 - 2} + \frac{2 - \sqrt{3}}{4 - 3} \\ &= \sqrt{2} + 1 + \sqrt{3} - \sqrt{2} + 2 - \sqrt{3} = 3 \end{aligned}$$

[3-5] Real Functions

We studied the Mapping in the previous years and now we will explain the concept of function which is a mapping it has domain and codomain are nonempty sets belong to \mathbb{R} expressed as $\exists y \in B, \forall x \in A \quad f: A \rightarrow B$ (y is unique element), Such that $A, B \subseteq \mathbb{R}, y = f(x)$

[3-5-1] Finding the domain of Real Functions

we will study: polynomial functions, fractional functions, Root functions, exponential functions such that the domain varies from a type to other.

***The polynomial function:** is expressed as $f(x) = a_n x^n + a_{n-1} x^{n-1} + \dots + a_0$
 $a_n, a_{n-1}, \dots, a_0 \in \mathbb{R}$

It also includes the linear function such that $f(x) = 3x - 1$

square function: $g(x) = x^2 - 5x + 9$, and the cubic function:

$$h(x) = x^3 - 2x^2 + x - 1$$

The domain in these cases is \mathbb{R} .

***Fractional Function:** to find the domain of this type of functions we make the denominator equal to zero and find x the domain becomes then $\mathbb{R} \setminus \{\text{possible values of } x\}$

For example:

1) $f(x) = \frac{2x - 1}{x + 5}$ we make $x + 5 = 0 \Rightarrow x = -5$ then the domain is $\mathbb{R} \setminus \{-5\}$.

2) $g(x) = \frac{2}{x^2 - 4}$ $x^2 - 4 = 0 \Rightarrow x = \pm 2$, the domain is $\mathbb{R} \setminus \{\pm 2\}$.

***The root function:** to find the domain of this function we find the possible values of x that makes the inside of root greater or equal to "zero", for example:

1) $f(x) = \sqrt{x - 7}, x - 7 \geq 0 \Rightarrow x \geq 7 \quad \{x \in \mathbb{R}; x \geq 7\}$

2) $g(x) = \sqrt{3x + 5}, 3x \geq 0 \Rightarrow x \geq -\frac{5}{3} \quad \left\{x \in \mathbb{R}; x \geq -\frac{5}{3}\right\}$

3) $h(x) = \sqrt{1 - 2x}, 1 - 2x \geq 0 \Rightarrow -2x \geq -1 \Rightarrow \frac{1}{2} \quad \left\{x \in \mathbb{R}; x \leq \frac{1}{2}\right\}$

***The exponential function:** $f_a(x) = a^x$ such that $x \in \mathbb{R}, a \in \mathbb{R}^+ \setminus \{1\}$ such that a is the base, x is the exponent, for example:

$$f_{\frac{1}{2}}(x) = \left(\frac{1}{2}\right)^x, h_{\sqrt{5}}(x) = (\sqrt{5})^x, g_3(x) = 3^x, f_2(x) = 2^x$$

Note: $f(x) = 1^x = 1$ this is a constant function, so we rule out $a=1$ in the exponential function.

[3-5-2] Representing Real Function in the Coordinate Plane

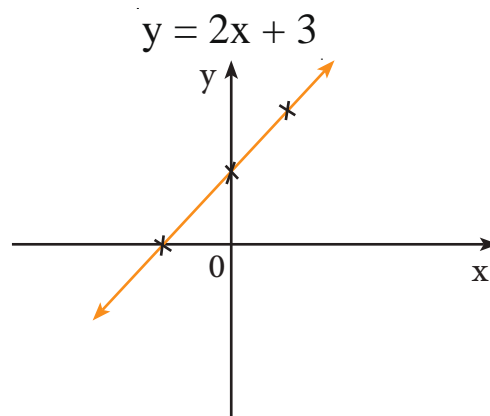
First: representing the linear function $f(x) = ax + b$ such that $a \neq 0, a, b \in \mathbb{R}$

For example:

$$f(x) = 2x + 3, \forall x \in \mathbb{R}$$

x	1	0	-1
y	5	3	1

Note that this function represents a straight line.



Second: representing the second-degree function $f(x) = ax^2 + b$ such that $a, b \in \mathbb{R}, a \neq 0$.

Example: represent the function

$$f(x) = 2x^2 + 3 \text{ when } a > 0, b \geq 0$$

x	-1	0	1
y	5	3	5

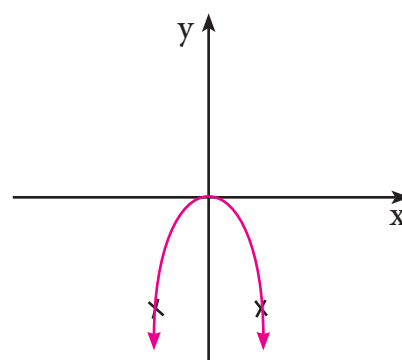
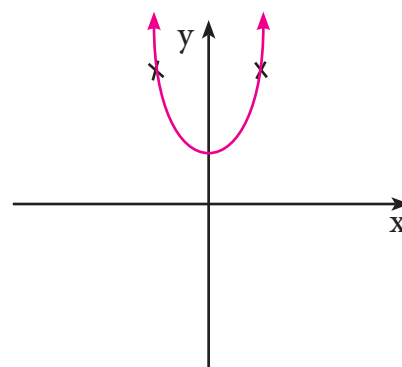
Note that the function represents \cup on the upper half of the coordinate plane.

Example: represent the function

$$f(x) = -4x^2 \text{ when } a < 0$$

x	1	0	-1
y	-4	0	-4

Note that the shape of the function is \cap on the lower half of the coordinate plane.



Third: Representing the third-degree functions

such that $f(x) = ax^3 + b, a, b \in \mathbb{R}, a \neq 0$

Example: represent the function

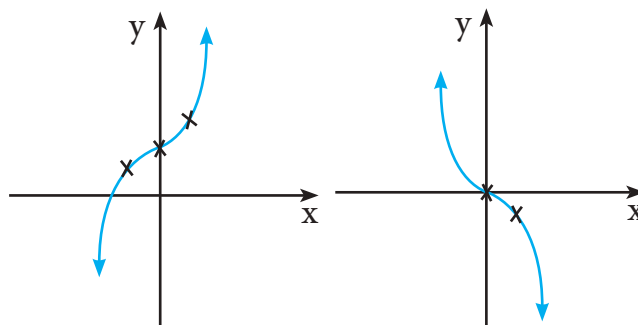
$$f(x) = x^3 + 2$$

x	1	0	-1
y	3	2	1

Example: Represent the function

$$f(x) = -x^3$$

x	1	0	-1
y	-1	0	1



$$f(x) = x^3 + 2$$

$$f(x) = -x^3$$

Fourth: representing the exponential function $f_a(x)=a^x$

Example:

A) Find the values of the function $f(x) = 2^x$ for reach $x=-3,-2,-1,0,1,2,3$ then use them to graph the same part of the function.

B) Find the method by the help of the previous function to graph some part of the function: $f_{\frac{1}{2}}(x)$ on the same figure.

Solution:

A) $f(x) = 2^x$

x	3	2	1	0	-1	-2	-3
2^x	8	4	2	1	$\frac{1}{2}$	$\frac{1}{4}$	$\frac{1}{8}$

B) $g(x) = f_{\frac{1}{2}}(x) = (\frac{1}{2})^x = (2^{-1})^x = 2^{-x} = f(-x)$

Let's assume R_y is a reflection by the y-axis

$R_y : (x, y) = (-x, y)$ then the image of $(x, 2^x) = (-x, 2^x)$ we find a curve of the function $g(x)=(\frac{1}{2})^x$ from the curve $f(x)=2^x$ by reflection by the y-axis, as shown in the figure (3-1).

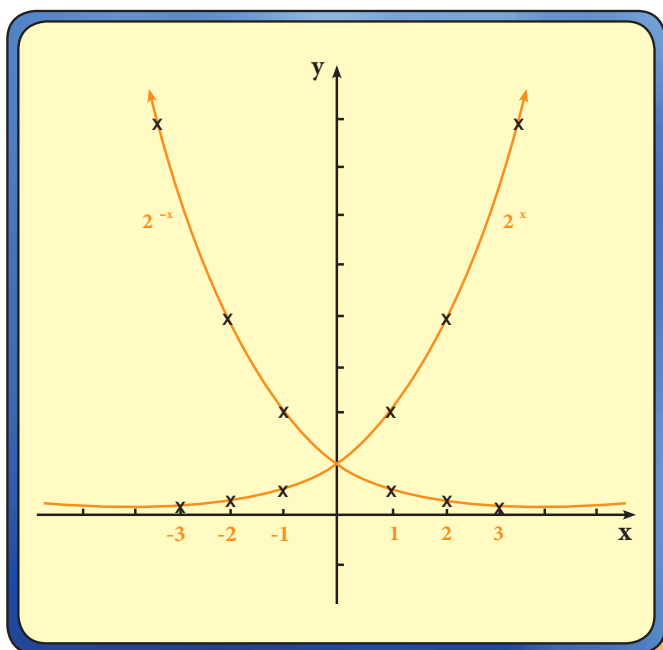


Figure (3-1)

Some properties of the exponential function $f(x) = a^x$

1. If we graph the curves of the functions $2^x, 3^x, 4^x, 5^x, \dots$

and the functions $(\frac{1}{2})^x, (\frac{1}{3})^x, (\frac{1}{4})^x, (\frac{1}{5})^x, \dots$

We will find two groups of the curves:

First: When $a > 1$ such that the value of the function a^x increases when x increases.

Second: when $1 < a < 0$ such that the value of function a^x decreases when x increase.

We represented the graph of six of these functions on the figure (3-2) (a part of each curve), in which three of them $a > 1$ and three of them $1 < a < 0$ and then chose the value of the last three a the reverse of first three, we note **all curves pass through the point (0,1)**

2. If we consider the curve of any of the exponential functions $a^x, a \neq 0$, we find its domain is \mathbb{R} .

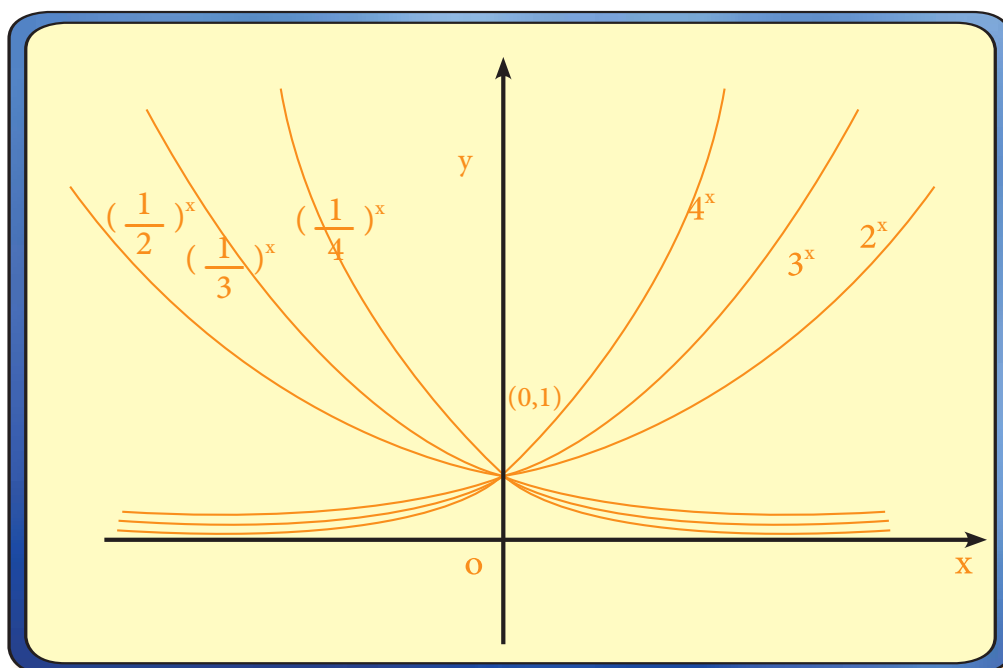


Figure (3-2)

Exercises (3-3)

Q1) A) Simplify $\frac{\sqrt{a^2 - b^2}}{a + b} \left[\frac{\sqrt{a + b}}{\sqrt{a - b}} - \frac{\sqrt{a - b}}{\sqrt{a + b}} \right]^{-1}$

B) if $y = \sqrt[3]{4} - \sqrt[3]{2} + 1$, $x = \sqrt[3]{2} + 1$ prove that $xy = 3$

Q2) Represent the functions graphically:

a) $f(x) = -4x^2 + 5$ b) $f(x) = x - 8$ c) $f(x) = 2 - x^3$

Q3) Find the domain of the function:

a) $f(x) = x^2 - 5x + 9$ b) $f(x) = \frac{x-1}{x+9}$ c) $f(x) = \sqrt{x-9}$

d) $f(x) = \sqrt{3-5x}$ e) $f(x) = \frac{1}{x^2 - 9}$

Q4) Find the value of the following such that the denominator becomes a rational quantity:

A) $\frac{3}{a-b} \cdot \sqrt{\frac{2x}{a-b}} \div \sqrt{\frac{18x^3}{(a-b)^5}}$ Ans: $\frac{a-b}{x}$

B) $\frac{\sqrt{\frac{3}{2}} - \sqrt{\frac{8}{27}}}{\sqrt{2}(\sqrt{3} + \frac{1}{\sqrt{3}})}$ Ans: $\frac{5}{24}$ C) $\sqrt{\frac{\sqrt{5}+1}{\sqrt{5}-1}} - \sqrt{\frac{\sqrt{5}-1}{\sqrt{5}+1}}$ Ans: 1

5) Prove that:

A) $\frac{-15}{x-6+\sqrt{x}} + \frac{3}{\sqrt{x}-2} - \frac{3}{\sqrt{x}+3} = 0$

B) Find x in the form of $a + \sqrt{3}b$ If $x + \sqrt{3}x = 8$

6) Graph a part of the curve for the function $y = \left(\frac{1}{5}\right)^x$

- [4-1] Directed angle in standard position
- [4-2] The degree measure and the radian measure of angles
- [4-3] The relation between the radian and the degree measure
- [4-4] Trigonometric ratios for acute angles and some basic relations
- [4-5] Trigonometric ratios for special angles
- [4-6] Unit circle and trigonometric point
- [4-7] Circular applications
- [4-8] Using the calculator to find the values of circular applications
- [4-9] Solution of Right Angled Triangle

Aims and Skills

- Learning the Absolute value
- Solving Absolute value equation
- Solving System of equations
- Solving first-degree inequality with one variables
- Solving Second-degree Inequalities with one variable

<i>Terms</i>	<i>Symbol or Mathematical relations</i>
Directed angle	$(\overrightarrow{BA}, \overrightarrow{BC})$
The degree measure and the radian measure	D°, Q
Sine x	$\sin x$
Cosine x	$\cos x$
Tangent x	$\tan x$
Triangle point	$(\cos x, \sin x)$

Fourth chapter : Trigonometry

Introduction: The Muslims have a big role in collecting what was spread of the trigonometry from the greek books. The Babylonians, the Egyptians, the Indians, the Chinese and the Greeks had clear signs in this area of study. And from the Muslim scientists that contributed in this area:

AL- Beronni (362-440 h)=(973-1048): he is Abo AL-rayhan mohammed bin ahmed Alfalaki. he is an arab with persian origins, he was born in Kath Bokharizm and died in Ghazna in Afghanistan and has a theory to find the earth's perimeter in his book "Al- Istirlab" and it is called AL-Beronni's formula and states that $V = \frac{b \cos x}{a - \cos x}$ where r:is half of the earth's diameter, a:the height of the tallest mountain, b:the observed height, x:the angle of the slope of the horizon.

AL-Bozjani: :(328-388 h) = (940-988) he is Mohammed bin Mohammed Yahya bin Ismael bin Al-Abbas abo AL-Wafaa, born in the city of Bozjan and in 959 he mmoved to Baghdad. he is thw first to put the triangular ratio and use it to slove mathemaical equations and he made the following formulas:

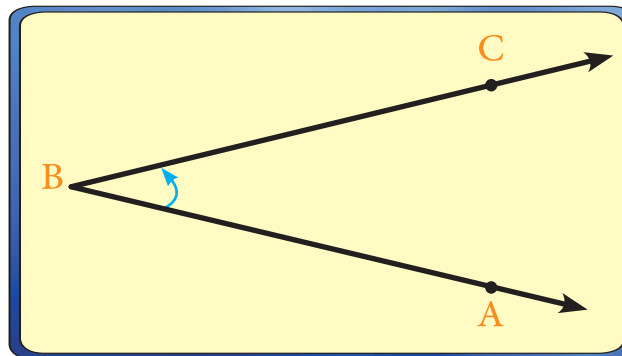
$$\begin{aligned}\sin x &= 2\sin \frac{x}{2} \cos \frac{x}{2} , 2\sin^2 \frac{x}{2} = 1 - \cos x \\ \sin(x+y) &= \sqrt{\sin^2 x - \sin^2 y} \sin y + \sqrt{\sin^2 y - \sin^2 x} \sin x \\ \tan x &= \frac{\sin x}{\cos x} , \cot x = \frac{\cos x}{\sin x} \\ \sec x &= \sqrt{1 + \tan^2 x} , \csc x = \sqrt{1 + \cot^2 x}\end{aligned}$$

*Al-Kashi (899 h) = (1492): He is Ghayath AL-deen Jamsheed bin Masood bin Mahmood bin Al-Kashi. he was born in the city of Kashan in Iran and he died in Samarkand, he is considered as an excellent mathematician as the pi (π) was found by him in his book (Al-resala Al mohita) where he gave 15 decimals for 2π , $2\pi = 6.2831857179586$ And one of his books is called (Miftah Al-Hesab) that contains: Calculus, Trigonometry, Areas etc... And the field of Trigonometry has developed in the 17th century by the scottish scintist JOhn Nappier(1550-1617) and the field of trigonometry has many uses in area, geography, physics and navi- gation. In this chapterwe are going to study the basics of trigonometry.

[4-1] Directed angle in standard position

Definition (4 - 1)

Directed Angle : If the two rays \overrightarrow{BA} , \overrightarrow{BC} have a common initial point that is B then the ordered pair $(\overrightarrow{BA}, \overrightarrow{BC})$ is called the directed angle that; its initial side is \overrightarrow{BA} and its terminal side is \overrightarrow{BC} and its head is the point B and is written as $(\overrightarrow{BA}, \overrightarrow{BC})$ or $\angle ABC$.



Definition (4 - 2)

Directed angle in standard position : In a coordinate plane, if we have a directed angle that's head is on the origin point and its initial side is on the positive side of the X axis, it is called a directed angle in a standard position as in figure 4-1.

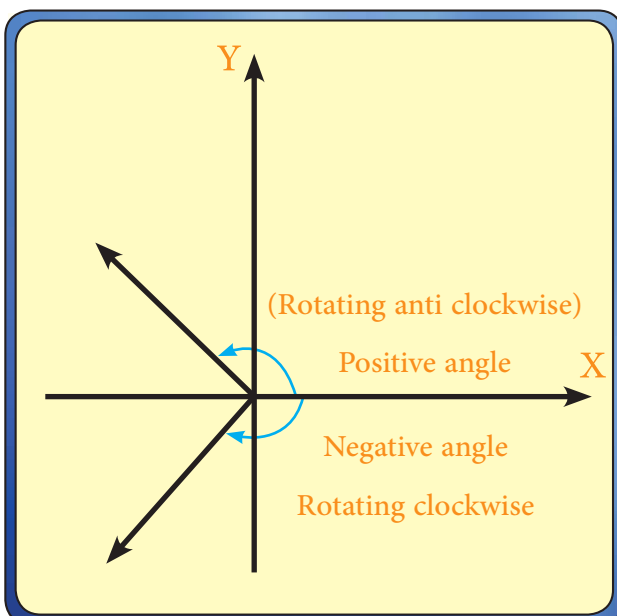


Figure (4 - 2)

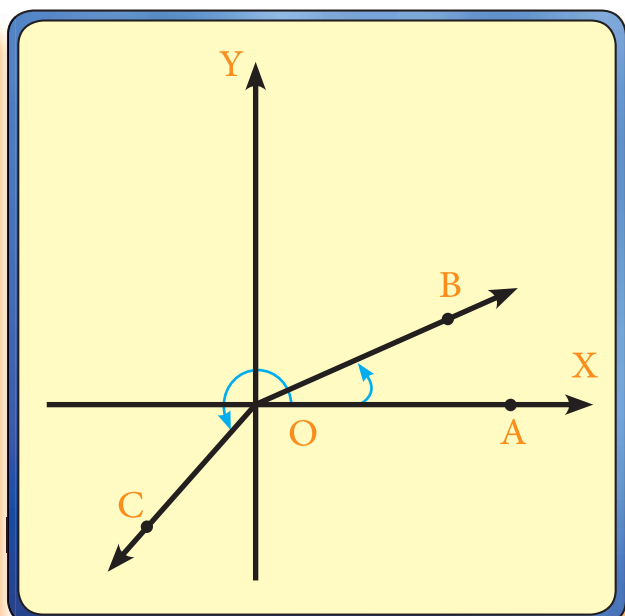


Figure (4 - 1)

[4 - 2] The degree measure and the radian measure of angles

Degree Measure: We learned from our previous studies that if we made the circles as 360 equal parts we will have 360 equal arcs and each arc is opposing a central angle in that circle and the measure of that angle is called the degree measure and is denoted by 1° .

$1^\circ = 60 \text{ minutes} = 60'$, $1' = 60 \text{ seconds} = 360''$

Radian Measure: There is another system for measuring the angle and it is called the radian measure of angles.

Definition (4 - 3)

The unit of measuring the angles by radian measure is the angle that is half diameter and it's the measure of the angles that's vertex is on the circle's center and is opposed by an arc that's length is equal to radius of the circle.

In figure(4-3) if we assumed that the length of the arc opposing to the central angle AOB is equal to L the unit of the length of half the diameter $= r$ units and if $L=r$, $m\angle AOB = 1$ the angle of the radius.

and if $L= 2r$ as in figure (4-4) then

$m\angle AOB$ by radian measure $= 2$ of half diameter angle

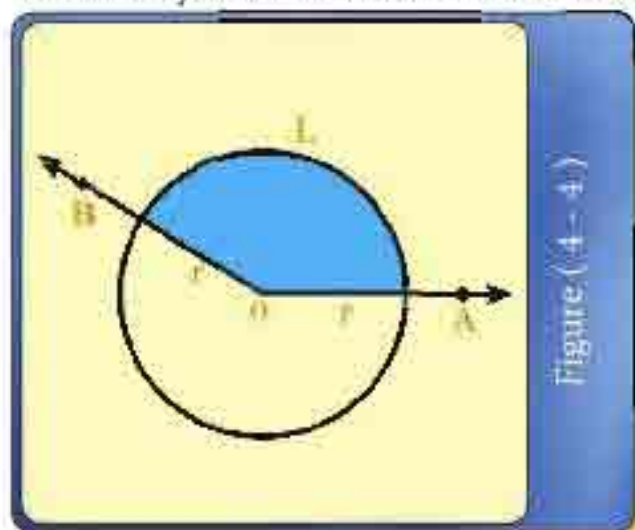


Figure (4-4)

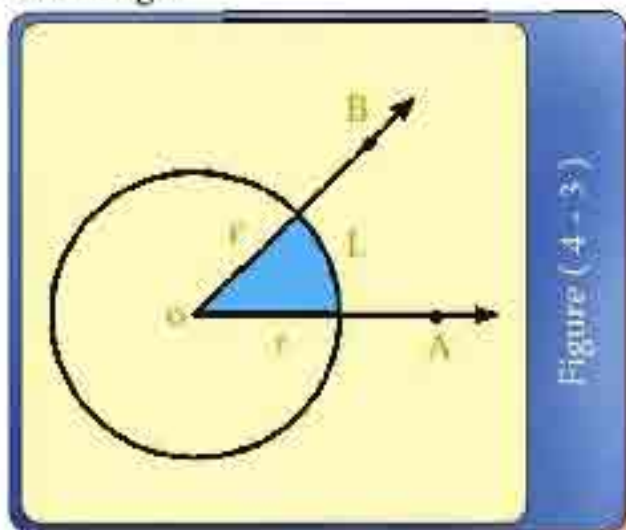


Figure (4-3)

And from definition(4-3) we can know that the length of the arc of the circle that's radius is r : $L = |Q| \cdot r$, $|Q|$ is the measure of the central angle opposite to that arc measured by radian.

$$|Q| = \frac{\text{Length of the arc}}{\text{radius}} = \frac{L}{r}$$

[4-3] The relation between the radian and the degree measure

We have previously learned that the circumference of the circle = $2\pi r$

$$|Q| = \frac{L}{r} = \frac{2\pi r}{r} = 2\pi$$

2π the angle of the radius = 360

π angle of the radius = 180

$$\frac{180^\circ}{\pi} = \text{radian angle } 1 \quad \Leftarrow$$

$$\text{radian angle } \frac{\pi}{180} = 1^\circ \quad \Leftarrow$$

In general : A) If the measure of a directed angle = Q radian angle

$$\text{Then } Q \text{ is a radian angle} = \frac{D^\circ \times \pi}{180^\circ}$$

B) If the measure of a directed angle = D°

$$\text{Then } D^\circ = \left(Q \times \frac{180^\circ}{\pi} \right) \text{ radian angle :}$$

We conclude : $\frac{Q}{D^\circ} = \frac{\pi}{180^\circ}$

We use this relation to convert from the radian measure to the degree measure and vice versa.

Example 1

If $\angle AOB$ is in standard position and opposite to an arc that's length is 10 cm in a circle that has a radius of 12cm

A) Find $m\angle AOB$ by radians measure where :

$$0 \leq m\angle AOB \leq 2\pi \text{ note that the center of the circle is the origin point.}$$

B) Find by radians $m\angle AOB$ where:

$$-2\pi < m\angle AOB \leq 0$$

Solution :

$$L = 10 \text{ cm} \quad r = 12 \text{ cm}$$

$$A) \therefore \text{ Radian angle } |Q| = \frac{L}{r} = \frac{10}{12} = \frac{5}{6} = 0.833$$

B) In this case the measure of the angle will be negative:

$$|Q| = \frac{L}{r} = \frac{10}{12} = \frac{5}{6} = 0.833$$

$$\therefore Q = -0.833 \text{ Radians because the angle is negative.}$$

Example 2

If $\angle AOB$ was in it's standard position and it's measure was $\frac{3\pi}{4}$ what's it's measure in degrees?

Solution

$$\frac{Q}{D^\circ} = \frac{\pi}{180^\circ}$$

$$\frac{\frac{3\pi}{4}}{D^\circ} = \frac{\pi}{180^\circ} \Rightarrow D^\circ = 180^\circ \times \frac{3}{4} = 135^\circ$$

Example 3

Convert : A) $^{\circ}45$ to radians

B) 2.6π to de.....

Solution :

$$\text{A) } \because \frac{Q}{D^{\circ}} = \frac{\pi}{180^{\circ}} \Rightarrow \frac{\pi}{180^{\circ}} = \frac{Q}{45} \Rightarrow Q = \frac{\pi}{4} \text{ Radians}$$

$$\text{B) } \frac{Q}{D^{\circ}} = \frac{\pi}{180^{\circ}} \Rightarrow \frac{2.6\pi}{D^{\circ}} = 2.6 \times 180^{\circ} = 468^{\circ} = D^{\circ}$$

Example 4

If the measure of a central angle is 60° what is the length of the arc that it opposite to, knowing that the length of the radius is 9 cm.

Solution :

$$\because \frac{Q}{D^{\circ}} = \frac{\pi}{180^{\circ}} \Rightarrow \frac{Q}{60^{\circ}} = \frac{\pi}{180^{\circ}} \Rightarrow Q = \pi \frac{1}{3} \text{ Radians}$$

$$\because |Q| = \frac{L}{r}$$

$$\frac{\pi}{3} = \frac{L}{9} \Rightarrow L = 3\pi = 3 \times 3.142 \\ = 9.426 \text{ cm}$$

Example 5

The length of the arc of a central angle is $21\frac{1}{4}$ cm and the length of its radius is 20 cm, what is the degree measure of that central angle?

Solution :

$$|Q| = \frac{L}{r} \Rightarrow |Q| = \frac{21\frac{1}{4}}{20} = \frac{17}{16} \text{ Radians}$$

$$\frac{Q}{D^\circ} = \frac{\pi}{180^\circ} \Rightarrow \frac{\frac{17}{16}}{D^\circ} = \frac{\pi}{180^\circ}$$

$$D^\circ = \frac{17}{16} \times 180 \times \frac{7}{22} = 60.85^\circ$$

Example 6

In a right angle triangle, the difference between its two acute angles is 0.44 radians, what is the measure of each angle in degrees?

Solution :

$$\therefore \frac{\pi}{180^\circ} = \frac{Q}{D^\circ} \Rightarrow \frac{\pi}{180^\circ} = \frac{0.44}{D^\circ}$$

$$\therefore D^\circ = \frac{0.44 \times 180}{\pi} = \frac{0.44 \times 180}{3.14} = 25.2^\circ$$

We assume that the degree measures of the two acute angles are A, B

$$A + B = 90^\circ \dots\dots 1$$

$$A - B = 25.2^\circ \dots\dots 2$$

$$\text{ADD THEM} \quad \underline{\hspace{1.5cm}} \quad 2A = 115.2$$

$$\therefore A = 57.6^\circ$$


$$B = 32.4^\circ$$

Conclusion

The relation between the degree and the radian measures is : $\frac{Q}{D^\circ} = \frac{\pi}{180^\circ}$

The relation between the central angle Q and the

length of the arc L and the radius of their circle r is: $|Q| = \frac{L}{r}$



Excercise (4 - 1)

Q1 /

Convert each of the following degrees to radians:

$300^\circ, 120^\circ, 30^\circ$

Q2 /

Convert each of the following radians to degrees:

$$\frac{1}{3}, \frac{5\pi}{6}, \frac{3\pi}{5}$$

Q3 /

The measure of a central angle in a circle is $\frac{5}{6}$ radians opposite to an arc that's length is 25cm find the radius of the circle.

Ans/ 30cm

Q4 /

What is the length of the arc that opposite to the central angle that's measure is 135° in a circle that has a radius of 8cm?

Ans/ 18.857

Q5 /

The sum of two angles is $\frac{\pi}{4}$ radians and the difference between them is 9° find the measure of these two angles in degrees.

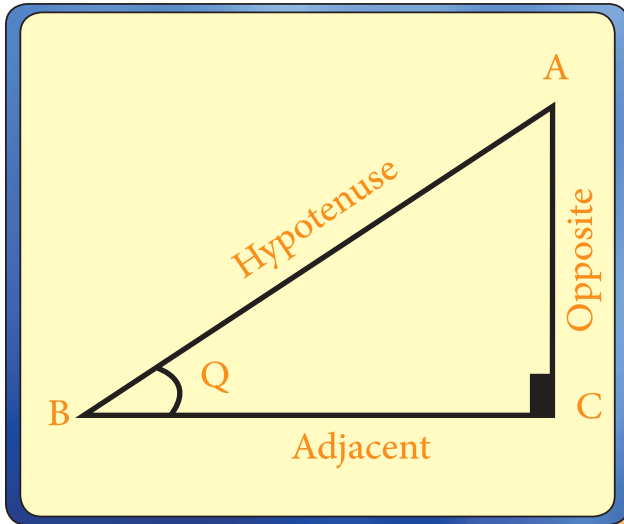
Ans/ $27^\circ, 18^\circ$

Q6 /

Draw $\angle AOB$ in its standard position if it's measure is $\frac{5\pi}{4}$ then find its measure in degrees.

[4-4] Trigonometric ratios for acute angles and some basic relations

Figure (4-5) represents a right triangle at C



Let $m \angle ACB = Q$

Figure (4 - 5)

Definition (4 - 4)

We call the number that represents the ratio as follows:

1. The ratio $\frac{AC}{AB}$ is called Sine of the acute angle (Q)

And it is written as $\sin Q = \frac{AC}{AB} = \frac{OPP.}{HYP.}$

2. The ratio $\frac{BC}{AB}$ is called the Cosine of the acute angle Q

And it is written as $\cos Q = \frac{BC}{AB} = \frac{ADJ.}{HYP.}$

3. The ratio $\frac{AC}{BC}$ is called the Tangent of the acute angle Q

And it's written as $\tan Q = \frac{AC}{BC} = \frac{OPP.}{ADJ.}$

And from Figure (4-5) we get $(AC)^2 + (BC)^2 = (AB)^2$ (Pythagorean theorem)

When we divide both sides by $(AB)^2$ we get:

$$\left(\frac{AC}{AB}\right)^2 = \left(\frac{BC}{AB}\right)^2 + \left(\frac{AB}{AB}\right)^2$$

And from definition (4-4)

$$\text{We obtain } \sin^2 Q + \cos^2 Q = 1$$

And from definition (4-4) we also get:

$$\tan Q = \frac{AC}{BC} \quad \text{and by dividing both sides by } (AB) \text{ we get:}$$

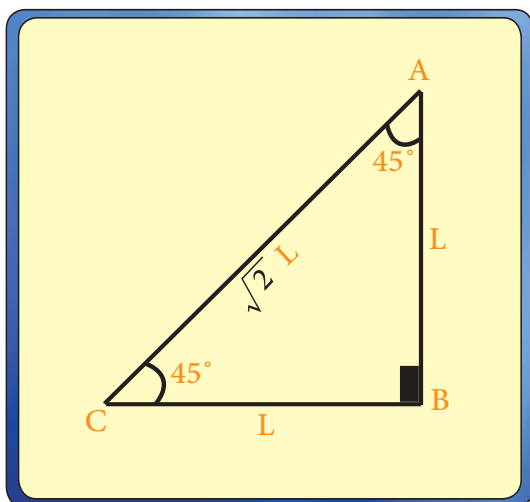
$$\tan Q = \frac{\frac{AC}{AB}}{\frac{BC}{AB}}$$

$$\therefore \tan Q = \frac{\sin Q}{\cos Q}$$

(4-5) Trigonometric ratios for special angles

1) A 45° Angle

We draw a triangle that is right at B. And one of its angles is (45°). So the other angles is (45°) also.



$$\therefore AB = BC = L$$

$$\text{Pythagorean: } (AC)^2 = (AB)^2 + (BC)^2$$

$$(AC)^2 = L^2 + L^2 = 2L^2$$

$$\therefore AC = \sqrt{2} L$$

$$\sin 45^\circ = \frac{L}{\sqrt{2}L} = \frac{1}{\sqrt{2}} \Rightarrow \sin 45^\circ = \frac{1}{\sqrt{2}}$$

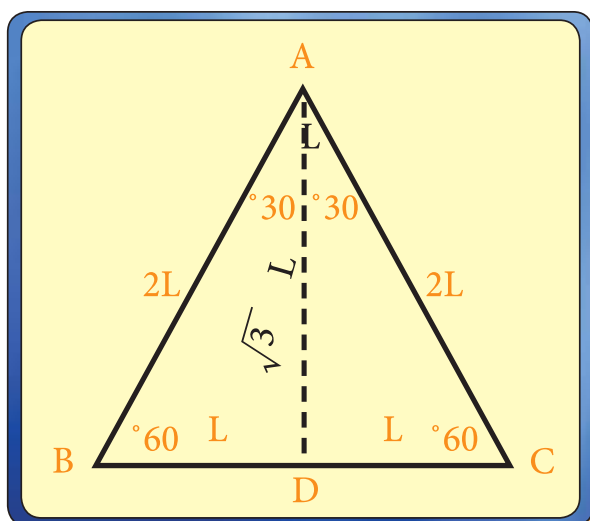
$$\cos 45^\circ = \frac{L}{\sqrt{2}L} = \frac{1}{\sqrt{2}} \Rightarrow \cos 45^\circ = \frac{1}{\sqrt{2}}$$

$$\tan 45^\circ = \frac{L}{L} = 1 \Rightarrow \tan 45^\circ = 1$$

2) A 30°, 60° Angle

We draw an equilateral triangle with the length of one side = 2L

And the measure of all its angles = 60°



We draw $\overline{BC} \perp \overline{AD}$ as in the figure.

$$\therefore L = DB = CD \text{ unit}$$

$$\text{And } m\angle BAD = 30^\circ$$

Using the Pythagorean theorem we get:

$$AD = \sqrt{3} L$$

$$\sin 30^\circ = \frac{L}{2L} = \frac{1}{2} \Rightarrow \sin 30^\circ = \frac{1}{2}$$

$$\sin 60^\circ = \frac{\sqrt{3}L}{2L} = \frac{\sqrt{3}}{2} \Rightarrow \sin 60^\circ = \frac{\sqrt{3}}{2}$$

$$\cos 30^\circ = \frac{\sqrt{3}L}{2L} = \frac{\sqrt{3}}{2} \Rightarrow \boxed{\cos 30^\circ = \frac{\sqrt{3}}{2}}$$

$$\cos 60^\circ = \frac{L}{2L} = \frac{1}{2} \Rightarrow \boxed{\cos 60^\circ = \frac{1}{2}}$$

$$\tan 30^\circ = \frac{L}{\sqrt{3}L} = \frac{1}{\sqrt{3}} \Rightarrow \boxed{\tan 30^\circ = \frac{1}{\sqrt{3}}}$$

$$\tan 60^\circ = \frac{\sqrt{3}L}{L} = \sqrt{3} \Rightarrow \boxed{\tan 60^\circ = \sqrt{3}}$$

Notice that: $\sin 30^\circ = \cos 60^\circ = \frac{1}{2}$

Also $\cos 30^\circ = \sin 60^\circ = \frac{\sqrt{3}}{2}$

Meaning that the sine of one of the angles is equal to the cosine of the other

angle. And in general if Q was an Acute angle then we can say $(90^\circ - Q)$:



Note :

The angles $30^\circ, 60^\circ$, are complementary because

$$90^\circ = 30^\circ + 60^\circ$$

$$\sin (90^\circ - Q) = \cos Q$$

$$\cos (90^\circ - Q) = \sin Q$$

Conclusion

$$* \sin Q = \frac{\text{Opposite}}{\text{Hypotenuse}}, \cos Q = \frac{\text{Adjacent}}{\text{Hypotenuse}}, \tan Q = \frac{\text{Opposite}}{\text{Adjacent}}$$

$$* \sin^2 Q + \cos^2 Q = 1, \tan Q = \frac{\sin Q}{\cos Q}$$

$$* \sin (90^\circ - Q) = \cos Q, \cos (90^\circ - Q) = \sin Q$$

$$* \sin 30^\circ = \cos 60^\circ = \frac{1}{2}, \cos 30^\circ = \sin 60^\circ = \frac{\sqrt{3}}{2}$$

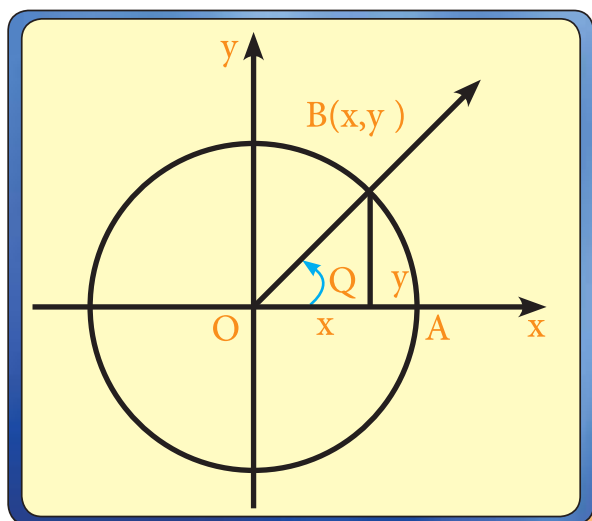
$$* \sin 45^\circ = \cos 45^\circ = \frac{1}{\sqrt{2}}$$

[4-6] Unit circle and trigonometric point

Definition (4 - 5)

Unit circle: Is a circle that its center is the origin point and the length of its radius is equal to 1 length unit.

The trigonometric point for an angle in the figure $Q = m \angle \overrightarrow{BOA}$, A direct angle in standard position, B is the point of intersection between the terminal side \overrightarrow{OB} with the unit circle. We assume that $B(x,y)$



$$\sin Q = \frac{y}{1} \Rightarrow \sin Q = y$$

$$\cos Q = \frac{x}{1} \Rightarrow \cos Q = x$$

$$\therefore B(x,y) = (\cos Q, \sin Q)$$



Note:

By using the unit circle and the conversions in the plane we can find the following trigonometric ratios:

$$\sin (180^\circ - Q) = \sin Q$$

$$\cos (180^\circ - Q) = -\cos Q$$

$$\tan (180^\circ - Q) = -\tan Q$$

Definition (4 - 6)

The trigonometric point for the directed angle in standard position is the intersection point between the terminal side of the angle with the unit circle.

Notice that point B is a trigonometric point for angle \overrightarrow{AOB} , we can see that every directed angle Q in standard position is a trigonometric point(x,y) and $\sin Q = y$, $\cos Q = x$.

Example 7

Find $\sin Q$, $\cos Q$, $\tan Q$ if you know that $Q = 0, 90, 180$

Solution :

We know that $0^\circ, 90^\circ, 180^\circ$ are on the terminal side for each of them on one of the axis. As in figure (4-6) so:

$$(\cos 0, \sin 0) = (1, 0) \Rightarrow \cos 0^\circ = 1$$

$$\sin 0^\circ = 0$$

$$\therefore \tan 0^\circ = \frac{\sin 0^\circ}{\cos 0^\circ} = \frac{0}{1} = 0 \Rightarrow \tan 0^\circ = 0$$

$$(\cos 90^\circ, \sin 90^\circ) = (0, 1) *$$

$$\Rightarrow \cos 90^\circ = 0, \sin 90^\circ = 1$$

$$\text{But } \frac{\sin 90^\circ}{\cos 90^\circ} = \tan 90^\circ \text{ undefined}$$

$$(\cos 180^\circ, \sin 180^\circ) = (-1, 0) *$$

$$\Rightarrow \cos 180^\circ = -1, \sin 180^\circ = 0$$

$$\Rightarrow \tan 180^\circ = 0$$

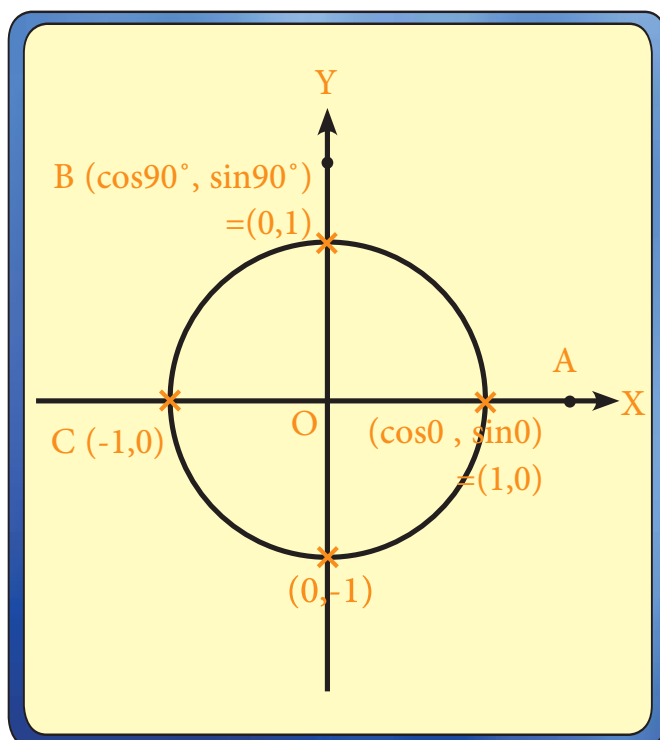


Figure (4 - 6)

[4-7] Circular applications

[4-7-1] Angles of elevation and depression

We can find the heights and dimensions when we can measure the angle that we are seeing the mat. If the observer stands in point A and looks at point C that is over the horizon of point A, then the angle that is between the line from the eye of the observer to point C and the horizon of A is called (angle of elevation) for ex: the angle $\angle CAB$ in figure (4-7).

And if the eye of the observer is at C and he looks at A below the horizon of C, then the angle formed between the line from the eye of the observer to point A and the horizon C is called (angle of depression) for ex: angle $\angle ACD$ in figure (4-7)

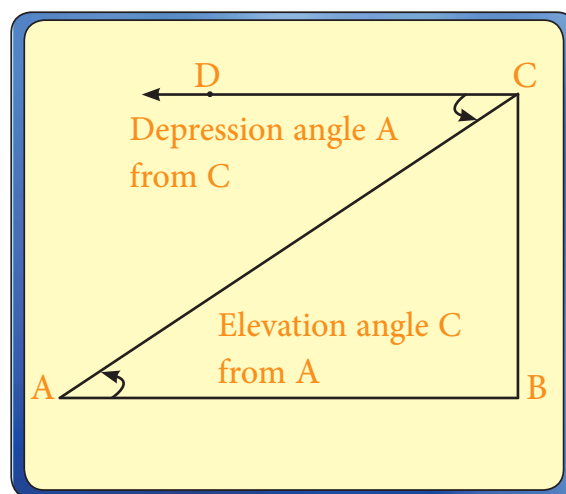


Figure (4 - 7)

Example 8

The length of the string of a kite is 30m, if the angle that the string is making with the earth (the horizon) is 45° . Find the height of the kite.

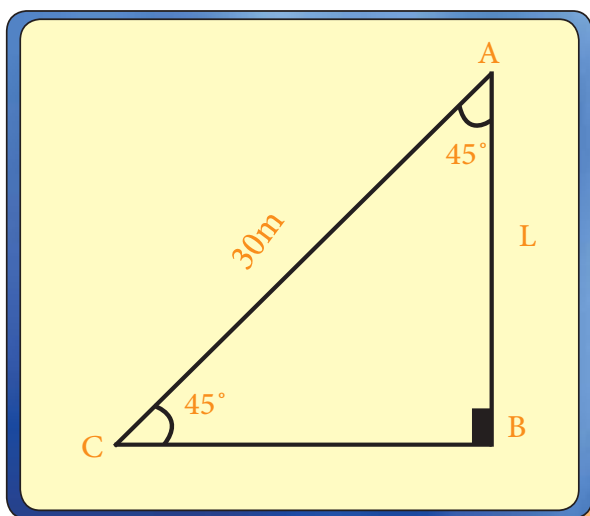


Figure (4 - 8)

Solution :

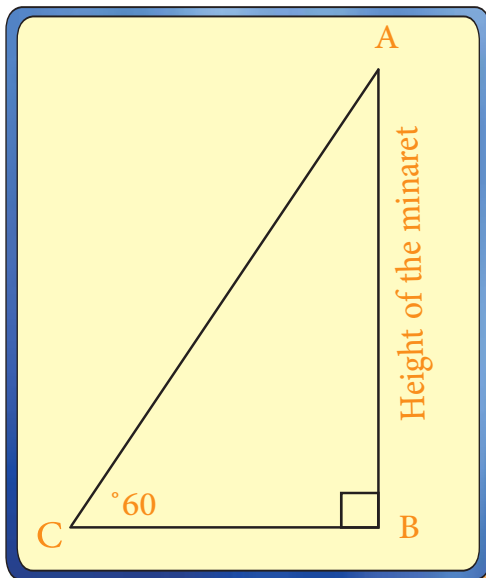
We assume that the height = L length unit
the triangle ABC is a right triangle at B

$$\therefore \sin 45^\circ = \frac{\text{OPP.}}{\text{Hyp.}} \Rightarrow \frac{1}{\sqrt{2}} = \frac{L}{30}$$

$$\therefore L = \frac{30}{\sqrt{2}} = 21.21\text{m}$$

Example 9

An observer found that the angle of elevation of a minaret from a point on the ground that is 8 m away from its base is 60° what is the height of the minaret?



Solution :

ΔABC has a right angle at B:

$$\tan 60^\circ = \frac{\text{OPP.}}{\text{ADJ.}}$$

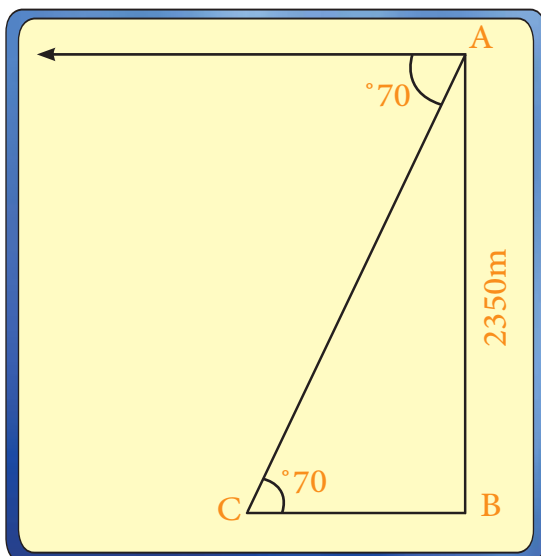
$$\sqrt{3} = \frac{AB}{8}$$

$$\therefore \text{Height of the minaret } AB = 8\sqrt{3}$$

FIGURE (4 - 9)

Example 10

The height of a mountain 2350m, and observer found from its top that the depression angle on the ground is 70° . What is the distance between the point and the observer? $\sin 70^\circ = 0.9396$.



Solution :

Elevation angle = Depression angle

ΔABC has a right angle at B

$$\sin 70^\circ = \frac{AB}{AC}$$

$$0.9396 = \frac{2350}{AC}$$

$$\therefore AC = \frac{2350}{0.9396} \cong 2500\text{m}$$

Figure (4 - 10)

Example 11

From the roof of a house height of 7 meters, observer found a monitor that the angle of the height of the highest building in front of 60 and the angle of low base 30 very dimension between the observer and building and the height of building.

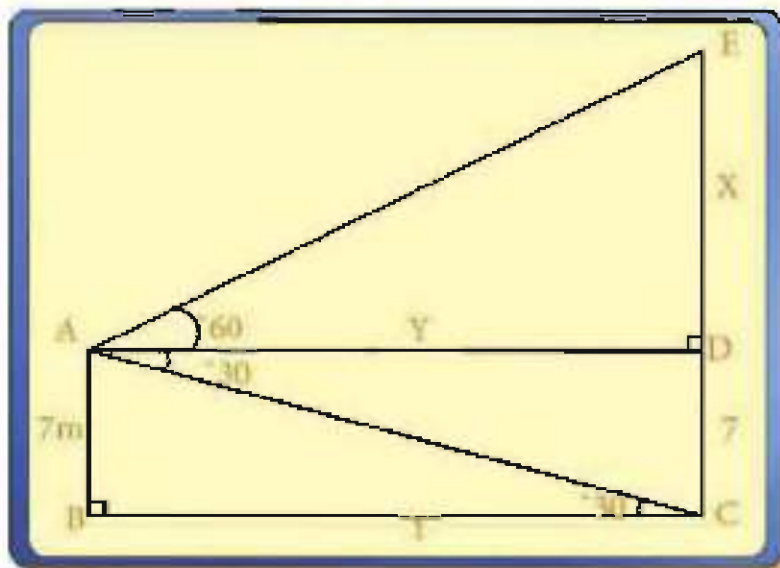


Figure (4 - 11)

Solution :

$$\angle DAC \sim \angle ACB$$

$\triangle ABC$ right angled in B:

$$\tan 30^\circ = \frac{7}{Y}$$

Distance between the observer and building

$$\frac{1}{\sqrt{3}} = \frac{7}{Y} \Rightarrow Y = 7\sqrt{3}$$

$\triangle EAD$ in the right angle D:

$$\begin{aligned} \tan 60^\circ &= \frac{X}{Y} \\ \sqrt{3} &= \frac{X}{7\sqrt{3}} \Rightarrow X = 21 \text{ m} \end{aligned}$$

The height of building = $X + 7$ \therefore

$$= 21 + 7 = 28\text{m}$$

Example 12

The observer Watched that the angle of the height of the balloon is 30 and when the observer went in the horizontal level towards the balloon distance of 1000 meters saw that the angle of elevation is 45 find the height balloon to the nearest meter.

Solution

ΔABC right angle in B:

$$\tan 45^\circ = \frac{x}{y}$$

$$1 = \frac{x}{y}$$

$$\therefore x = y \dots\dots (1)$$

$$\tan 30^\circ = \frac{x}{y + 1000} \dots\dots (2)$$

$$\frac{1}{\sqrt{3}} = \frac{y}{y + 1000} \Rightarrow \sqrt{3} y = y + 1000$$

$$1.7 y - y = 1000$$

$$y = \frac{1000}{0.7} = 1428.6$$

\therefore The height of the balloon $x = 1429$

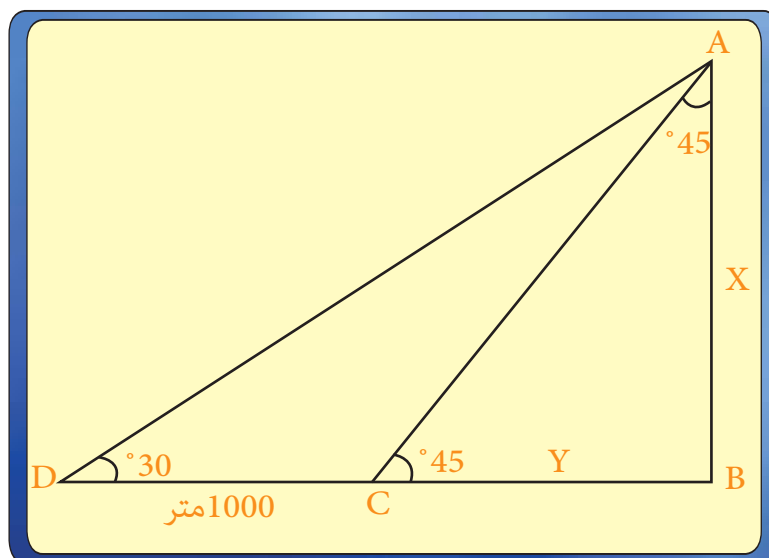


Figure (4 - 12)

[4-7-2] Circular Sector:

Definition (4 - 7)

A circular sector is a part of the circle's surface that is defined by an arc of the circle and two radii passing through both ends of the arc

In figure (4-13) $\angle AOB$ is called a Central angle by the angle of the smaller sector that has an angle with the measure of less than 180° .

Area of the circular sector = $\frac{1}{2}$ Length of the arc \widehat{AB} x r

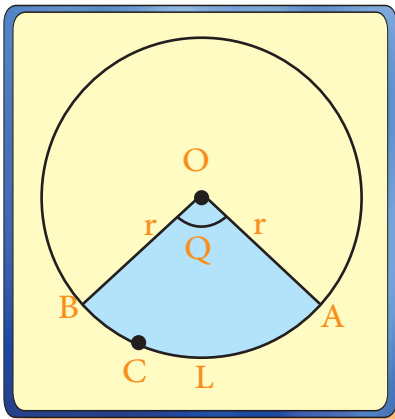


Figure (4-13)

① Area of the circular sector = $\frac{1}{2} Lr$

If we assume that the measure of the central angle by radians = Q

$$Q = \frac{L}{r} \Rightarrow L = Qr$$

And by substituting in the first equation:

② Area of the circular sector = $\frac{1}{2} Qr^2$



Note:

Perimeter of the circular sector
 $= r + r + L$
 $= 2r + L$

Where L is the length of the arc of the circular sector and r is the length of the radius

Corollary1: If we assume that the surface of a circle is a sector with an angle of 2π

$$\therefore \text{Area of the circle} = \frac{1}{2} (2\pi) \times r^2 = \pi r^2$$

Corollary2:

$$\frac{Q}{2\pi} = \frac{\frac{1}{2} Qr^2}{\pi r^2} = \frac{\text{Area of circular sector}}{\text{Area of surface of circle}}$$

$$\therefore \frac{D^\circ}{360^\circ} = \frac{Q}{2\pi} \text{ Where } D^\circ \text{ is the measure of the central angle of the sector in degrees}$$

$$\therefore \frac{\text{Area of circular sector}}{\text{Area of surface of circle}} = \frac{D^\circ}{360^\circ} = \frac{Q}{2\pi}$$

$$\therefore \text{Area of the circular sector} = \frac{\text{The measure of its degree angle}}{360} \times \text{area of the circle}$$

Example 13

Find the area of the circular sector if the measure of its angle is 60° and the length of the radius is 8cm.

Solution :

$$\therefore \text{Area of the sector} = \frac{1}{2} Q r^2$$

$$\begin{aligned} \frac{1}{2} \times \frac{\pi \cancel{60}}{180} \times 64 &= \\ \frac{1}{2} \times \frac{3.14}{3} \times 64 &= 33.49 \text{ cm}^2 \end{aligned}$$

Another solution : area of the circular sector $= \frac{D^\circ}{360^\circ} \times \text{the area of its circle}$

$$\begin{aligned} \pi \times 64 \times \frac{60^\circ}{360^\circ} &= \\ 64 \times 3.14 \times \frac{1}{6} &= 33.49 \text{ cm}^2 \end{aligned}$$

Example 14

The area of a circular sector is 15cm^2 and the length of its arc is 6cm. Find the length of the radius, perimeter of the circle, the measure of its angle in Degree

Solution :

$$1- \quad \frac{1}{2} L r = \text{Area of circular sector}$$

$$15 = \frac{1}{2} \times 6 \times r \Rightarrow r = 5$$

$$2- \text{ Perimeter of circular sector} = 2r + L$$

$$\text{cm } 16 = 6 + 5 \times 2 =$$

$$3- \quad \text{Radians } 1.2 = \frac{6}{5} = Q \Leftarrow \frac{L}{r} = |Q| \therefore$$

$$\frac{3.14}{180^\circ} = \frac{1.2}{D^\circ} \Leftarrow \frac{\pi}{180^\circ} = \frac{Q}{D^\circ}$$

$$68.7898^\circ = \frac{180^\circ \times 1.2}{3.14} = D^\circ \therefore$$

[4-7-3] Circular Segment :

Definition (4 - 8)

A circular segment is a part of the circle that is defined by an arc and a chord passing through both ends of the arc. $\angle AOB$ is a central angle as in Figure 4-14

The angle of the smaller segment and its angle is less than 180°

To find the segment's area:

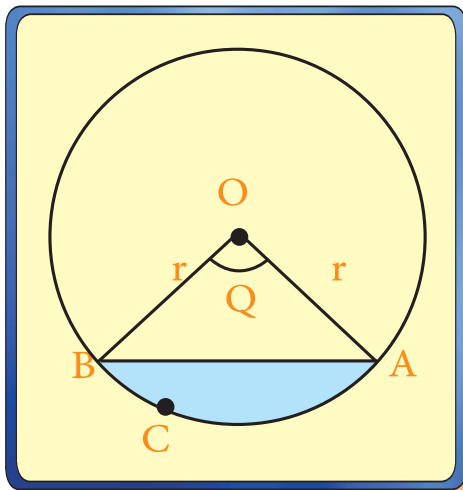


Figure (4-14)

We assume that Q is the radian measure of the smaller segment

Area of segment ABC = Area of sector (\widehat{OACB}) - Area of $\triangle OAB \therefore$

$$\frac{1}{2} Q r^2 = (\widehat{OACB})\text{'s sector's area} \therefore$$

$$\frac{1}{2} \times OA \times OB \times \sin Q = \triangle OAB\text{'s area}$$

$$\frac{1}{2} \times r \times r \sin Q = \triangle OAB \therefore$$

$$\frac{1}{2} Q r^2 - \frac{1}{2} r^2 \sin Q = \text{AC's area} \therefore$$

$$\frac{1}{2} r^2 (Q - \sin Q) = \text{ACB Segment's area}$$

Where Q is the measure of the segment's angle in radians, r is the length of the circle's radius.

Example 15

Find the area of the segment that has a radius of 12cm and the measure of its angle is 30°

Solution :

$$\frac{\pi}{180} = \frac{Q}{D^\circ} \Rightarrow \frac{\pi}{180^\circ} = \frac{Q}{30^\circ} \Rightarrow Q = 0.5236$$

$$\begin{aligned} \therefore \text{The Area of the segment} &= \frac{1}{2} r^2 (Q - \sin 30^\circ) \\ &= (-0.5 - 0.5236) \times 144 \times \frac{1}{2} \end{aligned}$$

$$\therefore \text{Area of the segment} = (0.0236) \times 144 \times \frac{1}{2} = 1.7 \text{ cm}^2$$

Example 16

O is the center of a circle that's radius is 6cm, a 6cm chord was drawn in it, estimate the area of the smaller segment in cm^2

Solution :

$\triangle AOB$ is equilateral

$$\therefore m\angle AOB = 60^\circ$$

$$\frac{\pi}{180^\circ} = \frac{Q}{D^\circ} \Rightarrow \frac{\pi}{180^\circ} = \frac{Q}{60^\circ} \Rightarrow Q = \frac{\pi}{3} = \frac{22}{7} = 1.047$$

$$\frac{1}{2} r^2 (Q - \sin Q) = \text{Area of the segment}$$

$$\frac{1}{2} \times 36 (1.047 - \sin 60^\circ) =$$

$$18 (1.047 - 0.865) =$$

$$3.276 \text{ cm}^2 = 18 (0.182) =$$

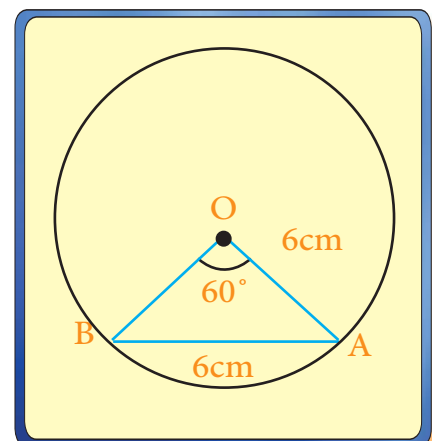


Figure 4-15



Exercises (4 - 2)

Q1 /

A person stood on top of a tower and saw two trees collinear with the tower's base, if the depression angle of the first tree is 70° and the depression angle of the second tree is 50° , find the distance between the two trees knowing that the height of the tower is 30m, $\tan 50^\circ = 1.2$, $\tan 70^\circ = 2.8$. Ans/ 14.28cm

Q2 /

From a point that is 50m away from the base of a tower, it was found that the elevation angle of its peak is 30° , what is the height of the tower.

Ans/ 28.9cm

Q3 /

Find the area of a circular sector that's arc's length is 8cm and the length of the radius of its circle is 3.2cm. Ans/ 12.8cm^2

Q4 /

Find the area of a circular sector, if the measure of its angle is 100° , the length of the radius is 10cm. Ans/ 87.3cm^2

Q5 /

The area of a circular segment is 37.68cm^2 and the length of the radius of its circle is 6cm, find the length of its arc. Ans/ 12.56cm

Q6 /

Half the perimeter of a circle is 10cm. Find the area of the circular sector in it that's angle is 45° Ans/ 3.98cm^2

Q7 /

Find the area of a circular segment that's angle is 60° and the measure of the radius of its circle is 8cm. Ans/ 5.81cm^2

[4-8] Using the calculator to find the values of circular applications

You knew in section [4-2] that an angle has two methods to calculate that are:
the

degree measure and the radian measure and a calculator uses both of these ways.
we can see the degree measure on top of a calculator which is denoted by (DEG)
which stands for (Degree).

And the Radian measure is denoted by (RAD) that stands for RADIANT.

and these two symbols appear on top of the screen after pressing **DRG** →, First
press shows DEG and the second shows RAD and vice versa. There are also
special

keys for Trigonometric ratios too.

key (sin) stands for (Sine)

Key (cos) stands for (Cosine)

Key (tan) stands for (tangent)

How to use the calculator:

1. We choose the degree measure system (DEG) or the radian measure (RAD) by
(DRG)
2. We type in the measure of the angle according to the system we chose
3. We press the keys of the trigonometric ratios

The following examples will explain it:

Example 17 (1) $\sin 30^\circ$ (2) $\cos 120^\circ$ (3) $\tan 350^\circ$

Find

Solution :

(1) Degree measure: We press until DEG shows on
top of the screen.

* type in 3.

* press sin and you'll get the result 0.5

NOTE:

$$\sin(-Q) = -\sin Q$$

$$\cos(-Q) = \cos Q$$

$$\tan(-Q) = -\tan Q$$

2) Degree measure: press until you can see DEG on top of the screen

*type in 120

*press (cos) and you'll get the result -0.5

3) Degree measure: We press until we can see DEG on top of the screen.

*type in 350 then press-tan so the answer will be close to -0.17630

Example 18

Find $\tan \frac{7\pi}{5}$ (3) , $\cos (-3\pi)$ (2) , $\sin \frac{5\pi}{4}$ (1)

Solution :

*Radian measure: press until RAD shows up.

* Press on the key that's usually found on the keys 2ndf or INV and its usually in color other than black(yellow, red, etc..)

* Press the key: π calculations Ratio = Answer

(1) $\sin \frac{5\pi}{4}$

*press until RAD shows up.

*Press 2ndf then $\pi = 3.141592564$ times 5 = 15.70796327

Divided by 4 = 3.926990817 then sin = 0.707106781

(2) $\cos (-3\pi)$

It is known that $\cos Q = \cos(-Q)$ (we remove the negative sign)

*press until RAD shows up.

*Press 2ndf then $\pi = 3.141592564$ multiply by 3 = 9.42477961

Then cos = -1

(3) $\tan \frac{7\pi}{5}$

*press until RAD shows up.

*Press 2nd f then $\pi = 3.141592654$ multiply by 7 = 21.9114858

Divide by 5 = 4.398229715 then press tan = 3.07763537

Exercise :

Find the followings using a calculator:



(1) $\sin \left(\frac{\pi}{6} \right)$ (2) $\cos (-400^\circ)$ (3) $\tan (-15^\circ)$

(4) $\tan (-36^\circ)$ (5) $\cos \frac{2\pi}{3}$ (6) $\tan \frac{8\pi}{5}$

Solution :

(1) 0.5

(2) 0.766044443

(3) -0.267949192

(4) -0.588

(5) -0.5

(6) -3.077683537

Each Triangle consists of 6 elements(3 sides and 3 angles) and solving the triangle means finding the unknown values of the elements.

Example 19

If $\tan 22^\circ = 0.4$ find;

(1) $\sin 22^\circ$, $\cos 22^\circ$

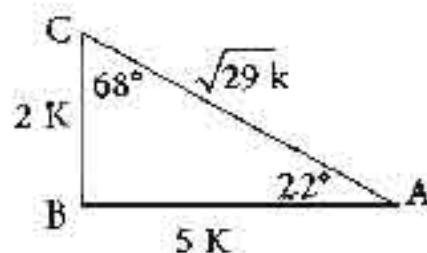
(2) $\cos 68^\circ$, $\sin 68^\circ$

Solution :

$$\tan 22^\circ = \frac{\text{opposite}}{\text{Adjacent}} = \frac{4}{10} = \frac{2}{5}$$

$$\therefore \text{Opposite} = 2k$$

$$\therefore \text{Adjacent} = 5k$$



$$\text{Pythagorean theorem} \quad (AB)^2 + (BC)^2 = (AC)^2$$

$$4K^2 + 25K^2 = (Ac)^2$$

$$AC = \sqrt{29} K$$

$$\sin 22^\circ = \frac{BC}{AC} = \frac{2k}{\sqrt{29}k} = \frac{2}{\sqrt{29}} \quad (1)$$

$$\cos 22^\circ = \frac{AB}{AC} = \frac{5k}{\sqrt{29}k} = \frac{5}{\sqrt{29}}$$

$$\sin 68^\circ = \sin (90^\circ - 22^\circ) = \cos 22^\circ = \frac{5}{\sqrt{29}} \quad (2)$$

$$\cos 68^\circ = \cos (90^\circ - 22^\circ) = \sin 22^\circ = \frac{2}{\sqrt{29}}$$

Example 20

If you knew that $\cos C = \frac{5}{13}$ in triangle ABC that is right angle at B.. Find $\sin A$, $\tan C$, $\cos A$.

Solution :

We draw ABC that is right at B:

$$\cos C = \frac{\text{adjacent}}{\text{Hypotenuse}} = \frac{5k}{13k}$$

$$\therefore (\text{Pythagorean}) (AC)^2 = (AB)^2 + (BC)^2$$

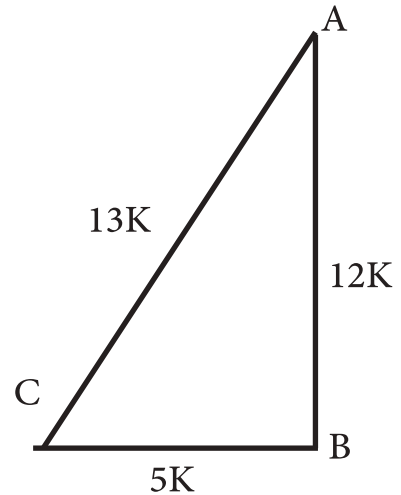
$$\therefore 169 K^2 = (AB)^2 + 25 K^2$$

$$\therefore (AB)^2 = 144 K^2 \Rightarrow AB = 12K$$

$$\tan C = \frac{12k}{5k} = \frac{12}{5}$$

$$\sin A = \frac{5k}{13k} = \frac{5}{13}$$

$$\cos A = \frac{12k}{13k} = \frac{12}{13}$$



Example 21

ABC is a triangle that has a right angle at A, AC=24cm, AB=7cm find:

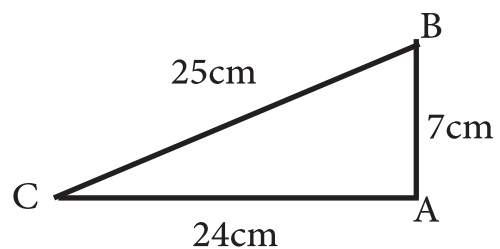
$\sin C$, $\sin B$, $\tan C$, $\cos B$

Solution :

$$(BC)^2 = (AB)^2 + (AC)^2$$

$$(BC)^2 = (7)^2 + (24)^2 = 49 + 576 = 625$$

$$\therefore BC = 25 \text{ cm}$$



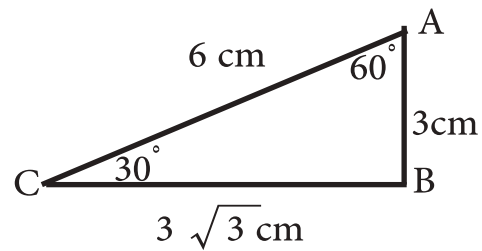
$$\therefore \sin C = \frac{7}{25} \quad , \quad \sin B = \frac{24}{25}$$

$$\tan C = \frac{7}{24} \quad , \quad \cos B = \frac{7}{25}$$

Example 22

Solve for the triangle ABC that has a right angle at B. If you knew that AB = 3cm, AC = 6cm

Solution :



$$(AC)^2 = (AB)^2 + (BC)^2$$

$$36 = 9 + (BC)^2$$

$$BC = 3\sqrt{3}$$

We found the lengths of the sides, now we will find the measures of the angles.

$$\tan C = \frac{3}{3\sqrt{3}} = \frac{1}{\sqrt{3}} \Rightarrow C = 30^\circ$$

$$m\angle A = 90^\circ - 30^\circ = 60^\circ$$

Conclusion

In the solution for a right triangle we use:

*Trigonometric ratios $\sin Q$, $\cos Q$, $\tan Q$

*We use the pythagorean theorem

and depending on the nature of the question

Exercices (4 - 3)

Q1 /

ABC is a right triangle at B, $\sin C = \frac{8}{17}$ Find $\sin A$, $\tan C$, $\cos C$

Q2 /

ABC is a right triangle at C, $BC = 24\text{cm}$, $AB = 25$. Find $\sin^2 B + \cos^2 B$ using the given information

Q3 /

If $\cos Q = \frac{4}{5}$ Find $\tan Q$, $\sin Q$

Q4 /

The length of a ladder that's anchored on a horizontal ground is 10 m. it's other end is on a vertical wall. if the angle between the ladder and ground is 30° . What is the distance between it's top end and the ground, and the distance between it's bottom end and the wall. Use $3 = \sqrt{1.73}$

Q5 /

ABC is a right triangle at C, $m\angle CAB = 60^\circ$, $AB = 20\text{ cm}$. Find its area.

Q6 /

(A) $\frac{3}{4} \tan^2 30^\circ + 2 \sin 60^\circ + 3 \tan 45^\circ + \cos^2 30^\circ - \tan 60^\circ$

(B) $\cos^2 45^\circ \sin 60^\circ \tan 60^\circ \cos^2 30^\circ$.

(C) $\sin 120^\circ$, $\cos 135^\circ$, $\tan 150^\circ$.

Q7 /

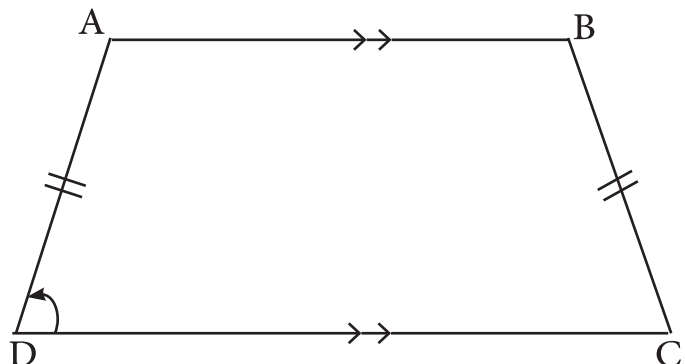
In the figure:

ABCD is a trapezoid where

$AD = BC$ (isosceles)

$DC = 20\text{ cm}$, $AB = 14\text{cm}$,

$AD = 6\text{cm}$, Find $m\angle CDA$



5

Chapter 5: Vectors

[5-1] Concept of vectors (geometric and algebraic)

[5-2] Conormal Vector

[5-3] The Vector Length And Its Direction

[5-4] The addition of vectors and multiply it by real number

[5-5] Giving the vector in terms of unity in the coordinate plane

Aims and skills

At the end of this chapter the student will acknowledge:

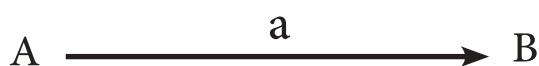
- Learning the Vector geometrically
- Learning the Vector algebraically
- Learning the Conormal Vector
- Finding the Length of Conormal Vector
- Finding the Direction of Conormal Vector
- Finding the addition of vectors
- Finding the multiply of the Vector by real number
- Learning the unit Vector
- put the Vector by unit Vectors

<i>Terms</i>	<i>Symbol or Mathematical relations</i>
Vector \vec{a}	$\vec{a} = (x, y)$
Vector Length a	$ \vec{a} = \sqrt{x^2 + y^2}$
Zero Vector	$\vec{0} = (0, 0)$
unit Vector \vec{u}_1, \vec{u}_2	$\vec{u}_1 = (1, 0), \vec{u}_2 = (0, 1)$

[5-1] Concept of vectors (geometric and algebraic)

Introduction : Some physical and mathematical quantities such as length, mass, time, size, distance, etc. It is determined by a number indicating only its quantity, and such quantities are called numerical quantities or non-vector Quantities. Other amounts such as power, speed and displacement will be trend plus the amount is necessary to fully determine such quantities are called vector quantities. Originated an idea originally intended in the mechanics to represent

The force, speed, displacement, etc., and used the piece A straight line from a point such as A is called the starting point to another point such as the B called point Finish to represent the vector and usually denotes the vector with the symbol \overrightarrow{AB} where the arrow means that the object is directed From A to B. The vector may be represented by a single letter such as \vec{a} (with its beginning and end) there are two ways to study vectors



(1) geometric

(2) algebraic

In our study in this chapter we focus on algebraic part and using geometric part to Illustration

Basic concepts: **Vectors** geometrically means a line segment directed as we said above AB, CD, EF are different vectors figure (5-1)

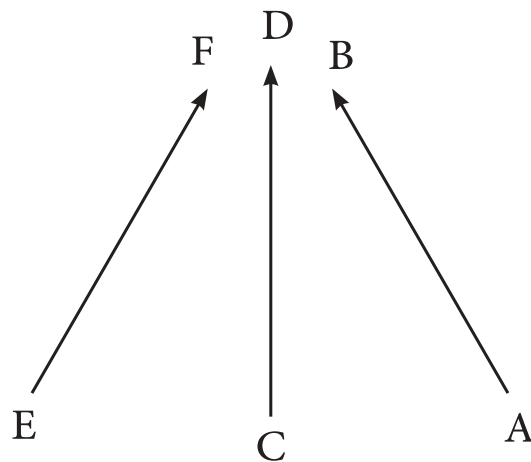


Figure (5 - 1)

Parallel Vectors: If the two segments are parallel, parallel vectors may have the same direction or may be in the opposite direction. Figure (5-2) shows that \overrightarrow{AB} is parallel to \overrightarrow{CD} and has the same direction. However, \overrightarrow{AB} is parallel to \overrightarrow{EF} as they are in opposite direction

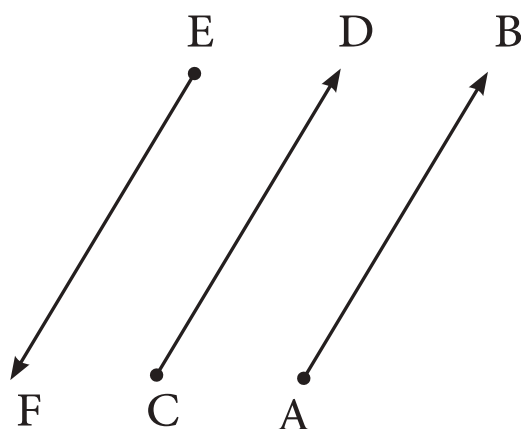


Figure (5 - 2)

Equivalent vectors: if they have same length and same direction.

[5-2] Conormal Vector

For each vector in the plane there is a single vector whose equivalent starts from the point of origin $(0, 0)$, so instead of Dealing from an infinite number of vectors equal in length and direction, we will take the vector equalizer Which begins with the origin point representing all of them, is called the vector that begins with the origin point of the vector Standard or restricted vector. The rest with non-point vector are called free vector.

Notice that:

\overrightarrow{OF} , \overrightarrow{OE} two conormal vectors

While \overrightarrow{CD} , \overrightarrow{AB} are free vectors

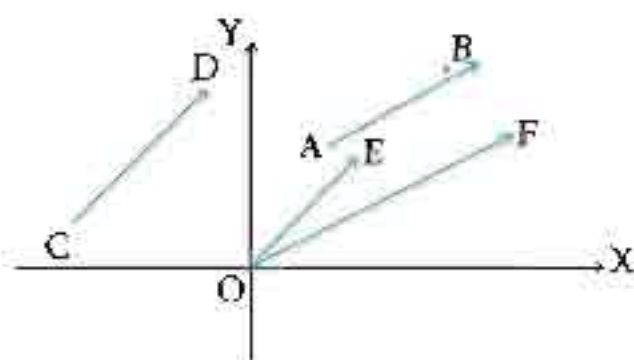


Figure (5 - 3)

5-2-1 Vectors and its representations

We represented the pair $(4, 3)$ with a point at the perpendicular coordinate and each pair of real numbers. We can represent it by one point. The two pairs $(3, 5)$, $(2, 3)$ are represented by points C and B Respectively. Its origin is the point of origin and the end of ordered pairs known Oriented segments \overrightarrow{OC} , \overrightarrow{OB} , \overrightarrow{OA} .

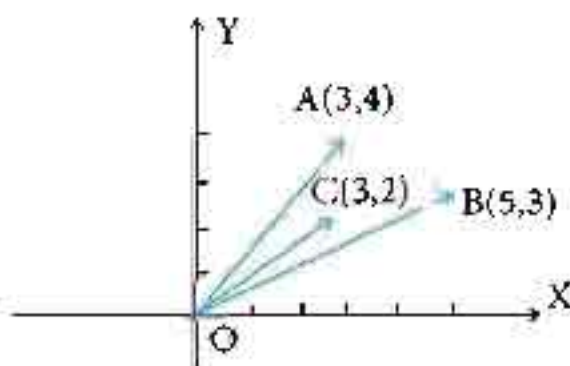


Figure (5 - 4)

The ordered pairs (3.4), (5.3), (3.2). On this basis we will represent the vector with a pair of real numbers

we write $\overrightarrow{OA} = \overrightarrow{A} = (x, y)$

Because we will limit our study to vectors Conorlical only, so all start with the point of origin Only the final point is mentioned.

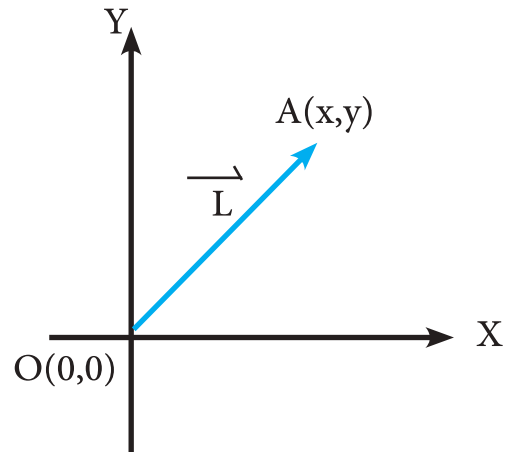


Figure (5 - 5)

[5-3] The Vector Length And Its Direction

5-3-1 The Vector Length

Is the distance between the vectors starting point and the end point AB is the length of \overrightarrow{AB} and symbolizes by $\|\overrightarrow{AB}\|$

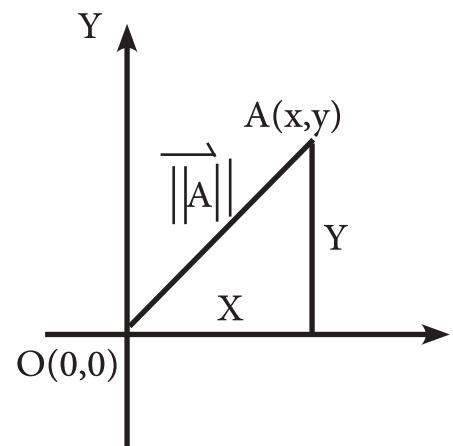


Figure (5 - 6)

Definition (5-1)

if \overrightarrow{A} was a vector in which $\overrightarrow{A} = (x, y)$ so that

$$\|\overrightarrow{OA}\| = \|\overrightarrow{A}\| = OA = \sqrt{x^2 + y^2}$$

Notice that the figure (5-6)

Example 1

Find the length for each of the following :

$$(-12, -9), \left(\frac{\sqrt{2}}{10}, \frac{7\sqrt{2}}{10}\right), (3, 4)$$

Solution

Length vector $(3, 4)$ is $\sqrt{(3)^2 + (4)^2} = \sqrt{9 + 16} = 5$

Length vector $\left(\frac{\sqrt{2}}{10}, \frac{7\sqrt{2}}{10}\right)$ is $\sqrt{\left(\frac{\sqrt{2}}{10}\right)^2 + \left(\frac{7\sqrt{2}}{10}\right)^2} = \sqrt{\left(\frac{2}{100}\right) + \left(\frac{98}{100}\right)} = \sqrt{\frac{100}{100}} = 1$

$$\sqrt{(-12)^2 + (-9)^2} = \sqrt{144 + 81} = \sqrt{225} = 15$$

Definition (5-2)

Zero Vector : The vector $(0, 0)$ is called the zero vector because its starting and ending point is the origin point. and symbolized by $\vec{0}$, and length $\vec{0} = \|\vec{0}\|$.

Definition (5-3)

Equals vectors: The vector (x_1, y_1) and (x_2, y_2) are said to be equal if and only if

$$x_1 = x_2, y_1 = y_2$$

Definition (5-4)

Vector direction: The angle made by the vector with the positive direction of the X-axis

[5-3-2] The direction of the vector

If $\vec{A} = (x, y)$ was a vector, then the direction of \vec{A} is known as the measured angle Q , where $0 \leq Q < 2\pi$ measured in the opposite direction of the clockwise direction from the positive X- axis to the vector \vec{A}

Note that the direction of zero vector is undefined.

$$\cos Q = \frac{\sqrt{x}}{x^2 + y^2}, \quad \sin Q = \frac{\sqrt{y}}{x^2 + y^2}$$

Example 2

Find length and direction of $\vec{OB} = (\sqrt{3}, -1)$

Solution :

$$\|\vec{OB}\| = \sqrt{(\sqrt{3})^2 + (-1)^2} = \sqrt{3 + 1} = 2$$

Assume that Q equals the measurement of the angle that Vector \vec{OB} determines with the positive direction of the X- axis

$$\text{So } \cos Q = \frac{\sqrt{3}}{2}$$

$$\sin Q = \frac{-1}{\sqrt{2}}$$

And from the figure (5- 7) we can see that Q on the fourth quadrant.

And the direction of vector is

$$2\pi - \frac{\pi}{6} = \frac{11\pi}{6}$$

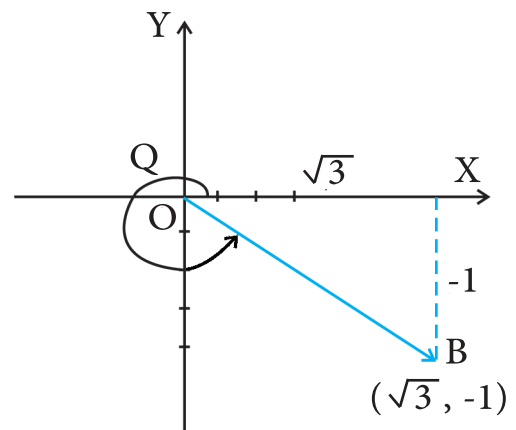


Figure (5 - 7)

Example 3

Find the direction of $(\frac{1}{\sqrt{2}}, \frac{1}{\sqrt{2}})$

Solution :

Assume that Q is equal to vector angle measurement $(\frac{1}{\sqrt{2}}, \frac{1}{\sqrt{2}})$

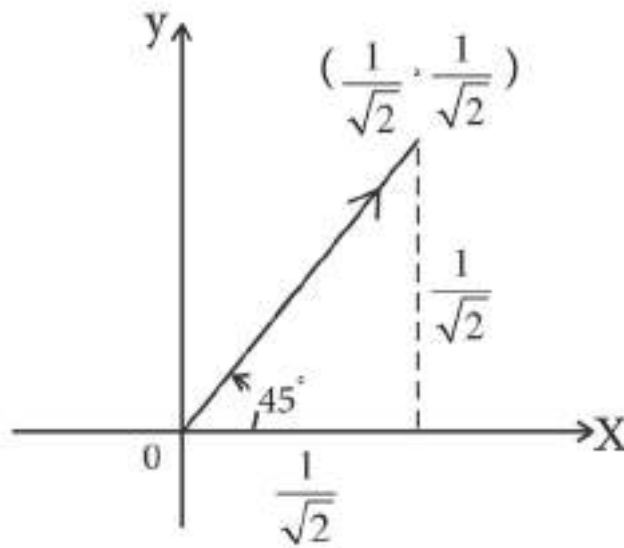


Figure (5 - 8)

$$\cos Q = \frac{\frac{1}{\sqrt{2}}}{\sqrt{(\frac{1}{\sqrt{2}})^2 + (\frac{1}{\sqrt{2}})^2}} = \frac{1}{\sqrt{2}}$$

$$\sin Q = \frac{\frac{1}{\sqrt{2}}}{\sqrt{(\frac{1}{\sqrt{2}})^2 + (\frac{1}{\sqrt{2}})^2}} = \frac{1}{\sqrt{2}}$$

From the figure (5-8) we noticed that

Q is on the first quadrant $\frac{\pi}{4}$

Example 4

Find the vector if its length 5 and its direction $\frac{\pi}{6}$

Solution :

Suppose that $\vec{a}(x,y)$

$$\cos Q = \frac{x}{\|\vec{a}\|} \Rightarrow \cos \frac{\pi}{6} = \frac{x}{5} \Rightarrow \frac{\sqrt{3}}{2} = \frac{x}{5}$$

$$\therefore x = \frac{5\sqrt{3}}{2}$$

$$\sin Q = \frac{y}{\|\vec{a}\|} \Rightarrow \sin \frac{\pi}{6} = \frac{y}{5} \Rightarrow \frac{1}{2} = \frac{y}{5}$$

$$\therefore y = \frac{5}{2}$$

\therefore the vector is $(\frac{5\sqrt{3}}{2}, \frac{5}{2})$

Conclusion

1) The length $\vec{A}(x,y)$ equal $\|\vec{A}\|$ so $\|\vec{A}\| = \sqrt{x^2 + y^2}$

2) To find the direction $\vec{A}(x,y)$ we use $\cos \theta = \frac{x}{\|\vec{A}\|}$, $\sin \theta = \frac{y}{\|\vec{A}\|}$



Exercise (5 - 1)

Q1 /

Find the length and the direction of the following vector and draw directed line segments which referred to:

- A) $(-2, 2)$, B) $(-3, 0)$, C) $(1, \sqrt{3})$
D) $(0, 6)$, E) $(\sqrt{3}, -1)$, E) $(-3, -3)$, G) $(0, -8)$

Q2 /

Find the vector with length and direction as the following:

- A) $\|\vec{B}\| = 2$, $Q = \frac{\pi}{6}$
B) $\|\vec{B}\| = \sqrt{2}$, $Q = \frac{\pi}{4}$
C) $\|\vec{B}\| = 4$, $Q = \pi$
D) $\|\vec{B}\| = 3$, $Q = \frac{3\pi}{2}$
E) $\|\vec{B}\| = 4$, $Q = \frac{2\pi}{3}$

[5-4] The addition of vectors and multiply it by real number

The addition of vectors(5-4-1)

To add two vectors such as \vec{A} , \vec{B} we geometrically draw one of them and from the other end point of the vector Which begins with the starting point of the first vector and ends at the end point of the second vector is the sum of the vectors, check the fig(5-9). The sum of two vectors is found in a Parallelogram way, representing the total diameter Parallelogram in which two vectors are adjacent as in a fig(5-10):

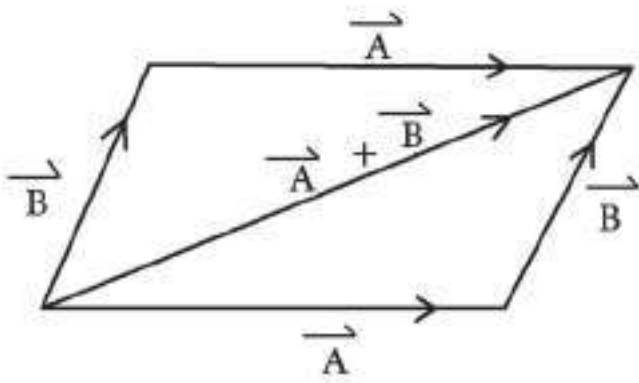


Figure (5-9)

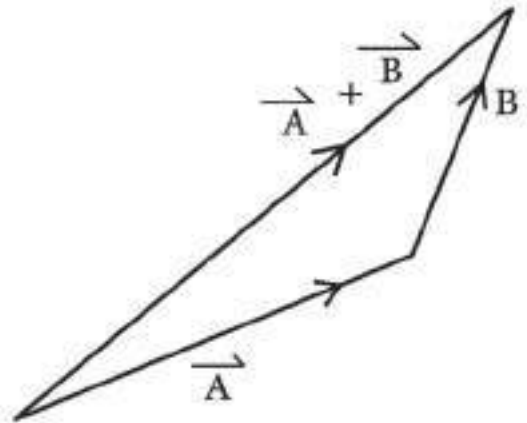


Figure (5-10)

Two vectors may be located on one straight line, then they are said to be on one straightness, as in the vectors, \vec{A} , \vec{C} while \vec{A} and \vec{B} are opposite in direction as in fig (5-11).

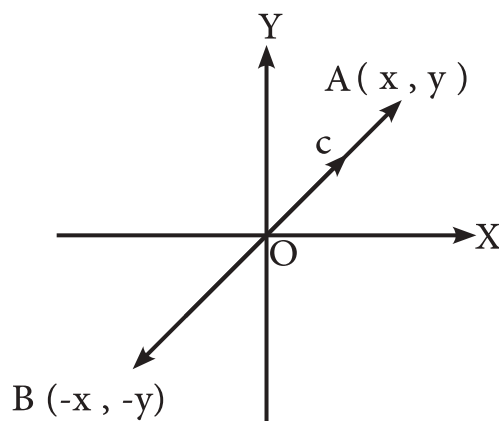


Figure (5-11)

If \vec{A} and \vec{B} are on one straightness, they are equal in length and opposite in direction, It was if $\vec{A} = (x, y)$ so $\vec{B} = (-x, -y)$

Notes that $\|\vec{A}\| = \|\vec{B}\| = \sqrt{x^2 + y^2}$

The negative vector of A is denoted by the symbol $-\vec{A}$

Definition (5-5)

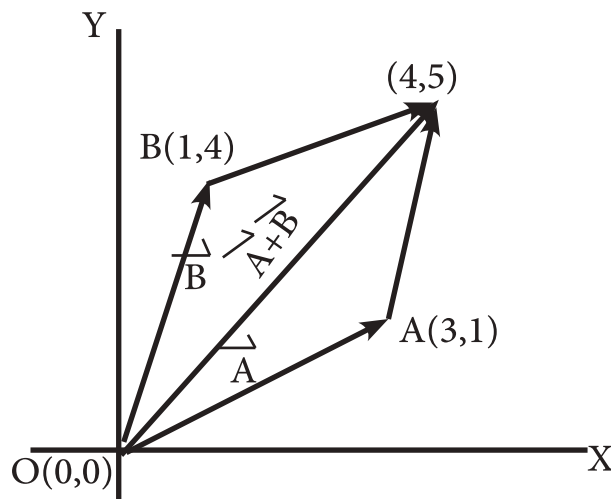
If $\vec{A} = (x_1, y_1)$, $\vec{B} = (x_2, y_2)$ then

$$\vec{A} + \vec{B} = (x_1, y_1) + (x_2, y_2) = (x_1 + x_2, y_1 + y_2)$$

Example 5

If $\vec{A} = (3, 1)$, $\vec{B} = (1, 4)$ find $\vec{A} + \vec{B}$

Solution :



الشكل (5 - 12)

$$\vec{A} + \vec{B} = (3, 1) + (1, 4) = (4, 5)$$

This can be illustrated geometrically as in Figure (5-12)

Note that $\vec{A} + \vec{B}$ represents the parallelogram diameter of the vector \vec{A}, \vec{B}

Example 6 :

If $\vec{A} = (-4, 3)$, $\vec{B} = (5, -2)$ find $\vec{A} + \vec{B}$.

Solution :

$$\vec{A} + \vec{B} = (-4, 3) + (5, -2) = (1, 1)$$

5-4-2 the Vector addition properties

(1) **Closure Property:** If both \vec{A} and \vec{B} are vectors then, $\vec{A} + \vec{B}$ is also vectors

(2) **Associative property:** If $\vec{A}, \vec{B}, \vec{C}$ are vectors then $(\vec{A} + \vec{B}) + \vec{C} = \vec{A} + (\vec{B} + \vec{C})$

(3) **Commutative Property:** If \vec{A} and \vec{B} were a vector then $\vec{A} + \vec{B} = \vec{B} + \vec{A}$

(4) **Additive Identity:** The zero vector is the Identity element in addition of the vector this means that if \vec{A} is any vector,

$$\vec{A} + (0,0) = (0,0) + \vec{A} = \vec{A}$$

(5) **Additive Inverse:** : If \vec{A} is any vector, another vector is $-\vec{A} = \vec{B}$ such that

$$\vec{A} + (\vec{B}) = (\vec{B}) + \vec{A} = (0,0)$$

(6) **Elimination property:** if \vec{A}, \vec{B} are vectors and $\vec{A} + \vec{B} = \vec{A} + \vec{C}$ then $\vec{B} = \vec{C}$

Example 7

Find the additive inverse for the vector $(-2, 3)$

Solution :

The additive inverse of $(-2, 3)$ is $(2, -3)$ because

$$(-2, 3) + (2, -3) = (-2 + 2, 3 + (-3)) = (0, 0)$$

5-4-3 Multiplying a vector by real number

Definition (5 - 6)

if $\vec{A} = (x, y)$ and K is a real number then $K\vec{A} = \vec{AK} = (Kx, Ky)$

that can be illustrated geometrically

Suppose that $\vec{A} = (x, y)$ and $K\vec{A}$ is a Straight vector on \vec{A} and length equal $K \|\vec{A}\|$
means k times

As long as the length of vector \vec{A} when it is $k > 0$ and has the same vector direction

Figure (5-13) (If $k < 0$) is negative, the vector \vec{AK} is located on the straightness of \vec{A} and its length equals $K \|\vec{A}\|$

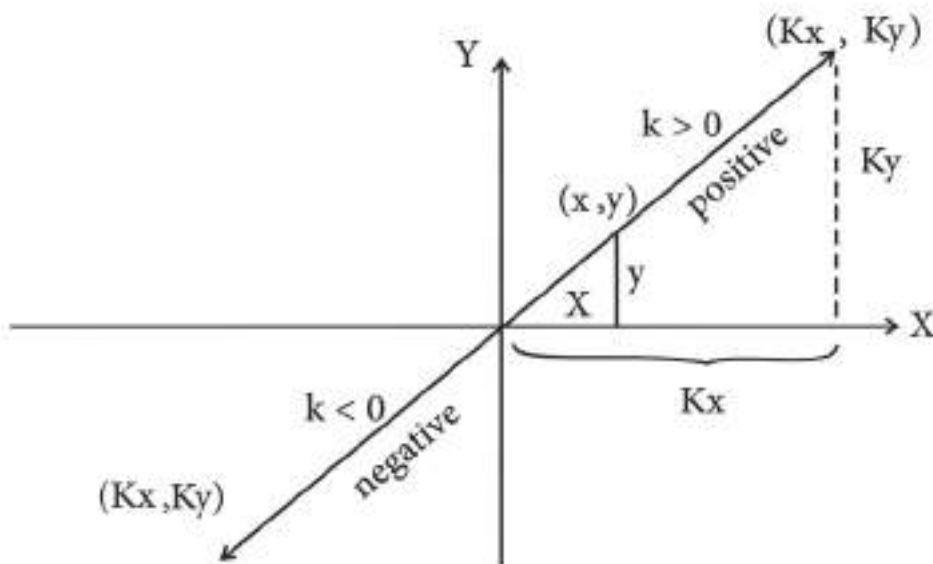


Figure (5 - 13)

Example 8

If $\vec{C} = (3, -1)$ then find $2\vec{C}$, \vec{C} , $-3\vec{C}$

Solution

$$2\vec{C} = 2(3, -1) = (6, -2)$$

$$\frac{1}{2}\vec{C} = \frac{1}{2}(3, -1) = \left(\frac{3}{2}, -\frac{1}{2}\right)$$

$$-3\vec{C} = -3(3, -1) = (-9, 3)$$

Example 9

If $\vec{A} = (3, -2)$, $\vec{B} = (4, 3)$ and $K = 3$, $L = -2$ then find

(1) $\vec{A} + \vec{B}$ (2) $K\vec{A}$ (3) $L\vec{B}$ (4) $K\vec{A} + L\vec{B}$

Solution :

(1) $\vec{A} + \vec{B} = (3 + 4, -2 + 3) = (7, 1)$

(2) $K\vec{A} = 3(3, -2) = (9, -6)$

(3) $L\vec{B} = -2(4, 3) = (-8, -6)$

(4) $K\vec{A} + L\vec{B} = (9, -6) + (-8, -6)$
 $= (1, -12)$

(5-4-4) The of vector multiplication by real numbe properties

(1) Distribution property For each \vec{A}, \vec{B} are vectors, K is real number

$$(\vec{A} + \vec{B})K = (\vec{A}K + \vec{B}K)$$

(2) Associative property: For each A vector and both $K, L \in \mathbb{R}$

$$\text{So } (K \times L)\vec{A} = K(L\vec{A}) = L(K\vec{A})$$

(3) Elimination property: For each A, B vector, $k \in \mathbb{R}$ where $k \neq 0$

If $k\vec{A} = k\vec{B}$ so that $\vec{A} = \vec{B}$ and vice versa

$$1 \times \vec{A} = \vec{A} \times 1 = \vec{A} \quad (4)$$

$$0 \times \vec{A} = \vec{A} \times 0 = 0 \quad (5)$$

[5-4-5] Subtraction of vectors :

Definition (5 - 7)

If \vec{A}, \vec{B} were a vectors so that $\vec{A} - \vec{B}$ can define as $\vec{A} + (-\vec{B})$

Example 10

If $\vec{A} = (3, 4)$, $\vec{B} = (-1, 3)$ find $\vec{A} - \vec{B}$

Solution

$$\vec{A} - \vec{B} = \vec{A} + (-\vec{B}) = (3, 4) + (1, -3) = (4, 1)$$

We can show that on the coordinate which means $\vec{A} - \vec{B}$ represent Parallelogram diameter for A and $-\vec{B}$ for negative vector B.

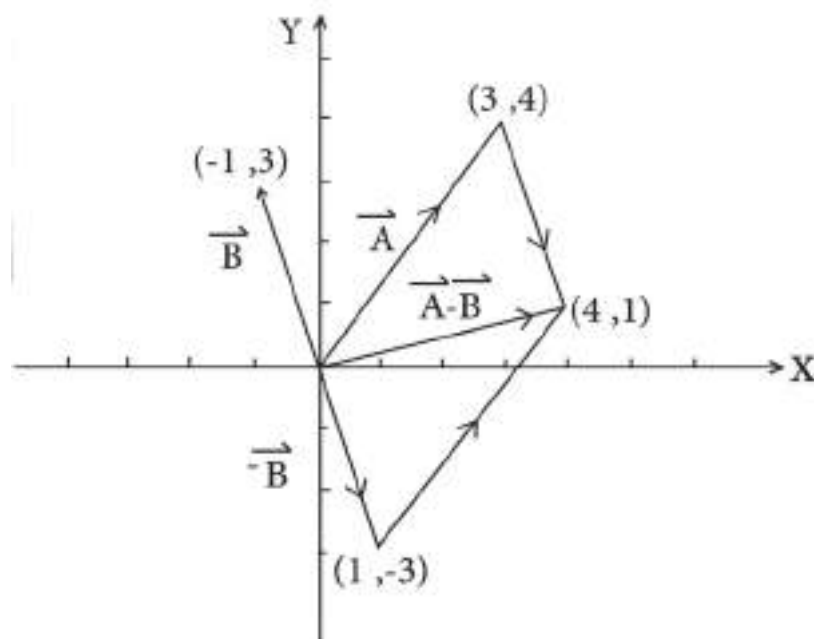


Figure (5 - 14)

Example 11

If $\vec{A} = (2, 3)$, $\vec{B} = (-2, -1)$, $K = 2$, $L = -1$ find

$$K\vec{A} - L\vec{B} \quad (2) \quad \vec{A} - \vec{B} \quad (1)$$

Solution :

$$\begin{aligned} (1) \quad \vec{A} - \vec{B} &= (2, 3) - (-2, -1) \\ &= (2, 3) + (2, 1) = (4, 4) \end{aligned}$$

Figure (5 - 15) shows that:

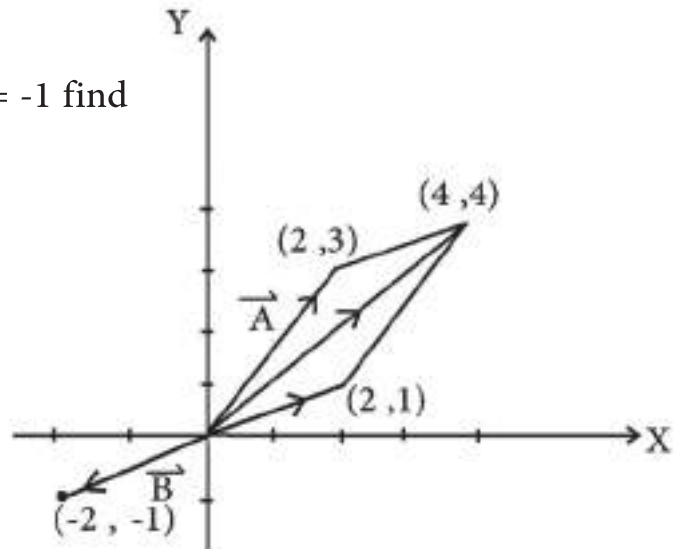


Figure (5 - 15)

$$\begin{aligned} (2) \quad K\vec{A} - L\vec{B} &= 2(2, 3) - (-1)(-2, -1) \\ &= (4, 6) + (-2, -1) \\ &= (2, 5) \end{aligned}$$

This is illustrated in the figure below:

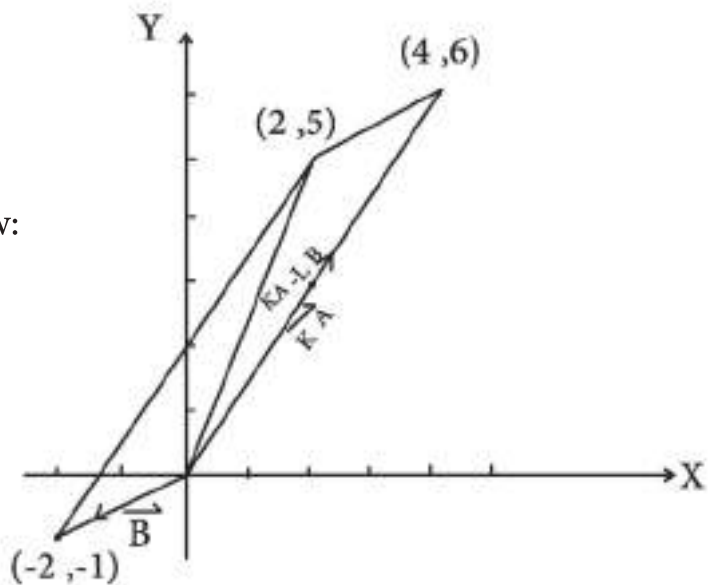


Figure (5- 16)

We draw \vec{A} then we extend it as long as we get $2\vec{A}$, then we draw and then find $-\vec{B}$ then $-1 \times -\vec{B} = \vec{B}$ we will return to \vec{B} again and $2\vec{A} + \vec{B}$ as we did in the previous example.

5-5 Giving the vector in terms of unity in the coordinate plane

[5 - 5 - 1] : Unit Vector

Definition (8 - 5)

(1) Unit vector \vec{U}_1 : Is the straight-pointed object whose beginning is the point of origin and the length of one unit and its direction is the positive direction of the X- axis \vec{U}_1 and symbolizes by $\vec{U}_1=(1,0)$

(2) Unit vector \vec{U}_2 : Is the straight-pointed object whose beginning is the point of origin and the length of one unit and its direction is the positive direction of the Y-axis \vec{U}_2 and symbolizes $\vec{U}_2=(0,1)$.

If $\vec{C} = (x, y)$ so $\vec{C} = (x, 0) + (0, y)$

$$\vec{C} = x(1, 0) + y(0, 1)$$

and this represents vector C in the terms of \vec{U}_1, \vec{U}_2 $\vec{C} = x\vec{U}_1 + y\vec{U}_2$

and we can write the vectors $(9, 0), (-3, 0), (0, -2), (0, 6)$ in terms of \vec{U}_1, \vec{U}_2

as following

$$(9,0) = 9\vec{U}_1, (-3, 0) = -3\vec{U}_1, (0, -2) = -2\vec{U}_2, (0, 6) = 6\vec{U}_2$$

Example 12

If $\vec{A} = (4, 7), \vec{B} = (-5, 3)$ find $\vec{A} + \vec{B}$ and show the result in the terms of Units Vector

Solution

$$\vec{A} + \vec{B} = (4, 7) + (-5, 3) = (-1, 10) = -(1, 0) + 10(0, 1) = -\vec{U}_1 + 10\vec{U}_2$$

Based on that we can write any vector by \vec{U}_1, \vec{U}_2 as the following examples:

$$(2, 5) = 2\vec{U}_1 + 5\vec{U}_2$$

$$(-4, 2) = -4\vec{U}_1 + 2\vec{U}_2$$

$$(-2, -3) = -2\vec{U}_1 - 3\vec{U}_2$$

if the vector written as two unit vectors we can find the order pair which represent it, example

$$\text{If } \vec{A} = 4\vec{U}_1 + 5\vec{U}_2, \text{ then } \vec{A} = (4, 5)$$

$$\vec{B} = -2\vec{U}_1 + 3\vec{U}_2 \text{ so } \vec{B} = (-2, 3) \text{ and soon.}$$

Example 13

$$\vec{A} + \vec{B} \text{ find } \vec{A} = \vec{U}_1 - 3\vec{U}_2, \vec{B} = 2\vec{U}_1 + \vec{U}_2 \text{ If}$$

Solution

$$\begin{aligned} \vec{A} + \vec{B} &= (\vec{U}_1 - 3\vec{U}_2) + (2\vec{U}_1 + \vec{U}_2) = \vec{U}_1(1+2) + \vec{U}_2(-3+1) = 3\vec{U}_1 - 2\vec{U}_2 \\ &= (3, -2) \end{aligned}$$

Example 14

If $\vec{A} = (5, -3)$ and $\vec{B} = (-3, 4)$ and $K = 2, L = 3$, find $K\vec{A} \cdot L\vec{B}$ then write it in the terms of unit vectors.

Solution

$$\begin{aligned} K\vec{A} \cdot L\vec{B} &= 2(5, -3) \cdot 3(-3, 4) \\ &= (10, -6) \cdot (9, -12) \\ &= (19, -18) \\ &= 19\vec{U}_1 - 18\vec{U}_2 \end{aligned}$$

Exercise (5 - 2)

Q1 /

Find the value the direction for each of the following with a graph

$$(-2, -2), (3, 0), \sqrt{3} \vec{U}_1 + \vec{U}_2, -\vec{U}_1 - 2\vec{U}_2$$

Q2 /

Simplify the following

$$4(1, -1), 2(1, -1), -7(1, 5), 3(2, -1) + 4(-1, 5), 7(3\vec{U}_1 + 2\vec{U}_2), -4(2\vec{U}_1 - \vec{U}_2)$$

Q3 /

Represent each of the following vectors in the terms of Units Vectors \vec{U}_1, \vec{U}_2

$$(3, 2), (-1, 4), (-3, -5), (0, -1), (5, 3), (2, 0)$$

Q4 /

if $\vec{E} = x, y$ where $x, y \in \mathbb{R}$ and \vec{A} is a vector so that

$$\vec{A} + \vec{E} = \vec{E} + \vec{A} = \vec{A} \text{ prove that } \vec{E} = (0, 0)$$

Q5 /

If $\vec{A} + \vec{B} = \vec{B} + \vec{A} = (0, 0)$ prove that $\vec{A} = -\vec{B}$

Q6 /

If $\vec{A} = (\sqrt{3}, 1), \vec{B} = (\sqrt{2}, \sqrt{3}), K = 3, L = -2$ then find each of the following

$$\begin{aligned} & K\vec{B}, L\vec{A}, \vec{A} + \vec{B}, K\vec{A} + \vec{B}, K\vec{A} - \vec{B}, K\vec{A} + L\vec{B} \\ & K\vec{A} - L\vec{B}, K(\vec{A} + \vec{B}), (L + K)\vec{A}, (L + K)(\vec{A} + \vec{B}), \\ & K(L\vec{A} + K\vec{B}), K L(\vec{A} - \vec{B}) \end{aligned}$$

Q7 /

Solve the question 6 by representing each of the vector in the terms of Unit Vectors \vec{U}_1, \vec{U}_2

Q8 /

Represent each of the vector in the terms of Unit Vectors \vec{U}_1, \vec{U}_2

A) the length 3 and direction $\frac{\pi}{3}$

B) the length 10 and direction $\frac{\pi}{6}$

C) the length 5 and direction $\frac{\pi}{4}$

D) the length $\frac{3}{4}$ and direction π

Q9 /

If $\vec{A} = (5, 2), \vec{B} = (2, -4)$ find x when $2\vec{A} + 3x = 5\vec{B}$

6

Chapter 6 : Analytical Geometry

- [6 - 1] Coordinate plane
- [6 -2] Distance Between Two Points
- [6 - 3] Coordinates of a partition point
- [6 - 4] Slope of The Line
- [6 - 5] Parallel Condition
- [6 - 6] Perpendicular Condition
- [6 - 7] Equation of The Line
- [6 - 8] The distance of a point from a given line

Aims and skills

At the end of this chapter the student will acknowledge:

- Learning the coordinate plane
- Finding distance between two points
- Finding the midpoint of line segment
- Finding of coordinates of a partition point
- Learning the first degree equation with two variables
- Learning the slope of the Line
- Finding a first degree equation with two variables
- Distinguish between the parallel and the perpendicular lines by their slopes
- Finding the distance of a point from a given line

<i>Terms</i>	<i>Symbol or Mathematical relations</i>
Distance Between Two Points	$L = \sqrt{(x_2 - x_1)^2 + (y_2 - y_1)^2}$
Coordinates of a partition point $\frac{n_1}{n_2}$	$(\frac{n_1 x_2 + n_2 x_1}{n_1 + n_2}, \frac{n_1 y_2 + n_2 y_1}{n_1 + n_2})$
Parallel Lines L_1, L_2	$\vec{L_1} // \vec{L_2} \iff m_1 = m_2$
Perpendicular Lines L_1, L_2	$\vec{L_1} \perp \vec{L_2} \iff m_1 \times m_2 = -1$
Equation of The Line	$ax + by + c = 0$
distance between a point and line	$D = \frac{ ax_1 + by_1 + c }{\sqrt{a^2 + b^2}}$

[6-1] Coordinate plane

If we draw two perpendicular lines \overleftrightarrow{OX} and \overleftrightarrow{OY} that cross each other at point (O) and we represented the real numbers with \mathbb{R} and we assumed that O represents the origin

Figure (6-1)1

By doing that we have constructed a coordinate plane, we call \overleftrightarrow{OX} the x-axis and \overleftrightarrow{OY} the y-axis. when we take any point in this plane, for example point A and we draw two lines, the first on the x-axis and the second on the y-axis to make points \overline{AB} , and \overline{AC} (see figure 6-1)

When we write $A(3,2)$ as an ordered pair of real numbers the x-axis comes first and the y-axis comes second. In this chapter we will assume that the x and y axis are perpendicular and that the length unit used in one of the axes is the same that it used in the other.

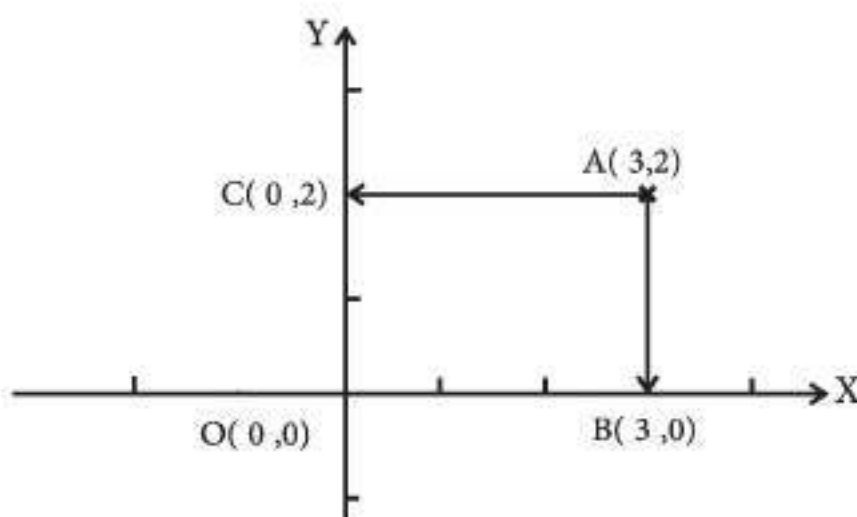


Figure (6-1)1

[6 -2] Distance Between Two Points

If we knew the coordinates of two points belonging to a plane ,the distance between can be calculated in the following way

let two points $A(x_1, y_1)$, $B(x_2, y_2)$

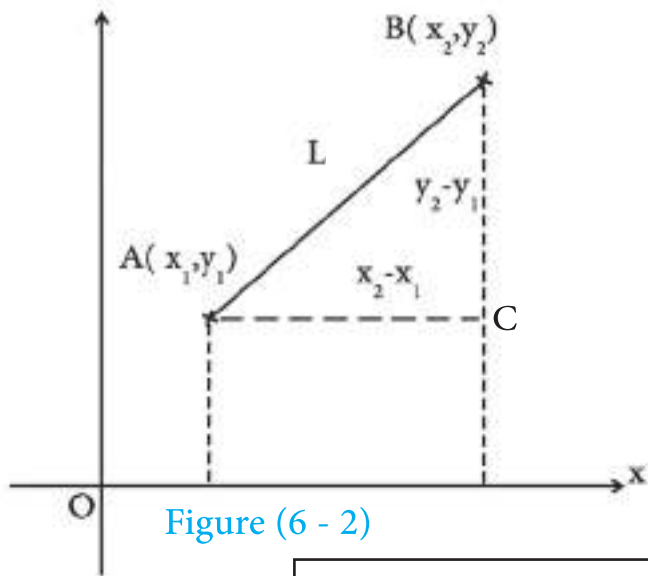


Figure (6 - 2)

ΔABC : is a right angle at C

$$L^2 = (AC)^2 + (BC)^2$$

$$L = \sqrt{(x_2 - x_1)^2 + (y_2 - y_1)^2}$$

distance between two points formula

Or by using the $\vec{AB} = \vec{B} - \vec{A}$ formula

$$\begin{aligned}\vec{AB} &= (x_2, y_2) - (x_1, y_1) \\ &= (x_2 - x_1, y_2 - y_1)\end{aligned}$$

Distance between two points $\|\vec{AB}\| = \sqrt{(x_2 - x_1)^2 + (y_2 - y_1)^2}$

Example 1 :

prove that the points $A(-2, 7)$, $B(-3, 4)$, $C(1, 16)$. belong to a same single straight line.

Solution :

First way :

$$\vec{AB} = \vec{B} - \vec{A} = (-3, 4) - (-2, 7) = (-1, -3)$$

$$\vec{AC} = \vec{C} - \vec{A} = (1, 16) - (-2, 7) = (3, 9) = -3(-1, -3)$$

$$\therefore \vec{AC} = -3\vec{AB}$$

\therefore points A,B,C belong to a same single straight line

Second way :

$$\sqrt{AB} = \sqrt{(-2 - 3)^2 + (\sqrt{7 - 4})^2} = \sqrt{1 + 9} = 10$$

$$\sqrt{BC} = \sqrt{(-3 - 1)^2 + (\sqrt{4 - 16})^2} = \sqrt{16 + 144} = \sqrt{160} = 4\sqrt{10}$$

$$\sqrt{AC} = \sqrt{(-2-1)^2 + (7-16)^2} = \sqrt{9+81} = \sqrt{90} = 3\sqrt{10}$$

$$BC = AB + AC$$

the points A,B,C must belong to a single straight line,because if they weren't they would have made a triangle and the sum of two sides would be bigger than .the third side

Example 2

prove that the triangle which has the following vertices A (1 , 1) , B (2 , 2) , C (5 , -1) is a right triangle.

Solution

$$AB = \sqrt{(2 - 1)^2 + (2-1)^2} = \sqrt{1+1} = \sqrt{2}$$

$$AC = \sqrt{(5 - 1)^2 + (-1-1)^2} = \sqrt{16+4} = \sqrt{20}$$

$$BC = \sqrt{(5 - 2)^2 + (-1-2)^2} = \sqrt{9+9} = \sqrt{18}$$

$$\therefore AC^2 = AB^2 + BC^2$$

$$(\sqrt{20})^2 = (\sqrt{2})^2 + (\sqrt{18})^2$$

ABC triangle is a right angle

\therefore at B

Example 3

prove that the points A(-3, -1) , B (1 , -4) , C (10, -5) , D (6 , -2)
represent the vertices of a parallelogram.

Solution

$$AB = \sqrt{(-3 - 1)^2 + (-1 + 4)^2} = \sqrt{16 + 9} = \sqrt{25} = 5$$

$$BC = \sqrt{(1 - 10)^2 + (-4 + 5)^2} = \sqrt{81 + 1} = \sqrt{82}$$

$$CD = \sqrt{(10 - 6)^2 + (-5 + 2)^2} = \sqrt{16 + 9} = \sqrt{25} = 5$$

$$AD = \sqrt{(6 + 3)^2 + (-2 + 1)^2} = \sqrt{81 + 1} = \sqrt{82}$$

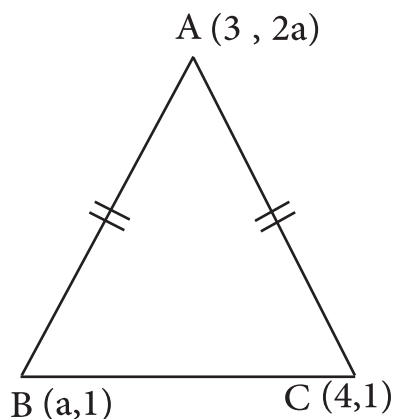
Where $AB=CD, BC=AD$

figure ABCD represents a parallelogram

Example 4

If the points C(4, 1) , B(a, 1) , A(3, 2a) are the heads of an isosceles triangle where $AB=AC$ find $a \in \mathbb{R}$

Solution



given $AB=AC$

$$\Rightarrow \sqrt{(3-a)^2 + (2a-1)^2} = \sqrt{(3-4)^2 + (2a-1)^2}$$

$$\Rightarrow (3-a)^2 + (2a-1)^2 = 1 + (2a-1)^2 \text{ squaring both sides}$$

$$\Rightarrow (3-a)^2 = 1 \text{ taking the square root of both sides}$$

$$\Rightarrow 3-a = \pm 1$$

$$: 3-a = 1 \Rightarrow a = 2$$

$$\text{or: } 3-a = -1 \Rightarrow a = 4$$

neglected(find out why)



Exercises (6-1)

Q1 /

Find the distance between every pair of the following points

A) $(4, 3)$, $(0, 0)$.

B) $(4, 6)$, $(2, 1)$.

C) $(5, -3)$, $(-1, 5)$

D) $(-2, 3)$, $(-1, 4)$.

Q2 /

Find the area of the triangle that's heads are on the points

A $(5, 7)$, B $(1, 10)$, C $(-3, -8)$.

Q3 /

the vertices of a square shape are A $(4, -3)$, B $(7, 10)$, C $(-8, 2)$, D $(-1, -5)$

find the length of its diameter.

Q4 /

prove that the points. A $(-2, 5)$,B $(3, 3)$,C $(-4, 2)$ are the vertices of a parallelogram.

Q5 /

If the points A $(2, 3)$, B $(-1, -1)$, C $(3, -4)$ are three vertices of a parallelogram ABCD

Find the coordinates of D.

Q6 /

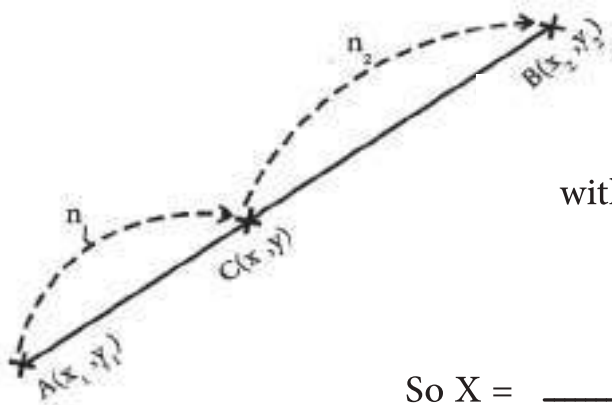
prove that the triangle that has the vertices A $(2, 3)$, B $(-1, -1)$, C $(3, -4)$ is an isosceles triangle.

Q7 /

Prove that the points $(-3, -4)$, $(6, 8)$, $(0, 0)$ are on a single straight line.

[6-3] Coordinates of a partition point

Partition of a line segment is used to find the coordinates of a point that is located between two points in a given ration.



$$A = (x_1, y_1), B = (x_2, y_2)$$

It is wanted to find C that divides \overline{AB}

with a ration of $n_1 : n_2$ so, we say $C = (x, y)$

$$\frac{AC}{CB} = \frac{n_1}{n_2}$$

$$\text{So } X = \frac{n_1 x_2 + n_2 x_1}{n_1 + n_2} \quad \text{also } Y = \frac{n_1 y_2 + n_2 y_1}{n_1 + n_2}$$

$$\text{Partition point } C \left(\frac{n_1 x_2 + n_2 x_1}{n_1 + n_2}, \frac{n_1 y_2 + n_2 y_1}{n_1 + n_2} \right)$$

Example 4 :

Find the coordinates of the point that divides the line segment that connect the points $A(4, -3)$, $B(-5, 0)$ with a ratio of $\frac{1}{2}$

Solution 4 :

$$x = \frac{n_1 x_2 + n_2 x_1}{n_1 + n_2} = \frac{1(-5) + 2(4)}{1 + 2} = \frac{-5 + 8}{3} = 1$$

$$y = \frac{n_1 y_2 + n_2 y_1}{n_1 + n_2} = \frac{1(0) + 2(-3)}{1 + 2} = \frac{-6}{3} = -2$$

\therefore coordinates of partition point(1,-2)

Mid point of Line Segment:

We assume that M is the partition point of line segment AB



Where as $A(x_1, y_1)$, $B(x_2, y_2)$

So $M(\text{mid point}) = \left(\frac{x_1 + x_2}{2}, \frac{y_1 + y_2}{2} \right)$

And to prove we have to make $n_1 = n_2$ and substitute it in the previous law.

Example 5

If point C was in the middle of \overline{AB} where $A(-3, 2)$, $B(7, -8)$,

find the coordinates of point C.

Solution

$$\begin{aligned} C &= \left(\frac{x_1 + x_2}{2}, \frac{y_1 + y_2}{2} \right) \\ &= \left(\frac{-3 + 7}{2}, \frac{2 + (-8)}{2} \right) \end{aligned}$$

$$C = (2, -3)$$

Summary

Point C(x,y) divides the line segment which connect points A(x₁,y₁), B(x₂,y₂) with the ratio

$$\frac{n_1}{n_2} \text{ is : } C\left(\frac{n_1 x_2 + n_2 x_1}{n_1 + n_2}, \frac{n_1 y_2 + n_2 y_1}{n_1 + n_2}\right)$$

Coordinates of the mid points are $\left(\frac{x_1 + x_2}{2}, \frac{y_1 + y_2}{2} \right)$



Exercises (6-2)

Q1 /

Find the coordinates of the point that divides the line segment AB where A (1 , 3) , B (4 , 6) with a ratio of $\frac{2}{1}$

Q2 /

Find the coordinates of the point that halves the line segment AB where A (2 , -4) , B (-3 , -6)

Q3 /

Find the coordinates of point C that divides the line segment AB with a ratio of $\frac{5}{3}$ where A (2 , 1) , B (1 , -3)

Q4 /

Find the coordinates of point C which is 3 times as far from as it is from B where B (4 , -4) , A(2 , 6)

Q5 /

Find the coordinates of the mid-points of the sides of triangle A B C where: A(4 , 0) , B (5 , 2) , C (2 , -3) then find the lengths of the lines connecting from the heads of the triangle to the mid-points on the opposite side.

Q6 /

Show that the diameters of the tetragonal shape with the vertices (-5,-8),(-3,-3),(3,-1),(-1,-2) halve each other.

[6 - 4] Slope of The Line

Definition (6-1)

If $A(x_1, y_1), B(x_2, y_2)$ then

$$\text{Slope of the line } AB = \frac{y_2 - y_1}{x_2 - x_1}, x_1 \neq x_2$$

Note:

1) $y_2 - y_1 = 0$ then the slope of \overleftrightarrow{AB} is zero

Which means that $\overleftrightarrow{AB} \parallel$ to the X-axis.

The slope of the X-axis = slope of the line parallel to it = 0

2) If the slope of $x_2 - x_1 = 0$ then the slope of \overleftrightarrow{AB} is undefined

meaning that the slope of the Y-axis = the slope of the line parallel to it and it is undefined.

3) If Q is the measure of the positive angle that \overleftrightarrow{AB} makes

with the positive direction for the X-axis then the slope

of \overleftrightarrow{AB} is equal to $\tan Q$ where Q belongs to $[0, 180) \setminus \{90\}$

Example 6

Find the slope of the line passing through the two points $A(2, 3)$, $B(5, 1)$.

Solution

$$m_{\overleftrightarrow{AB}} = \frac{y_2 - y_1}{x_2 - x_1} = \frac{1 - 3}{5 - 2} = \frac{-2}{3}$$

[6 - 5] Parallel Condition

Two parallel lines have the same slope meaning $\overleftrightarrow{L} = \overleftrightarrow{L}$ if and only if $m_1 = m_2$.

Example 7

Prove that points A(4,3),B(2,1),C(1,0) belong to a same line.

Solution

$$m_{\overline{AB}} = \frac{1 - 3}{2 - 4} = \frac{-2}{-2} = 1$$

$$m_{\overline{BC}} = \frac{0 - 3}{1 - 2} = \frac{-3}{-1} = 3$$

$$m_{\overline{AB}} = m_{\overline{BC}} \therefore$$

C, B, A belong to a same line \therefore

[6 - 6] Perpendicular Condition

If two lines are perpendicular then their slope product is equal to -1 as $\overleftrightarrow{L_1} \perp \overleftrightarrow{L_2}$ if and only if $-1 = m_1 \times m_2$

or $m_1 = \frac{-1}{m_2}$ which means that the slope of one of them is equal to the inverse of the other one by inverting the sign, for example if the slope of a

line was equal to $\frac{-3}{4}$, then the slope of any line parallel to it will be equal to $\frac{-3}{4}$

and the slope of any line perpendicular on it will be $\frac{4}{3}$

Example 8

By using slope prove that the triangle which has the vertices $A(3, -1)$, $B(10, 4)$, $C(5, 11)$ is a right angle triangle in B .

Solution

$$m_{\overline{AB}} = \frac{4 - (-1)}{10 - 3} = \frac{5}{7}, \quad m_{\overline{BC}} = \frac{11 - 4}{5 - 10} = \frac{7}{-5}$$

$$\therefore m_{\overline{AB}} \times m_{\overline{BC}} = \frac{5}{7} \times \frac{7}{-5} = -1$$

$$\therefore \overline{AB} \perp \overline{BC}$$

$$\therefore \Delta ABC \text{ right angle in } B.$$

Example 9

If the points $A(0, b)$, $B(-1, 2)$, $C(-2, b-4)$ are in a straightness then find the value of $b \in \mathbb{R}$.

Solution

Note

$$m \Rightarrow \frac{\Delta y}{\Delta x}$$


$\therefore A, B, C$ On a straightness

$$\Rightarrow m_{\overline{AB}} = m_{\overline{BC}}$$

$$\Rightarrow \frac{2-b}{-1-0} = \frac{(b-4)-2}{-2+1}$$

$$\frac{2-b}{-1} = \frac{b-6}{-1} \Rightarrow 2-b = b-6$$

$$\Rightarrow b = 4$$



Exercise (6 - 3)

Q1 /

- (1) Find the slope of the line passing through points $(0, -2)$, $(2, 0)$
- (2) Prove that the points $(2, 3), (-1, 4), (-7, 6)$ are on one straight line
- (3) If points $A(2, 3)$, $(-3, h)$ find the value of h if $m \overline{AB} = \frac{1}{2}$
- (4) ABC is a triangle, it's vertices are $A(1, 6)$, $B(-2, -8)$, $C(7, -2)$ find the slope of the middle line for the triangle passing through B

Q2 /

For each of the following questions there are four answers, only one of them is right, choose the right answer:

- 1) If $\overleftrightarrow{H} \perp \overleftrightarrow{L}$, \overleftrightarrow{H} passes through points $(1, 5), (2, 3)$ the slope of L equals
 A) $-\frac{2}{3}$ B) $\frac{2}{3}$ C) 2 D) $-\frac{1}{2}$
- 2) If $\overleftrightarrow{H} \parallel \overleftrightarrow{L}$, \overleftrightarrow{H} passes through points $(-3, 2), (3, -2)$ the slope of \overleftrightarrow{L} is equal to
 A) $-\frac{2}{3}$ B) $\frac{2}{3}$ C) $-\frac{3}{2}$ D) $\frac{3}{2}$
- 3) If the line $\overleftrightarrow{H} \in (3, 4) , (x, 6)$ and $\overleftrightarrow{H} \parallel \overleftrightarrow{L}$, $\overleftrightarrow{L} \in (-1, 3), (-1, 5)$ then the value of x is A) -3 B) 3 C) 1 D) none of the above

Q3 /

- 1) By using the slope prove that the points $A(5,2)$, $B(2,1)$, $C(1,-2)$ are the vertices of a triangle.
- 2) Let $A(-1,5)$, $B(5,1)$, $C(6,-2)$, $D(0,2)$ prove that the figure $ABCD$ is a parallelogram.
- 3) Let $A(5,2)$, $B(2,-1)$, $C(-1,2)$, $D(2,5)$ prove that figure $ABCD$ is a square.
- 4) ABC is a triangle its vertices are on points $A(2,4)$, $B(6,0)$, $C(-2,-3)$ find:
 - A) Slope of the line drawn from A to \overline{BC} .
 - B) The slope of the line drawn from B and parallel to \overline{AC} .
- 5) Prove that the quadrilateral shape with the vertices $A(-2,2)$, $B(2,2)$, $C(4,2)$, $D(2,4)$ is a trapezoid.
- 6) Find the value of x that makes the line passing through points $(x,4)$, $(-2,-9)$, perpendicular on the line passing through points $(4,1)$, $(0,-3)$.

[6-7] Equation of The Line

If (x,y) is any point on any line then the relation between x and y is called the equation of the line

The standard equation of the line is $ax + by + c = 0$

we can graphically represent the line intersecting both axis by making $x=0$

$$\therefore y = \frac{-c}{b}$$

$$y = 0 \implies x = \frac{-c}{a}$$

1) When $b=0$, $ax+c=0$ represents the equation of the line parallel to the Y axis and when $x=0$ it represents the equation of the Y axis

2) When $a=0$, $by+c$ will represent the equation of the line parallel to the X axis and $y=0$ represents the equation of the X axis

3) When $c=0$, $ax+by=0$ represents the equation of a line passing through the origin point

How to find the equation of line

1. If you know two points

the equation of the line where $A(x_1, y_1)$, $B(x_2, y_2)$

Let $C(x,y) \in \overleftrightarrow{AB}$ so the equation will be

The formula for finding the equation of the line for 2 points

$\frac{y - y_1}{x - x_1} = \frac{y_2 - y_1}{x_2 - x_1}$

If you knew one point and the slope

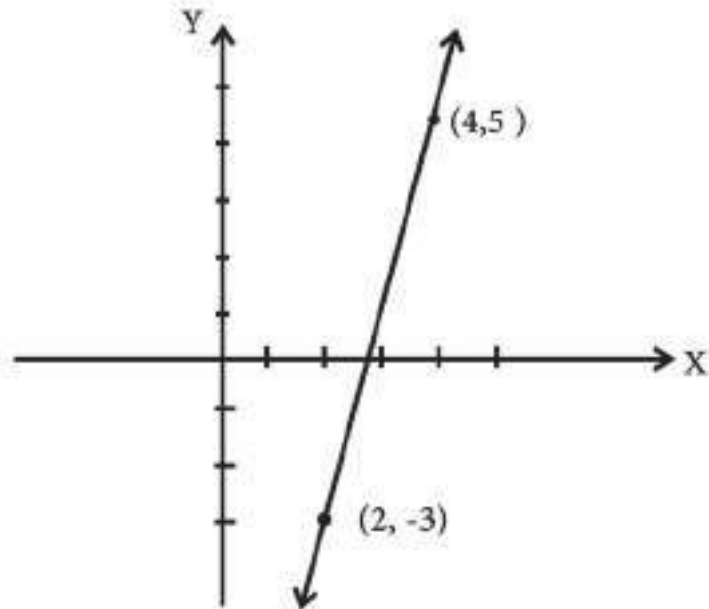
From the previous formula $m = \frac{y_2 - y_1}{x_2 - x_1}$

Formula of finding the equation using a point and slope $y - y_1 = m(x - x_1)$

Example 9

Find the equation of the line passing through points (2, -3), (4, 5).

Solution



$$\frac{y - y_1}{x - x_1} = \frac{y_2 - y_1}{x_2 - x_1}$$

$$\frac{y + 3}{x - 2} = \frac{5 + 3}{4 - 2}$$

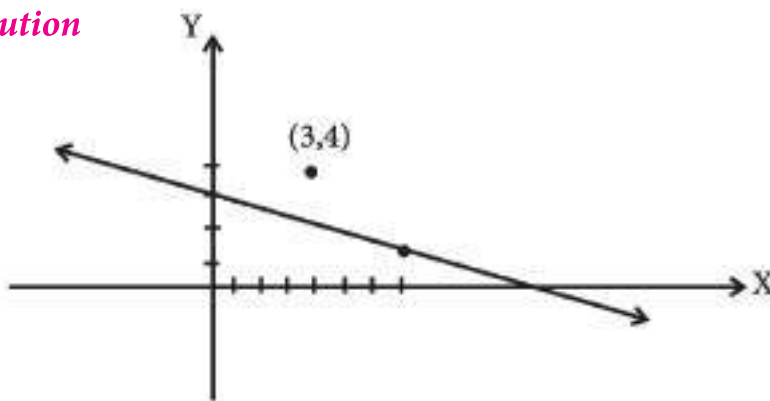
$$\frac{y + 3}{x - 2} = \frac{4}{1}$$
$$y + 3 = 4x - 8$$

$\therefore 4x - y - 11 = 0$ equation of the line .

Example 10

Find the equation of the line passing through points (7,1), (0,3) and does the point (3,4) belongs to it?

Solution



$$\frac{y - 1}{x - 7} = \frac{3 - 1}{0 - 7}$$

Equation of the line $2x + 7y - 21 = 0$

To make sure that point (3,4) belongs to the line, we have to substitute $x=3$, $y=4$ in the line equation.

$$2(3) + 7(4) - 21 = 0$$

$$6 + 28 - 21 = 0$$

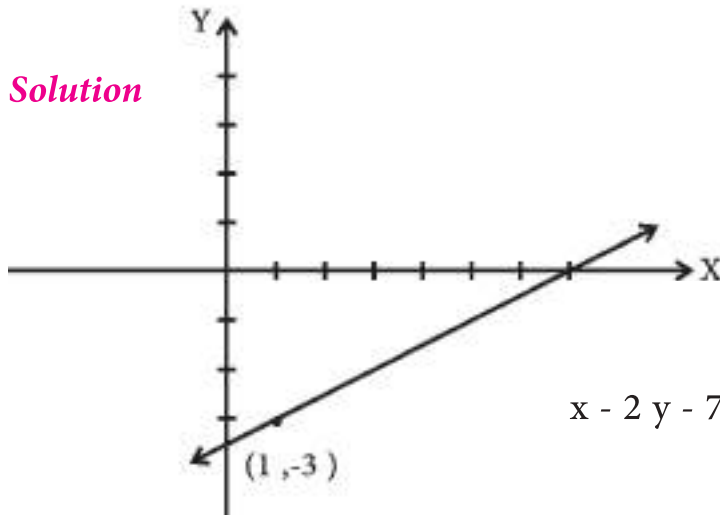
$$\therefore 0 \neq 13$$

\therefore Point (3,4) does not belong to the line

Example 11

Find the equation of the line passing through point (1,-3) and with a slope of $\frac{1}{2}$.

Solution



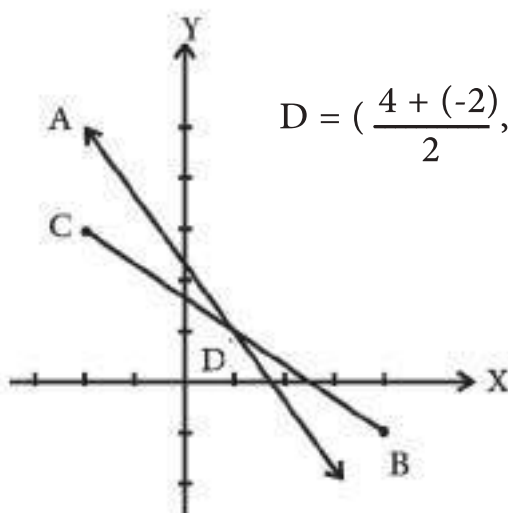
$$y - y_1 = m (x - x_1)$$

$$x - 2y - 7 = 0 \dots\dots\dots \text{equation of the line}$$

Example 12

Find the equation of the line passing through point A(1,-3) and the mid point of the line that's ends are at points B(4,-1), C(-2,3)

Solution:



$$D = \left(\frac{4 + (-2)}{2}, \frac{-1 + 3}{2} \right) = (1, 1) \Leftarrow \text{Let D be the mid-point of } \overline{BC}$$

$$\frac{y - 5}{x + 2} = \frac{1 - 5}{1 + 2} : \text{The equation of } \overleftrightarrow{AD} \text{ is}$$

$$3y - 15 = -4x - 8 \quad \therefore$$

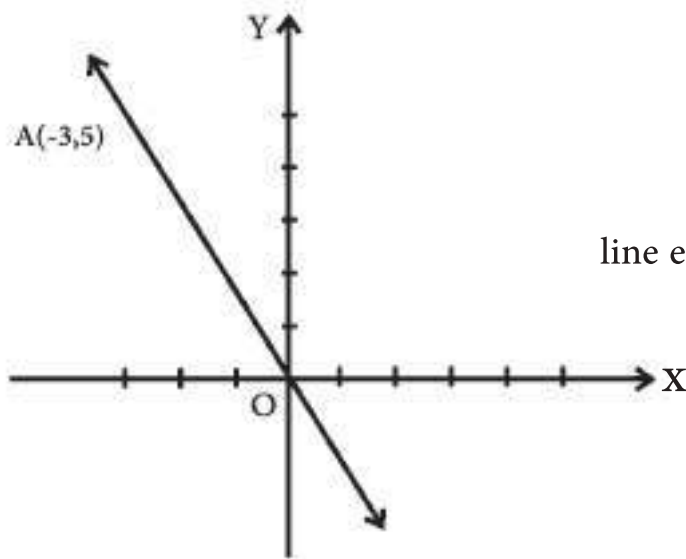
$$\text{Line equation } \dots\dots\dots 4x + 3y - 7 = 0$$

Example 13

Find the line equation for the line passing through

the origin point and point $(-3,5)$

Solution



. $O(0,0)$, $A(-3,5)$

$$\text{line equation is } \frac{y - 0}{x - 0} = \frac{5 - 0}{-3 - 0}$$

$$\frac{y}{x} = \frac{5}{-3}$$

equation of the line $5x + 3y = 0$

Conclusion:

We can find the slope of the line from its equation:

we assume that $ax + by + c = 0$

\therefore Slope of the line = $-\frac{\text{coefficient of } a}{\text{coefficient of } b}$ by inverting the sign by having x, y on only one side of the equation

and $b \neq 0$

The slope of the line = $-\frac{\text{coefficient of } x}{\text{coefficient of } y}$

So, the slope of the line $\frac{-a}{b}$

Example 14

Find the the slope and the Y axis of the line that's equation:

$$3x - 4y - 12 = 0$$

Solution

$$m = \frac{-a}{b} = \frac{-3}{-4} = \frac{3}{4}$$

$$\text{so we get : } -4y - 12 = 0 \implies y = -3$$

Example 15

Find the equation of the line that makes an angle 150 with the positive side of the X axis and passes through point (-4, 1).

Solution

The slope of the line

$$m = \tan 150^\circ$$

$$= \tan (180^\circ - 30^\circ)$$

$$= -\tan 30^\circ$$

$$\therefore y - y_1 = m (x - x_1)$$

$$\therefore y + 4 = \frac{-1}{\sqrt{3}} (x - 1)$$

$$x + \sqrt{3}y + 4\sqrt{3} - 1 = 0 \dots\dots\dots \text{the line of the equation.}$$

Example 13

Find the equation of the line that passes through point $(-2,1)$ and is perpendicular to the line that's equation is $2x - 3y - 7 = 0$

Solution

From the line $2x - 3y - 7 = 0$

The slope of the line $m = \frac{-a}{b} = \frac{-2}{-3} = \frac{2}{3}$

the slope of the required line $= \frac{-3}{2}$ (because it's perpendicular to it)

$$y - y_1 = m (x - x_1)$$

$$y - 1 = \frac{-3}{2} (x + 2)$$

$3x + 2y + 4 = 0$ the equation of the required line

Summary

- 1) The slope of the line passing through points $(x_1, y_1), (x_2, y_2)$ is $m = \frac{y_2 - y_1}{x_2 - x_1}$
- 2) The slope of the line $ax + by + c = 0$ is $m = \frac{-a}{b}$
- 3) The slope of the line that makes the angle θ with the X axis is $m = \tan \theta$
- 4) The slope of the line passing through points $(x_1, y_1), (x_2, y_2)$ is $\frac{y - y_1}{x - x_1} = \frac{y_2 - y_1}{x_2 - x_1}$
- 5) The equation of the line passing through point (x_1, y_1) m is the slope
 $y - y_1 = m(x - x_1)$



Exercises (6-4)

Q1 /

1. Find the equation of the line with $m = \frac{1}{2}$ and passes through (0,-4)
2. Find the equation of the line that is parallel to the X axis and passing through point (2,-1)
3. Find the equation of the line parallel to the Y axis and passing through point (2,-1).
4. Find the equation of the line passing through points(-1,3), (5,-1)
5. Find the equation of the line L passing through point (2,-1) and parallel to L_1 which has the slope of $\frac{2}{3}$
6. Find the equation of the line passing through point (0,-2) which is perpendicular on the line that has a slope of $\frac{-3}{5}$
7. Find the line equation passing through point (3,-4) and perpendicular to the line passing through points(2,-2),(0,3)
8. Let A(4,-2), B(1,2) find the equation of the line that bisects \overline{AB}

Q2 /

1. Find the equation of the line that has the slope of -3 and splits a positive part of the Y axis that length is 7 units
2. Find the equation of the line that has a slope of 2 and splits a negative part of the X axis that's length is 6 units.
3. Find the slope and the dissected part of the Y axis for the following lines:
A. $\overleftrightarrow{L1}: 2x-3y+5=0$
B. $\overleftrightarrow{L2}: 8y = 4x + 16$
C. $\overleftrightarrow{L3}: 3y = -4$
4. Find the equation of the line passing through points (2,-5) and parallel to the line that has the equation: $2x-y+3=0$

5. Find the equation of line L that bisects a negative part of the Y axis and its length is 4 units and perpendicular on the line that has the equation $2y = 4x - 1$

6. Let \overleftrightarrow{L} be a line, its equation is: $x + y - 2 = 0$ Find its slope and its intersection point with the Y-axis then draw \overleftrightarrow{L}

7. Find the equation of the line L passing through point (2,-2) and perpendicular on the line that has an equation $x + y = 0$ then find the intersection point of L with the other two axes

8. The line $\overleftrightarrow{L} : 2x - y = 3$ and the line $\overleftrightarrow{H} : 3x + 6x = -3$

A. Prove that $\overleftrightarrow{L} \perp \overleftrightarrow{H}$

B. Find algebraically the intersection point of L , H.

9. Find the equation of the line that makes 135 with the positive side of the X axis and that is passing through the origin point.

10. The line $L : 27 = ax + 1$ passes through point (1,2), find:

A. The value of

B. The slope of the line L

C. Its Y intercept.

[6-8] The distance of a point from a given line

Definition 6-2

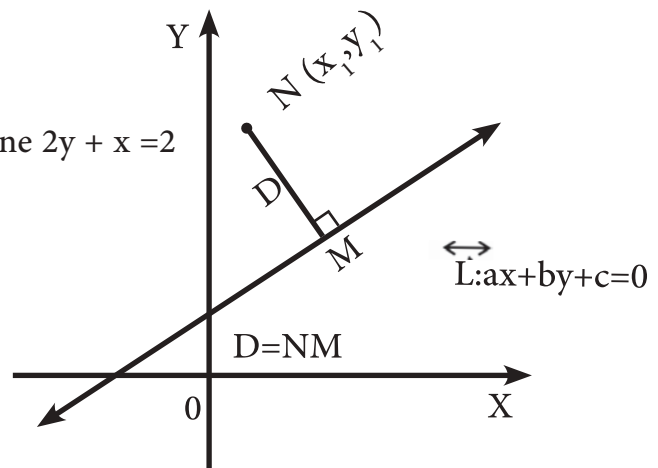
If the line $L : ax + by + c = 0$

and point $N(x, y)$ is known, then the distance from point N on line L as the vertical distance D between point N and line L and it is given in the following equation.

$$D = \frac{|ax_1 + by_1 + c|}{\sqrt{a^2 + b^2}}$$

Example 17

Find the distance from point $A(1,3)$ to the line $2y + x = 2$



Solution

We put the equation in the following way $x + 2y - 2 = 0$,

$$a=1, b=2, c=-2$$

$$= \frac{|ax_1 + by_1 + c|}{\sqrt{a^2 + b^2}} = \frac{|(1)(1) + (2)(3) - 2|}{\sqrt{(1)^2 + (2)^2}}$$

$$D = \frac{5}{\sqrt{5}} = \sqrt{5} \text{ unit}$$

We can find the distance between two parallel points

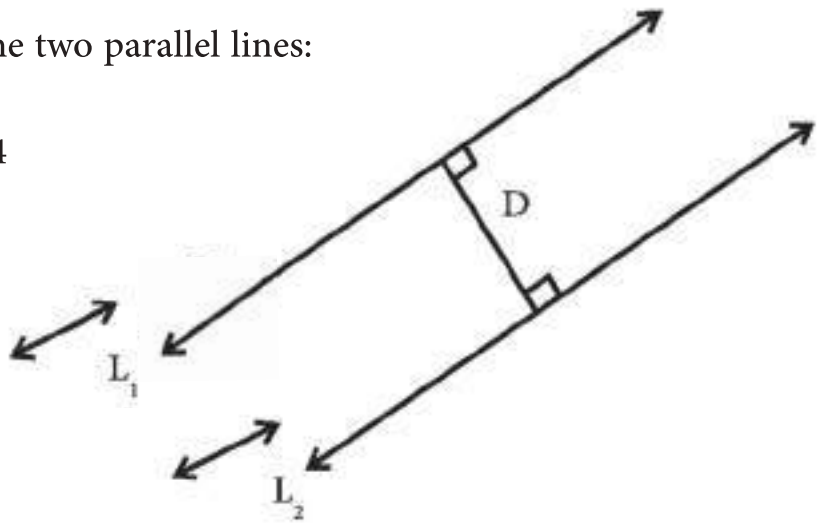
$$\overleftrightarrow{L_1}: a_1x + b_1y + c_1 = 0, \overleftrightarrow{L_2}: a_2x + b_2y + c_2 = 0$$

$$\text{Distance between } \overleftrightarrow{L_1} \text{ \& } \overleftrightarrow{L_2} = \frac{|C_2 - C_1|}{\sqrt{a^2 + b^2}}$$

Example 18

Find the distance between the two parallel lines:

$$\Leftrightarrow L_1: x - 3y = 1, L_2: x - 3y = 4$$



Solution

The distance between two parallel lines is the distance between any point belonging to a line and the other line.

As in $L_1: y = 0 \Rightarrow x = 1$

\therefore Point (1,0)

$$\therefore D = \frac{|a x_1 + b y_1 + c|}{\sqrt{a^2 + b^2}}$$

$$\therefore D = \frac{|(1)(1) - 3(0) - 4|}{\sqrt{1 + 9}} = \frac{3}{\sqrt{10}}$$

Another solution according to the previous conclusion:

$$D = \frac{|4-1|}{\sqrt{1+9}} = \frac{3}{\sqrt{10}}$$

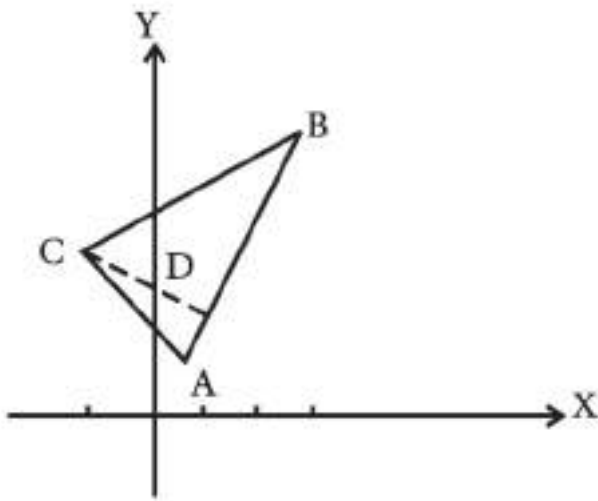
Example 19

Find the area of the triangle that's vertices are on points (1,2) , B (3 ,5) , C (1 ,3)

Solution

We find the equation of one of the triangle's

sides and let the line AB be:



$$\frac{y - y_1}{x - x_1} = \frac{y_2 - y_1}{x_2 - x_1}$$
$$\frac{y - 2}{x - 1} = \frac{5 - 2}{3 - 1} \Rightarrow \frac{y - 2}{x - 1} = \frac{3}{2}$$
$$\therefore 3x - 2y + 1 = 0$$

And now the distance between point C(-1,3) from line AB represents the height

of ΔABC

$$D = \frac{|3(-1) - 2(3) + 1|}{\sqrt{9 + 4}} = \frac{8}{\sqrt{13}} \text{ unit}$$

$$AB = \sqrt{(3-1)^2 + (5-2)^2} = \sqrt{4 + 9} = \sqrt{13}$$

$$\begin{aligned} \text{Area } \Delta &= \frac{1}{2} (AB) \cdot D \\ &= \frac{1}{2} \times (\sqrt{13}) \cdot \frac{8}{\sqrt{13}} = 4 \text{ unit}^2 \end{aligned}$$



Exercises (6-5)

Q1 /

Write T in front of the right sentences and F in front of the false sentences from the following

1. The distance between the origin point and line: $y = 3$ is 3 units
2. The distance between the origin point and line: $y = -5$ is 5 units
3. The distance between the origin point and line $x = -5$ is 5 units
4. The distance between the two parallel lines $y = 4$ and $y = -1$ is 3 units

Q2 /

1. Find the distance between point $(-2, 1)$ and line $6x + 8y - 21 = 0$
2. Find the distance between the origin point and the line that has the slope of $m = \frac{1}{3}$ and passes through a positive side of the x-axis that's length is 4 units
3. Find the distance between the two parallel lines:

$$\overleftrightarrow{L1}: 8x - 6y + 4 = 0$$

$$\overleftrightarrow{L2}: 4x - 3y - 1 = 0$$

4. Find the distance between point $(0, -2)$ and the line that passes through points A $(1, -1)$, B $(3, 5)$.

5. Find the area of the triangle ABC where A $(-4, 6)$, B $(-3, -1)$, C $(5, -2)$

7

Chapter 7 : Statistics

- [7 - 1] Measures of Central Tendency
- [7 -2] Arithmetic Mean
- [7 - 3] Median
- [7 - 4] Mode
- [7 - 5] Measures of Variation

Aims and skills

At the end of this chapter the student will acknowledge:

- Learning Arithmetic Mean
- Finding Arithmetic Mean
- Learning Median
- Finding Median
- Learning Mode
- Finding Mode
- Learning Standard Variation
- Finding Standard Variation
- Learning Correlation coefficient
- Finding Correlation coefficient

<i>Terms</i>	<i>Symbol or Mathematical relations</i>
Mean	\bar{X}
Median	ME
Mode	MO
Rang	R
Standard Variation	S
Correlation coefficient	r

[7 - 1] Measures of Central Tendency

We took in the previous studies ways of gathering data and present them graphically and tabularly, and now we want to find a scale that is more representative of the study subject, meaning that we want to get one value representing all the other values. The average income in a country represents all the incomes in a country meaning that it represents the general level of the income in that country and one of the characteristics of data, is that it has a tendency to concentrate on a single average value and these values that the data concentrates on are called medians or the measures of central tendency

And we will take the most important measures of central tendency with a little more details after you have taken them in your middle school studies. here are the subjects we are going to learn values of central tendency

-Arithmetic mean

-Median

-Mode

And these three differ from each other from the idea and their method of calculation and each one of them has it's specialties and has it's flaws. There are some cases where we use one of the measurements and not the other.

[7 - 2] Arithmetic Mean

Definition (7 - 1)

The arithmetic mean of a set of numbers is defined as the value that, if replaced with any of the other values in the set, the sum of the new set would be equal to the sum of the original set.

And so the arithmetic mean is equal to the sum of the values divided by their number.

Calculation Method:

First way

1) If the statistics (data) are unclassified:

Arithmetic mean = $\frac{\text{sum of the values}}{\text{their number}}$

Meaning that : $\bar{X} = \frac{X_1 + X_2 + X_3 + \dots + X_n}{n}$

Example 1

If the ages of 5 people are: 5, 8, 9, 11, 12. Find the arithmetic mean of their ages.

Solution

$$\bar{X} = \frac{X_1 + X_2 + X_3 + \dots + X_n}{n} = \frac{12 + 11 + 9 + 8 + 5}{5} = \frac{45}{5} = 9 \text{ Years}$$

2) If the statistics (data) are classified:

If the statistical values are classified in a repeating order, the following formula can be used:

$$\text{Arithmetic mean} = \frac{\text{The sum of the products of every group and the number of their repetition}}{\text{The number of repetitions}}$$

Example 2

Let's assume that there are (3) people aged 8, (5) people aged 9, (4) people aged 11, and two people aged 12 as in the following table:

Age	8	9	11	12
Number of People	3	5	4	2

(This table is without groups) so the number of (age) represents the group find the arithmetic mean of their ages.

Age (x)	frequency (f)	age x frequency (fx)
8	3	$8 \times 3 = 24$
9	5	$9 \times 5 = 45$
11	4	$11 \times 4 = 44$
12	2	$12 \times 2 = 24$
sum	14	137

Solution

We symbolized the age with x and the repetitions with f , the solution steps can be shown in the table

$$\bar{X} = \frac{x_1 f_1 + x_2 f_2 + x_3 f_3 + \dots + x_n f_n}{f_1 + f_2 + \dots + f_n}$$

$$\bar{X} = \frac{137}{14}$$

$$\therefore \bar{X} = \frac{24 + 45 + 44 + 24}{14}$$

$$= 9.786 \text{ years}$$

(arithmetic mean of age)

Example 3

The following table shows the distribution of 100 people according to their weight groups. It is wanted to find the arithmetic mean of their weights.

Weight Groups	30-	40-	50-	60-	70-	80-90	Sum
Number of People	9	15	22	25	18	11	100

Solution

The median of the first weight group : $35 = \frac{30 + 40}{2}$

The median of the second weight group $35 + 10 = 45$ and so on.

The solution steps are:

- 1- finding the medians of the groups.
- 2- multiply the median of group with its frequency .
- 3- find the mean

Weight Group	frequency	Centers	$F \times X$
30-	9	35	315
40-	15	45	675
50-	22	55	1210
60-	25	65	1625
70-	18	75	1350
80- 90	11	85	935
Sum	100		6110

$$\bar{X} = \frac{x_1 f_1 + x_2 f_2 + x_3 f_3 + \dots + x_n f_n}{f_1 + f_2 + \dots + f_n}$$

$$\bar{X} = \frac{6110}{100}$$

$$\bar{X} = 61.1 \text{ Kilogram}$$

Example

Find the mean of the following table :

Groups	8-	10-	12-	14-	16-	18-20	sum
frequency	5	15	20	10	6	4	60

Groups	frequency f	Centers	f × x
8-	5	9	45
10-	15	11	165
12-	20	13	260
14-	10	15	150
16-	6	17	102
18- 20	4	19	76
sum	60		798

Solution

$$\bar{X} = \frac{798}{60}$$

$$\bar{X} = 13.3$$

Arithmetic mean

Second Way

The hypothetical mean or the deviation :

This way counts on using one of the values (Centers) as a hypothetical mean then find the deviation of every group on that hypothetical mean and then we use the law:

The arithmetic mean=hypothetical mean + $\frac{\text{The sum (deviations of the medians times the frequency)}}{\text{Number of frequency}}$

$$\text{Hypothetical mean} = \bar{X}_0$$

$$\bar{X} = \bar{X}_0 + \frac{\sum f \cdot E}{\sum f}$$

$$\text{Number of frequency} = \sum f$$

$$E = X - \bar{X}_0, \text{ frequency of the group} = f$$

Example 5

The following table shows the ages of 100 university students. Find the arithmetic mean of the ages using the hypothetical mean.

Solution

ages	18	20	22	24	26	28-30	Sum
number of student	20	44	18	13	3	2	100

1 - We take the C enters of the groups

2 - We choose the hypothetical mean (\bar{X}) from the groups and let 21 that corresponds to the most repetitions

3 - We take the deviation of every median of the hypothetical mean (deviation = median of the group

hypotheticalmean $E = X - \bar{X}_0$

4 - We find the product of every group (f) X the deviation of its hypothetical mean

5 - We find the sum of the repetitions and the whole sum, we write the previous information in the table

Age Groups	Number of students Repetition f	Median of the group (X)	Deviation $E = X - \bar{X}_0$	f.E
18-	20	19	$19 - 21 = -2$	$20 \times -2 = -40$
20-	44	$21 = \bar{X}_0$	$21 - 21 = 0$	$44 \times 0 = 0$
22-	18	23	$23 - 21 = 2$	$18 \times 2 = 36$
24-	13	25	$25 - 21 = 4$	$13 \times 4 = 52$
26-	3	27	$27 - 21 = 6$	$3 \times 6 = 18$
28- 30	2	29	$29 - 21 = 8$	$2 \times 8 = 16$
Sum	100			82

$$\bar{X} = \bar{X}_0 + \frac{\sum f \cdot E}{\sum f}$$

$$\bar{X} = 21 + \frac{82}{100} = 21 + 0.82$$

$$\bar{X} = 21.82$$

The privileges and flaws of the Arithmetic mean:

Privileges

- 1) easy to calculate.
- 2) All the values are used in its calculations.

Flaws

- 1) It is affected by abnormal values and very small or very large values
- 2) It can't be calculated graphically

[7 - 3] Median

Definition (7-2)

The median of a group of values is the value that is in the middle of the group after ordering them ascendingly or descendingly so that the number of values smaller than it is equal to the number of values bigger than it.

How to find the median:

1) Unclassified statistics (data):

We order the values ascendingly or descendingly then we take the value that is in the middle for it to be the median.

Assuming that the number of values is odd.

But if the number of values is even then we take the two values that are in the middle, so that the median is equal to the sum of the two values divided by two.

Example 6

Find the median of the weights of some students that are :52 kg, 58 kg, 50 kg, 63 kg, 55, kg.

Solution

We order the numbers ascendingly: 50, 52, 55, 58, 63. we notice that the value that is in the middle is the third one in order

Median = 55

Example 7

Find the median of the following weights of some students: 52 kg, 58 kg, 50 kg, 63 kg, 57 kg, 55 kg.

Solution

We order the values ascendingly: 50, 52 , 55 , 57 , 58 , 63

We notice that there are two values in the middle that are 55, 57

The order of the first one = $\frac{n}{2} = \frac{6}{2} = 3$ (third)

The order of the second one = $\frac{n}{2} + 1 = 3 + 1 = 4$ (fourth)

Median = $\frac{\text{third} + \text{fourth}}{2} = \frac{57 + 55}{2} = 56$

2) Classified statistics (data):

The median can be found in classified data with groups: and the steps are as follows:

1) We make the table of the ascending combined repetitions from the repetitions table.

2) Calculation of the order of the median = $\frac{\text{Sum of the Frequency}}{2}$

3) Identifying the group that has the median from the ascending combined repetitions table and it is called the median group and it is the group that corresponds to the first bigger repetition or that is equal to the order of the median.

Median = $\frac{\text{The lowest possible median group} + \text{Order of the median} - \text{the ascending combined frequency of the group before the median}}{\text{The median group}} \times W$
 × W=length of the group

$$ME = L + \frac{\frac{\sum f}{2} - f_b}{f_m} \cdot W$$

where ME= The median, f_b = the ascending combined repetition of the group before the median,

f_m = the repetition of the median, W=length of the group, L=lowest possible value of the median

The ascending combined repetition	frequency of number of people	Weight Group
9	9	30-
24	15	40-
46	22	50-
71	25	60-
89	18	70-
100	11	80 - 90
	100	SUM

Example 8

Find the median of the weights in the table:

Solution

$$\text{The order of the median} = \frac{100}{2} = 50$$

$$\therefore \text{The median group} = (70 - 60)$$

$$ME = L + \frac{\frac{\sum f}{2} - f_b}{f_m} \cdot W$$

$$ME = 60 + \frac{50 - 46}{25} \times 10$$

$$= 60 + \frac{8}{5} \Rightarrow ME = 60 + 1.6 = 61.6$$

The privileges and the flaws of the median:

Privileges

- (1) It is not affected by abnormal and very large or very small values.
- (2) It can be calculated graphically.

Flaws

- (1) Not all the values are used in the calculation.
- (2) In case of the classified statistics with groups, it is solved by approxemitley.

[7.4] Mode

Definition (7 - 3)

The mode of a group is defined as the value that is most repeated and symbolized by MO

Calculating mode :

1) Unclassified statistics(data)

Example 9

What is the mode of the following set of number

A) 4, 2, 4, 7, 3, 4, 9, 7, 4

Solution

Mode= 4 because it is more repeated

B) 6, 5, 1, 8, 6, 5, 10, 18

Mode= 6, 5 because they are most repeated

C) 12, 11, 10, 7, 3, 4, 5, 8

Mode= No Mode

2) Classified statistics (data):

A) Differences way (pearson's way)

Mode = the lowest possible group mode + $\frac{d_1}{d_1 + d_2} \times$ The length of the group mode
Where d_1 = the frequency of the group mode - the repetition of the group before it

d_2 = the frequency of the group mode - the frequency of the group after it.

If the mode frequency is the biggest frequency of the table. and the group mode corresponding to the most frequency.

Example 10

Calculate the mode from the table:

Solution

	frequency	groups
	9	30-
	15	40-
Previous frequency →	22	50-
Mode frequency →	25	60-
Following frequency →	18	70-
	11	80-90

$$d_1 = 25 - 22 = 3$$

$$d_2 = 25 - 18 = 7$$

The length of group mode = 70-60 = 10

Mode = The lowest possible group mode + $\frac{d_1}{d_1 + d_2} \times$ The length of the group

$$\text{Mode} = 60 + \frac{3}{3 + 7} \times 10$$

$$\text{Mode} = 60 + 3$$

$$\text{Mode} = 63$$

B) The Method of Moments

1) In this way we draw a lever and we make the frequency of the mode group a force acting on one of the ends of the lever, and the frequency of the group after the mode group a force acting on the other end of the lever and the length of the lever = the length of the group

1) We assume that the fixed point that represents the distance of the mode from one of the ends = x

3) We apply the lever formula (force \times it's spindle = the resistance \times it's spindle).

4) We take the value of x and add it to the lowest value of the mode group and we will get the mode.

Example 11

Find the mode from the following table:

groups	40-	50-	60-	70-	80-	90-100
frequency	6	38	59	37	8	2

Solution

Mode = 70-60

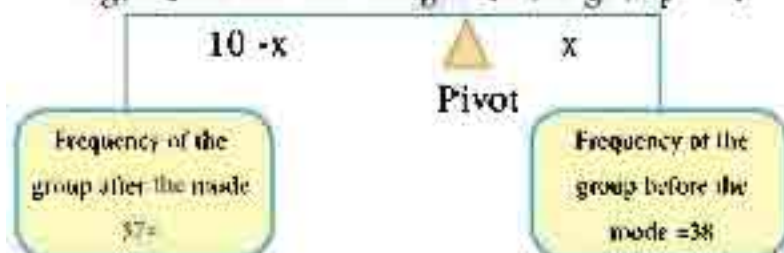
length of the lever = length of the group = 10

The force x it's spindle = The resistance x it's spindle

$$(10 - x) (37) = x (38)$$

$$370 - 37x = 38x$$

Length of the lever = length of the group = 10



$$75x = 370$$

$$x = \frac{370}{75} = 4.9 \therefore$$

$$\text{Mode} = 60 + 4.9 = 64.9 \therefore$$

The privileges and the flaws of the mode:


Privileges :

Easy to calculate

It is not affected by abnormal and very large or very small values

Flaws :

- 1) In the case of classified data with groups, it is calculated using approxemitly method.
- 2)It can not be found if there aren't values that are repeated more than the others.
- 3) There might be more than one mode if there are values that are repeated equally.



Exercises (7-1)

Q1 / Define the arithmetic mean, median and the mode

Q2 / The following data represents the ages of a group of student:

17, 18, 17, 15, 16, 18, 16, 17, 15, 19. find

A) The arithmetic mean B) Median C) The mode

Q3 / If the arithmetic mean of the monthly income of 5 people is (40000) Iraqi dinars. what is the total of their incomes?

Q4 / The following table shows the temperatures in a city during 90 days in the summer

Temperature groups	20-	24-	28-	32-	36-	40-	44-48	sum
Number of days	8	10	18	23	15	9	7	90

Find A) The arithmetic mean B) Median C) The mode

Q5 / The following table shows the wages of 60 teachers at a school. find the arithmetic mean of their wages

Wage in thousands of dinar	150-	160-	170-	180-	190-	200-210
Number of teachers	5	10	15	20	7	3

Q6 / The following table shows the daily profits of some shops in a city. find the arithmetic mean of their profits

Daily profit in thousands of dinars	4-	8-	12-	16-	20-	24-28
Number of shops	8	10	15	20	12	6

[7-5] Measures of Variation

For every set of numbers, there is an arithmetic mean and the numbers of the set might be distributed close to it or far away from it. If the numbers are distributed close to their arithmetic mean, their measures of variation are low, and if the numbers are distributed far away from their arithmetic mean, their measures of variation are high

Ex: The arithmetic mean of the numbers 30,40,50,60,70 is 50 and the arithmetic mean of the numbers 10, 20 ,90,100,30 is also 50 We can see that the measure of variation in the first set of numbers is low while the measure of variation in the second set of numbers is high

Measures of variations:

The measures of variation that we are going to study are:

1- Range

2- Standard deviation

[7-5-1] Range: is the difference between the largest and the smallest value

The range is not an important measure of variability because it deals with only two of the values of the set. These two values are the largest and the smallest values of the set. So it is greatly affected by the changes in these two values

A)Unclassified Data:

Example 12

What is the range for the following st of numbers 98, 24, 68 , 35, 12

Solution :

$$R = 98 - 12 = 86$$

B) Classified Data:

Example 13

Find the range:

Groups	5-	15-	25-	35-	45-55
frequency	3	8	15	14	7

Solution

Range = highest value of the last group - the lowest value of the first group

$$R = 55 - 5 = 50$$

[7-5-2] Standard deviation

The standard deviation is one of the mostly used measures of variation. if we have n from the terms x_1, x_2, \dots, x_n and their arithmetic mean is \bar{x} . then these terms are close to each other if they are close to their arithmetic mean \bar{x} , meaning that their deviation from \bar{x} is small

So the deviation of the terms from their arithmetic mean can be used to measure variation, and that can be done by taking the median of these deviations

Definition(7-4)

Standard deviation

it is the positive square root of the mean for the squared deviations for the values of the distribution expression off their arithmetic mean and it is denoted by S

$$S = \sqrt{\frac{\sum x^2}{n} - (\bar{x})^2}$$

Example 14

Find the standard deviation for the following values:

1, 3, 5, 7, 9

Solution**Sum**

$$\bar{X} = \frac{x_1 + x_2 + \dots + x_n}{n} = \frac{25}{5} = 5$$

$$S = \sqrt{\frac{\sum x^2}{n} - (\bar{x})^2}$$

$$S = \sqrt{\frac{165}{5} - 25} = \sqrt{33 - 25}$$

$$\text{Standard deviation} \dots \sqrt{8} = 2\sqrt{2}$$

Note

When a constant number is subtracted from all the values, the value of the standard deviation remains constant as in example 15

Example 15

Subtract 1 from the numbers [1,3,5,7,9] then find the standard deviation of the new values. Compare your answer with example 14, what do you observe

Solution**Sum**

The numbers 1, 3, 5, 7, 9

we subtract 1 : 0, 2, 4, 6, 8

$$\bar{X} = \frac{8 + 6 + 4 + 2 + 0}{5} = \frac{20}{5} = 4$$

$$S = \sqrt{\frac{\sum x^2}{n} - (\bar{x})^2}$$

$$S = \sqrt{\frac{120}{5} - 16} = \sqrt{24 - 16}$$

$$\text{Standard deviation} \dots \sqrt{8} = 2\sqrt{2}$$

We observe that the standard deviation didn't change

Standard Degree :

Definition (7-4)

Standard degree is defined as the quotient of the deviation of the that variable subtracted from the arithmetic mean of that set and the standard deviation

$$\text{Meaning that : } SD = \frac{X - \bar{X}}{S}$$

Correlation [7 - 5 - 3]

Definition (7-5)

Correlation: It is the mathematical relation between two variables so that if one of them changes to a given direction, the other one tends to change to a given direction too. if the change occurs in only one way it is called a positive correlation. and if the change occurs in two opposite ways, it is called a negative correlation

Correlation coefficient (r) between the variables x,y

We calculate the correlation coefficient r

Where x = The arithmetic mean of the variable x

y = The arithmetic mean of the variable y

S = The standard deviation of the variable x

S = The standard deviation of the variable y

$$r = \frac{\frac{\sum x y}{n} - \bar{x} \bar{y}}{S_x S_y}$$

Some of the properties of (r)

r is positive in the case of positive correlation

r=1 in an absolute direct correlation

r is negative in an inverse correlation

r=-1 in an absolute inverse correlation

r=0 in the lack of correlation

we can observe that the value of correlation coefficient belong to [-1,1] and the close r the value of r is from +1 or -1, the stronger the correlation between the two variables and the closer it is to 0 the closer it is to the lack of correlation

Example 16

Find the correlation coefficient between the variables x,y for x=5

x	1	2	3	4	5
y	2	4	6	8	10

Then show it's type

x	y	x^2	y^2	xy
1	2	1	4	2
2	4	4	16	8
3	6	9	36	18
4	8	16	64	32
5	10	25	100	50
15	30	55	220	110

Solution

$$\bar{X} = \frac{15}{5} = 3$$

$$\bar{Y} = \frac{30}{5} = 6$$

$$S_x = \sqrt{\frac{55}{5} - 9} = \sqrt{2}$$

$$S_y = \sqrt{\frac{220}{5} - 36} = \sqrt{8} = 2\sqrt{2}$$

Sum

$$r = \frac{\frac{\sum xy}{n} - \bar{x}\bar{y}}{S_x S_y} = \frac{\frac{110}{5} - (3)(6)}{(\sqrt{2})(2\sqrt{2})}$$

$$r = \frac{22 - 18}{4} = \frac{4}{4} = 1$$

∴ The type of correlation is direct

$$SD = \frac{x - \bar{x}}{S_x}$$

$$\therefore SD = \frac{5 - 3}{\sqrt{2}} = \frac{2}{\sqrt{2}} = \sqrt{2}$$

Example 18

Find the correlation coefficient an between x,y and show it's type

x	-5	-2	1	4	7
y	9	6	3	0	-3

Solution

x	y	x^2	y^2	xy
5 -	9	25	81	-45
-2	6	4	36	-12
1	3	1	9	3
4	0	16	0	0
7	-3	49	9	-21
5	15	95	135	-75
Sum				

$$\bar{X} = \frac{5}{5} = 1$$

$$\bar{Y} = \frac{15}{5} = 3$$

$$S_x = \sqrt{\frac{95}{5} - (1)^2} = \sqrt{19 - 1} = \sqrt{18} = 3\sqrt{2}$$

$$S_y = \sqrt{\frac{135}{5} - (3)^2} = \sqrt{27 - 9} = \sqrt{18} = 3\sqrt{2}$$

$$r = \frac{\frac{\sum xy}{n} - \bar{x}\bar{y}}{S_x S_y} = \frac{\frac{-75}{5} - (1)(3)}{3\sqrt{2} \times 3\sqrt{2}}$$

type= absolute inverse correlation

$$r = \frac{-15 - 3}{(9)(2)} = \frac{-18}{(18)} = -1$$



Exercises 7-2

Q1 /

A) Find the range for the following numbers: 3,0,8,7,9,12

B) Find the range from the following table

Groups	20 –	22 –	24 –	26 –	28 –	30 – 32
frequency	5	10	20	10	5	2

Q2 / Define the standard deviation then find the standard deviation for the following numbers: 2,4,6,8,10

Q3 / Find the standard deviation for the numbers: 5,7,1,2,6,3. then add 5 to all the values and prove that adding 5 does not affect the value of the standard deviation but affects the value of arithmetic mean

Q4 / Find the correlation coefficient between x,y then show it's type.

x	1	2	3
y	2	4	6

Q5 / If you multiply all the values of x in the previous question by 4, you'll get a new table. find the new correlation coefficient .

x	4	8	12
y	2	4	6

Q6 / Find the correlation coefficient between x,y and show it

x	13-	9-	5-	1-	3
y	+3	+1	-1	-3	-5

Contents

Introduction	3
Chapter 1: Mathematical Logic	4
Chapter 2: Equations and Inequalities	21
Chapter 3: Roots and Exponent	40
Chapter 4: Trigonometry	58
Chapter 5: Vectors	89
Chapter 6: Analytical Geometry	109
Chapter 7: Statistics	135
Contents	156